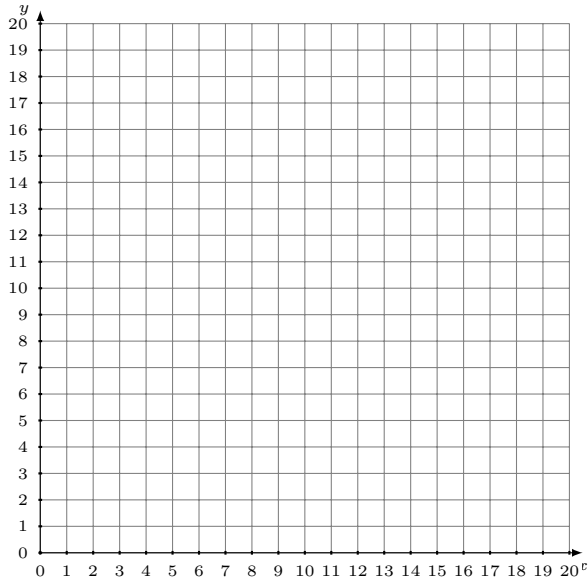


# Graficar Sistemas Lineales (E)

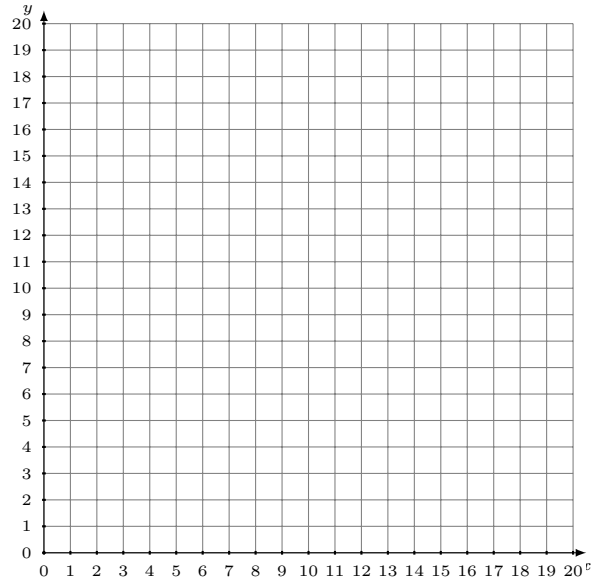
Grafique cada sistema lineal y halle su solución.

1.  $11x - 9y = -27$   
 $4x - 9y = -90$



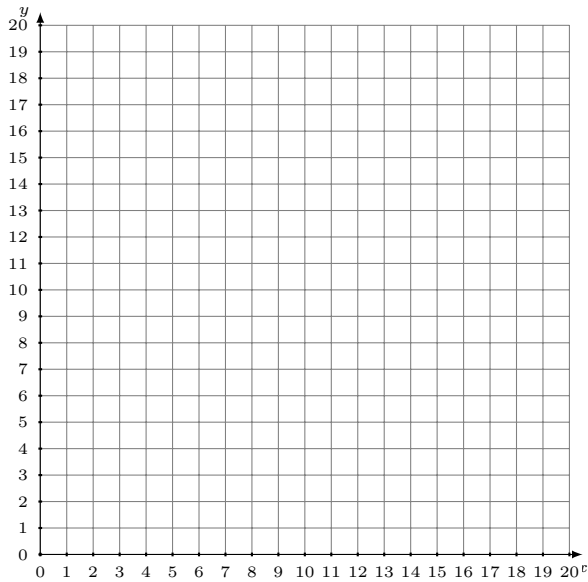
Solución: (----,----)

2.  $9x + 14y = 210$   
 $x - 7y = -28$



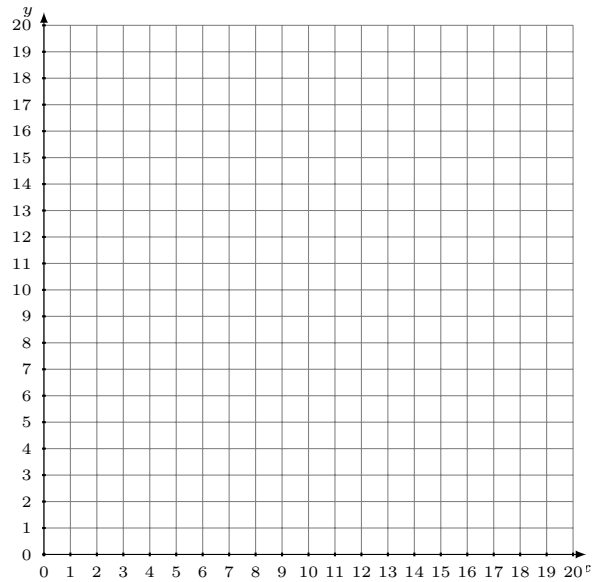
Solución: (----,----)

3.  $x - 5y = 0$   
 $17x + 5y = 90$



Solución: (----,----)

4.  $x + 2y = 24$   
 $3x + 4y = 52$



Solución: (----,----)