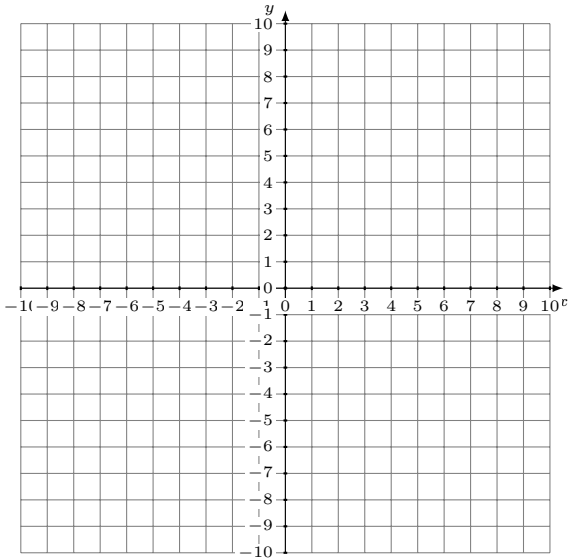


Graficar Sistemas Lineales (E)

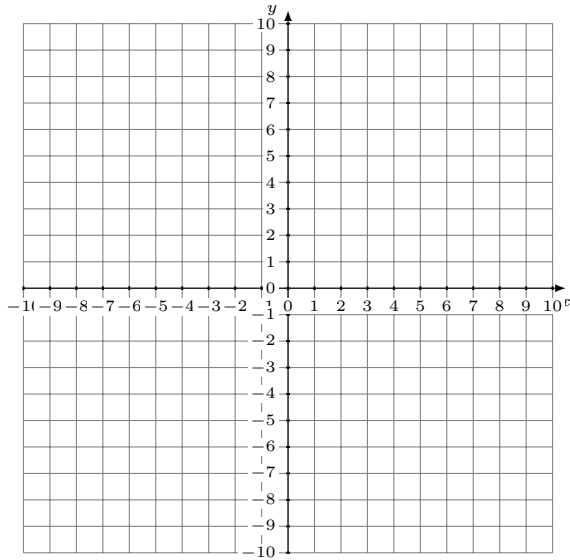
Grafique cada sistema lineal y halle su solución.

1. $8x - 7y = -7$
 $13x - 7y = 28$



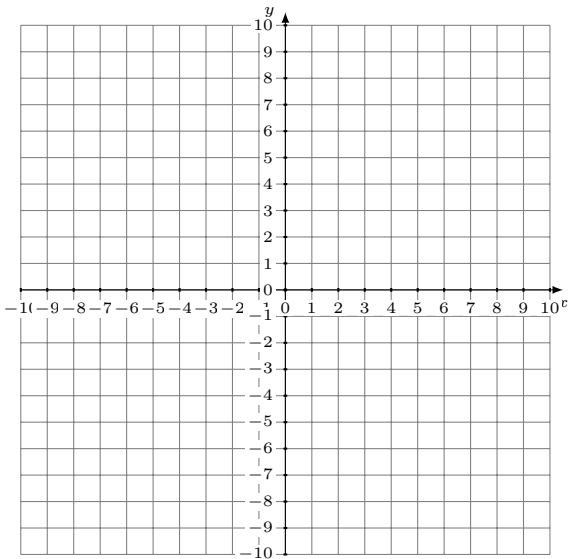
Solución: (----,----)

2. $5x - 3y = -6$
 $2x - y = -4$



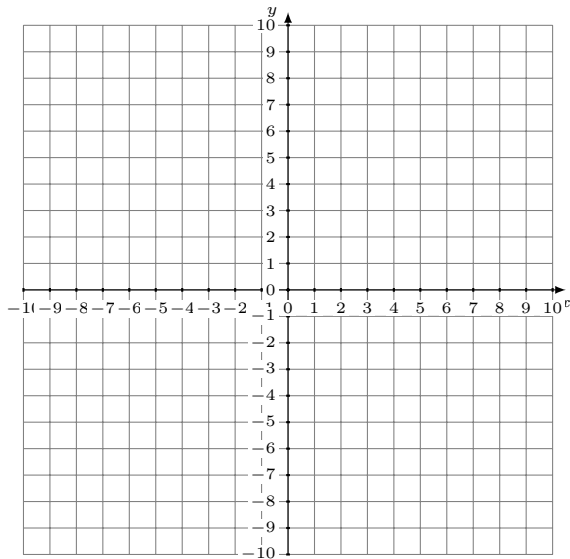
Solución: (----,----)

3. $2x + y = 9$
 $16x - y = 9$



Solución: (----,----)

4. $3x + 4y = 8$
 $7x + 2y = -18$



Solución: (----,----)