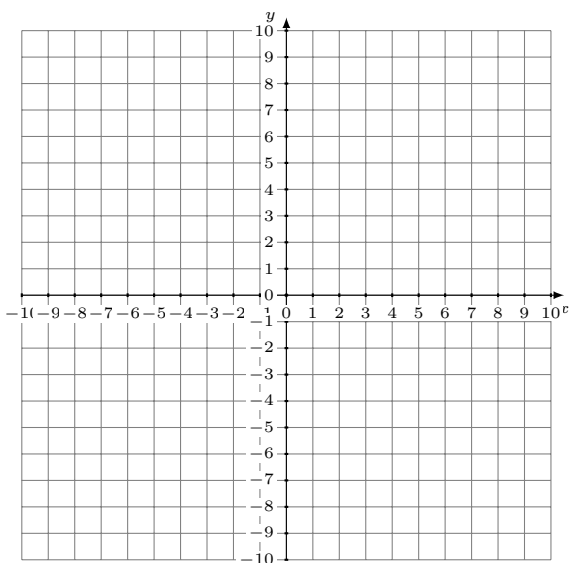


Graficar Sistemas Lineales (B)

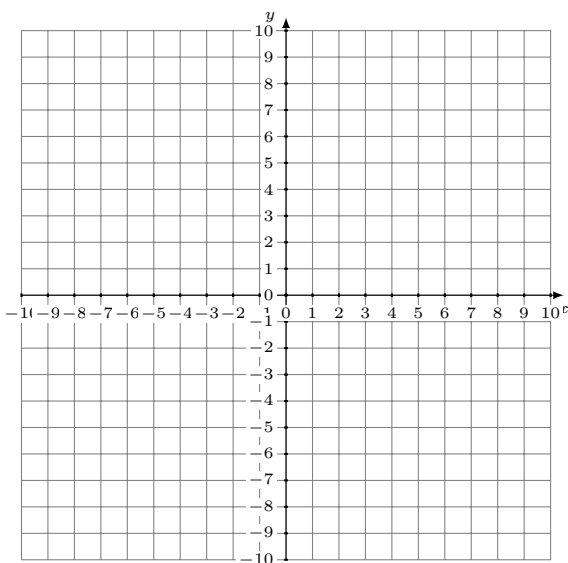
Grafique cada sistema lineal y halle su solución.

1. $y = 9x + 2$
 $y = 14x + 7$



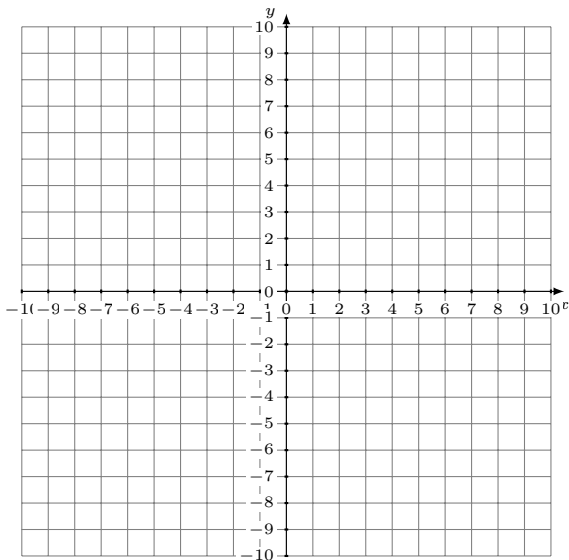
Solución: (----,----)

2. $y = -4$
 $y = x - 6$



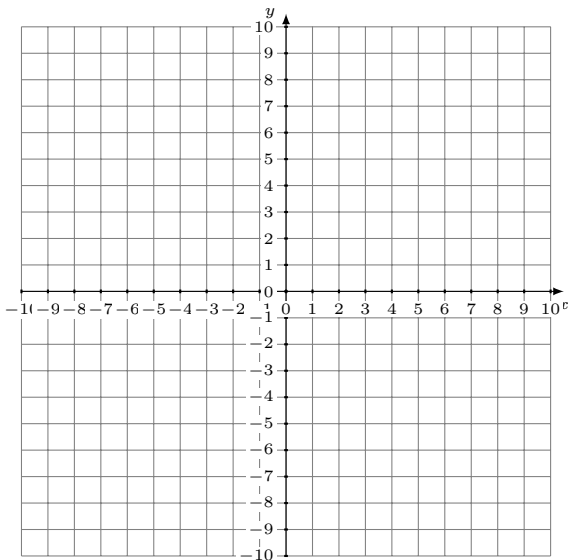
Solución: (----,----)

3. $y = \frac{17}{4}x + 9$
 $y = \frac{11}{4}x + 3$



Solución: (----,----)

4. $y = \frac{9}{4}x$
 $y = \frac{3}{4}x - 6$



Solución: (----,----)