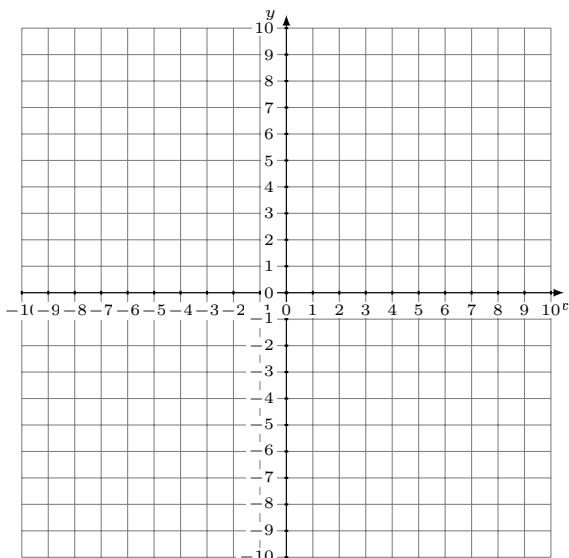


# Graficar Sistemas Lineales (C)

Grafique cada sistema lineal y halle su solución.

1.  $y = \frac{2}{3}x + 1$   
 $y = -\frac{1}{3}x + 4$



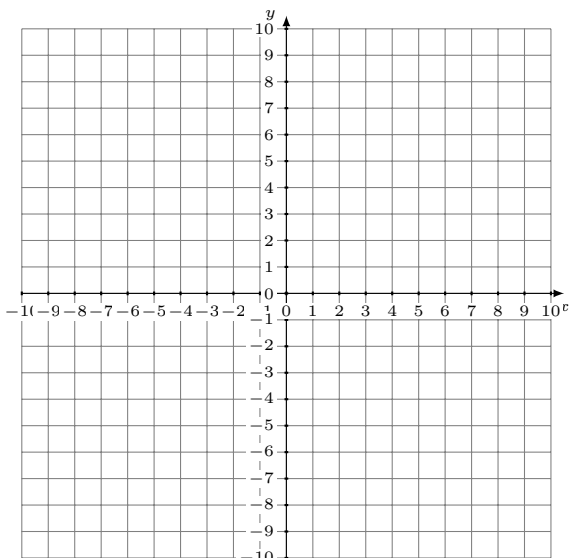
Solución: (----,----)

2.  $y = \frac{3}{2}x + 5$   
 $y = \frac{1}{6}x - 3$



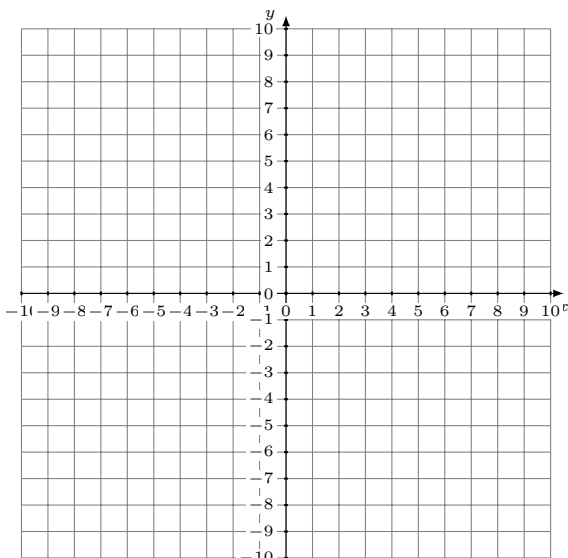
Solución: (----,----)

3.  $y = -\frac{1}{4}x + 2$   
 $y = -\frac{9}{4}x - 6$



Solución: (----,----)

4.  $y = \frac{10}{9}x - 1$   
 $y = \frac{2}{3}x + 3$



Solución: (----,----)