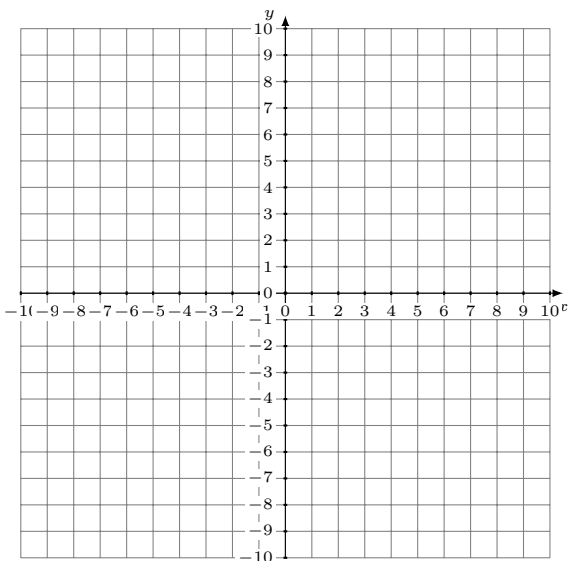


Graficar Sistemas Lineales (E)

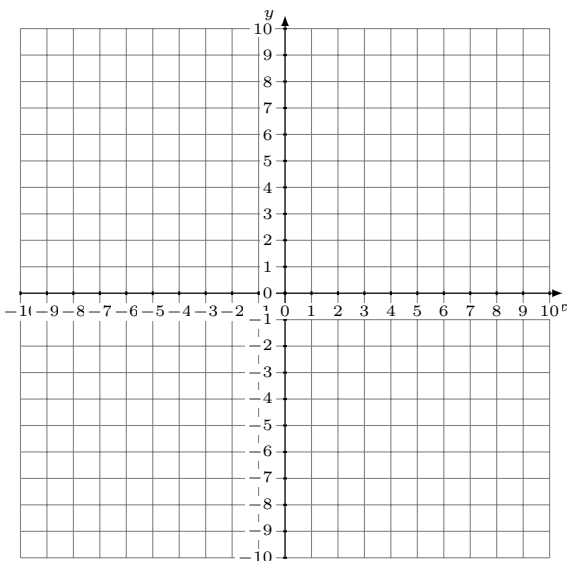
Grafique cada sistema lineal y halle su solución.

1. $y = -3x - 5$
 $y = -4x - 9$



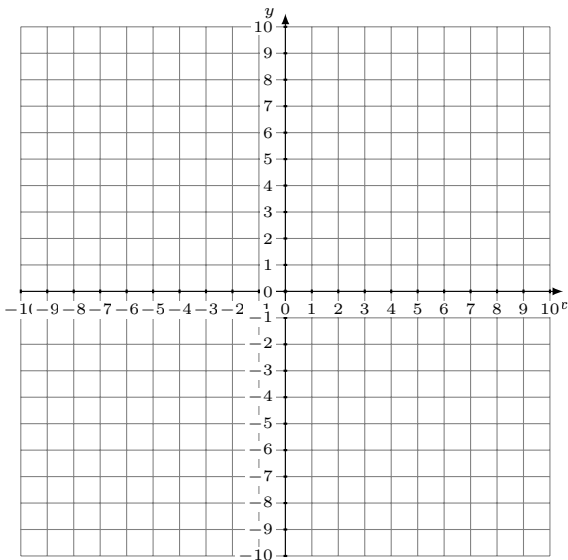
Solución: (----,----)

2. $y = -x - 1$
 $y = -\frac{11}{2}x + 8$



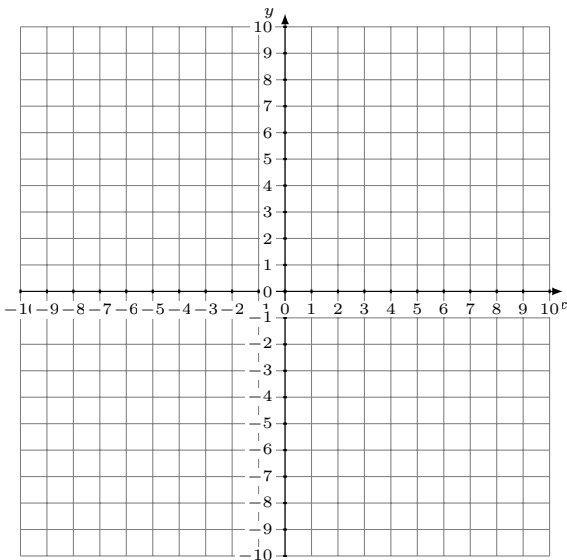
Solución: (----,----)

3. $y = -\frac{14}{3}x + 5$
 $y = -\frac{11}{3}x + 2$



Solución: (----,----)

4. $y = \frac{5}{4}x + 1$
 $y = \frac{3}{2}x$



Solución: (----,----)