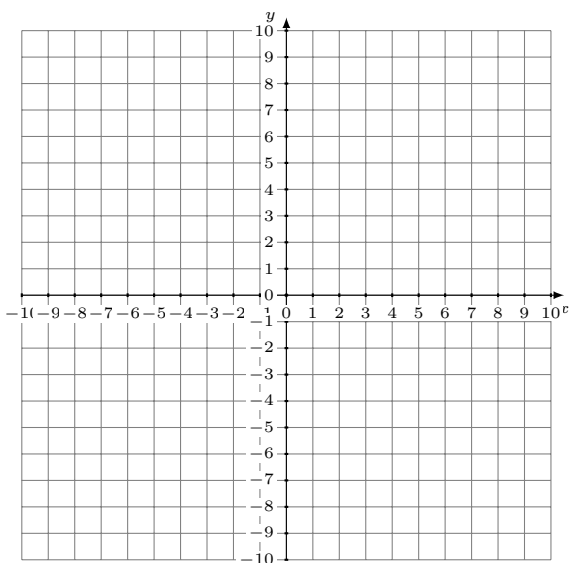


Graficar Sistemas Lineales (F)

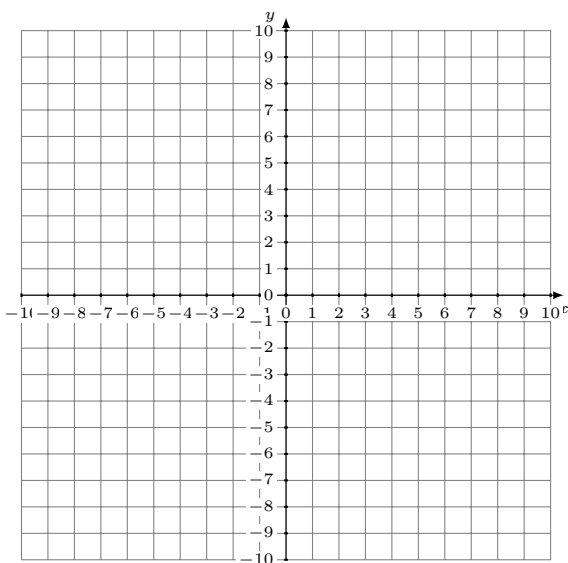
Grafique cada sistema lineal y halle su solución.

1. $y = 6x - 9$
 $y = -5x + 2$



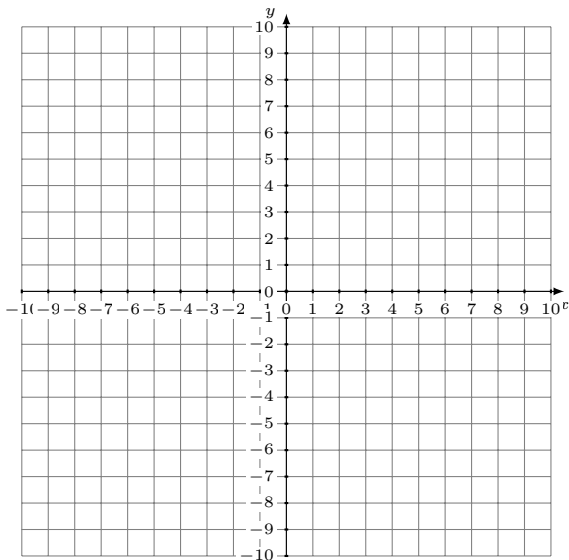
Solución: (----,----)

2. $y = -x + 4$
 $y = -4x - 2$



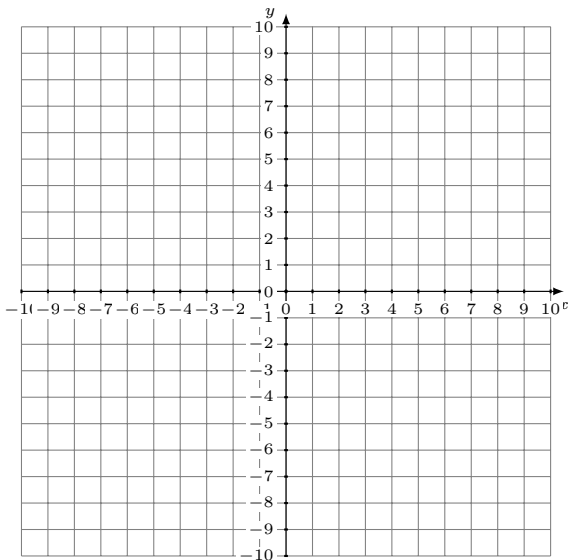
Solución: (----,----)

3. $y = \frac{7}{9}x - 1$
 $y = \frac{2}{3}x - 2$



Solución: (----,----)

4. $y = 3x - 7$
 $y = -\frac{3}{4}x + 8$



Solución: (----,----)