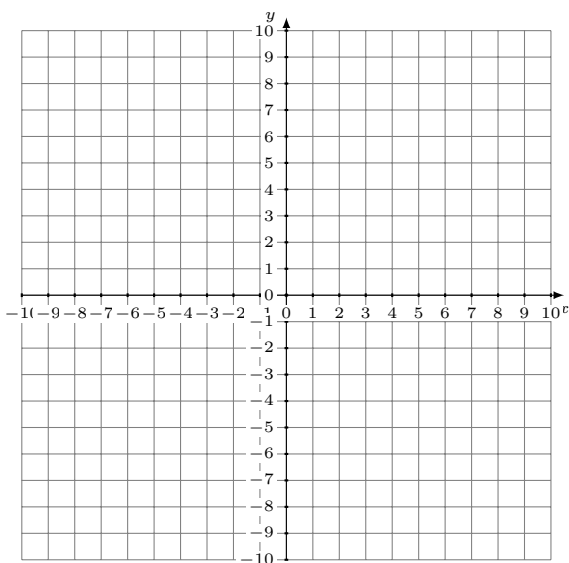


Graficar Sistemas Lineales (A)

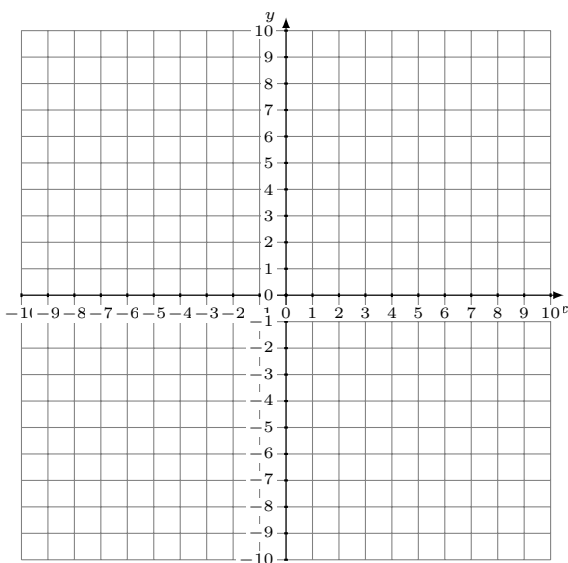
Grafique cada sistema lineal y halle su solución.

1. $3x + 4y = 12$
 $15x + 8y = -48$



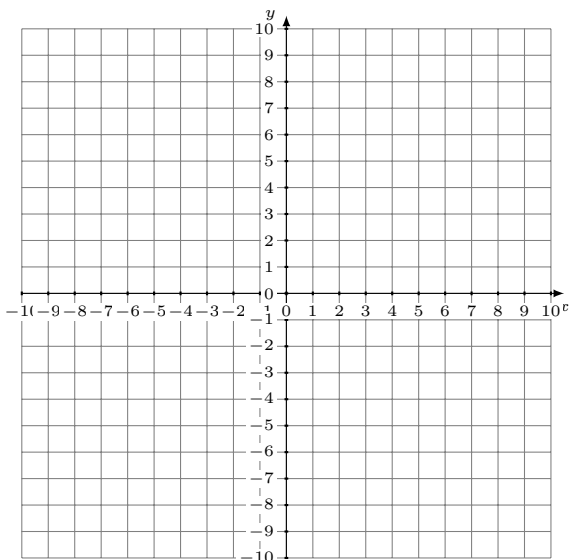
Solución: (----,----)

2. $5x + 4y = 12$
 $x - 4y = 12$



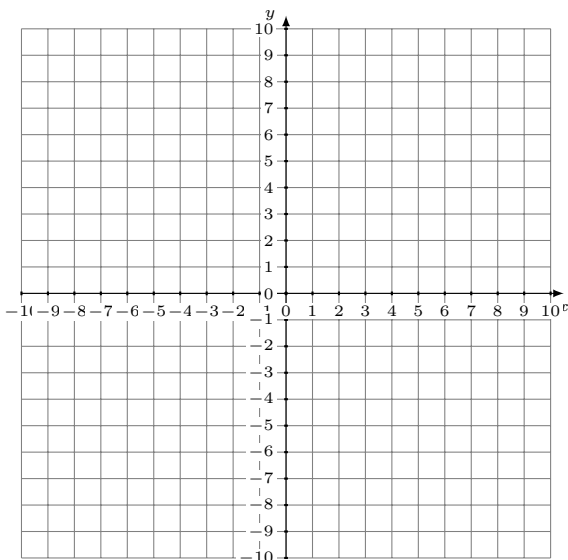
Solución: (----,----)

3. $y = \frac{1}{2}x - 5$
 $y = \frac{5}{2}x - 1$



Solución: (----,----)

4. $y = -3$
 $6x + 7y = -63$



Solución: (----,----)