

Graficar Sistemas Lineales (H)

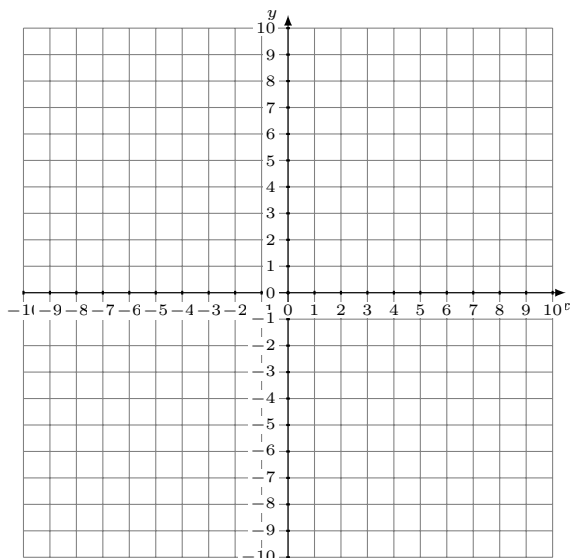
Grafique cada sistema lineal y halle su solución.

1. $7x - 5y = -45$
 $y = -\frac{4}{5}x - 2$



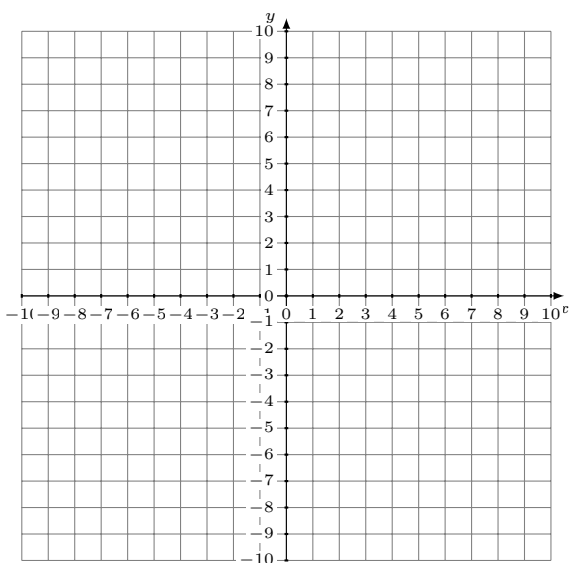
Solución: (----,----)

2. $y = -\frac{5}{2}x - 4$
 $y = \frac{1}{2}x + 8$



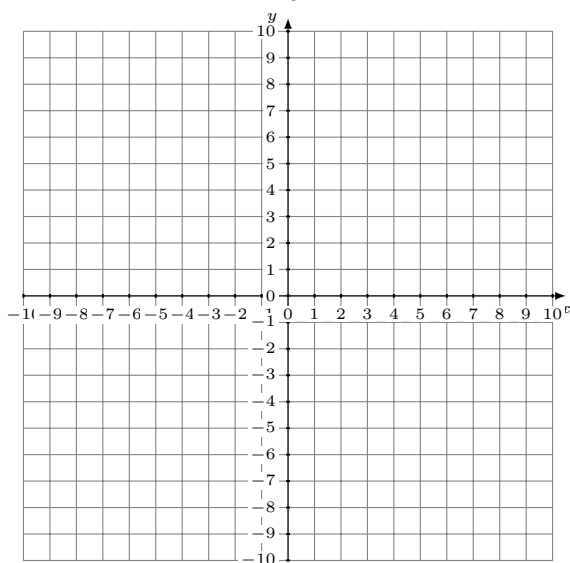
Solución: (----,----)

3. $y = \frac{1}{9}x - 7$
 $7x - 9y = 9$



Solución: (----,----)

4. $y = -x + 9$
 $y = -\frac{1}{3}x + 7$



Solución: (----,----)