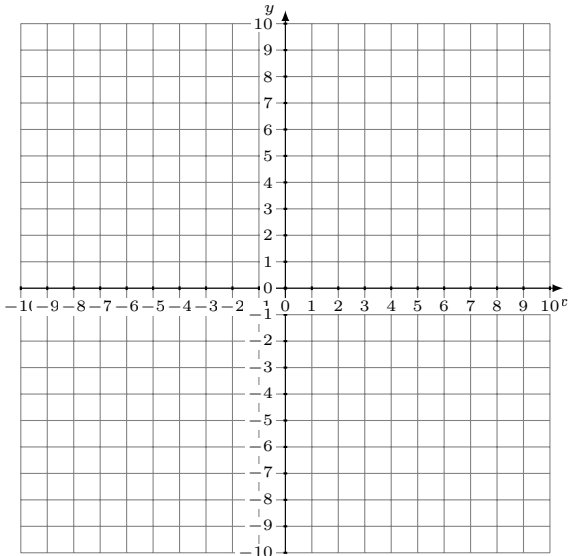


Sistemas Lineales Dependientes (H)

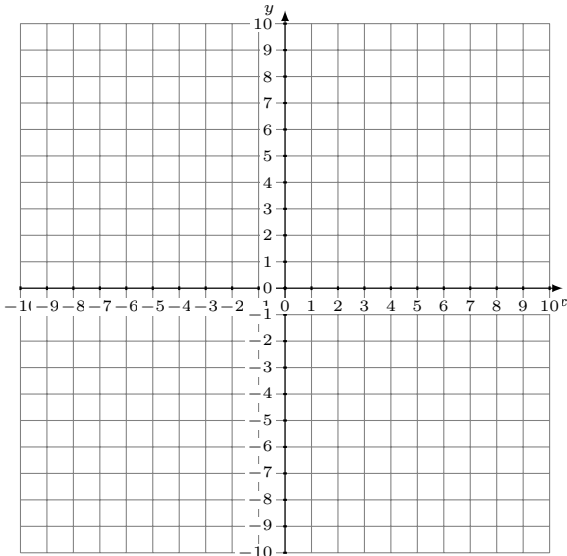
Grafique cada sistema e identifique el sistema dependiente.

1. $11x - 2y = 12$
 $y = \frac{11}{2}x - 6$



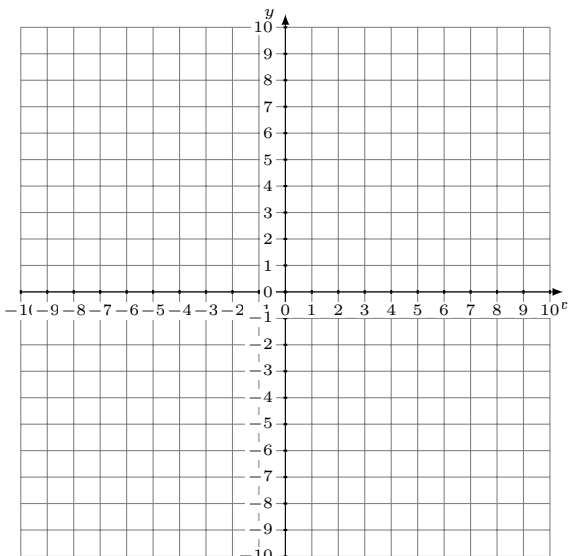
Solución: (----,----)

2. $13x + 9y = 54$
 $y = -\frac{2}{9}x - 5$



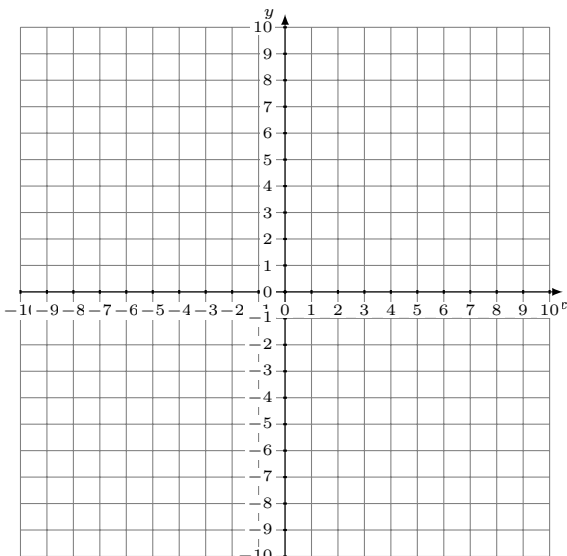
Solución: (----,----)

3. $5x + 4y = 12$
 $y = \frac{1}{4}x - 3$



Solución: (----,----)

4. $y = 2x + 5$
 $3x + y = 0$



Solución: (----,----)