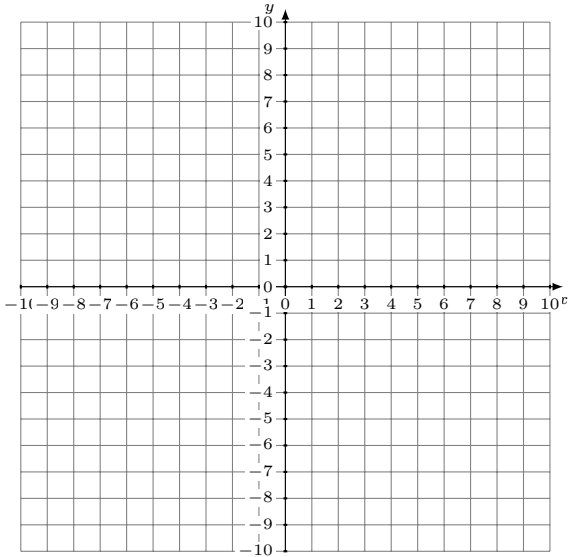


# Sistemas Lineales Inconsistentes (A)

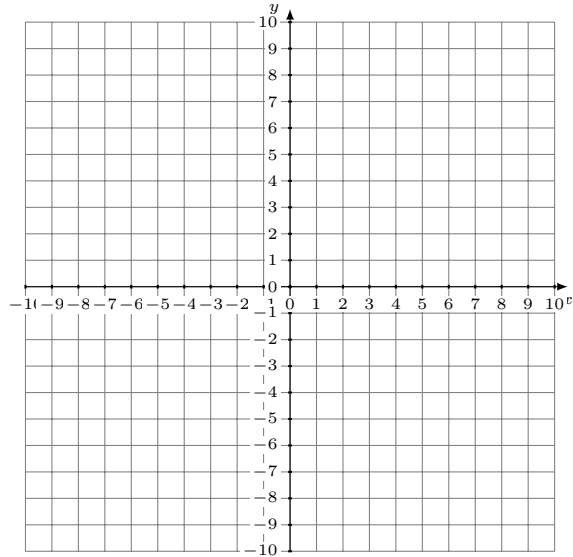
Grafique cada sistema e identifique el sistema inconsistente.

1.  $y = \frac{6}{5}x - 2$   
 $y = \frac{16}{5}x + 8$



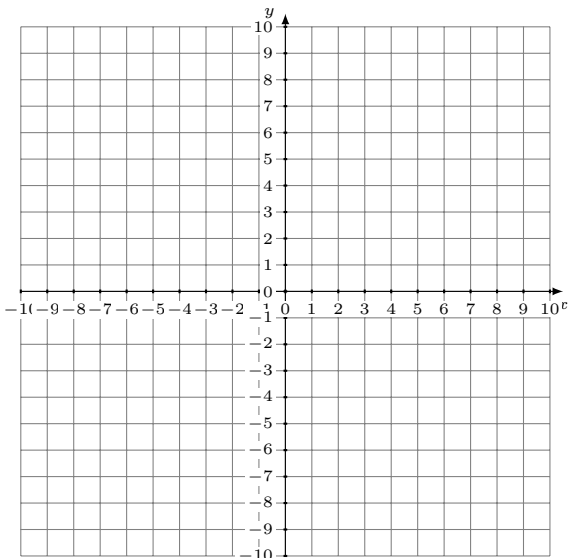
Solución: (\_\_\_\_,\_\_\_\_)

2.  $y = 4x + 4$   
 $4x - y = 2$



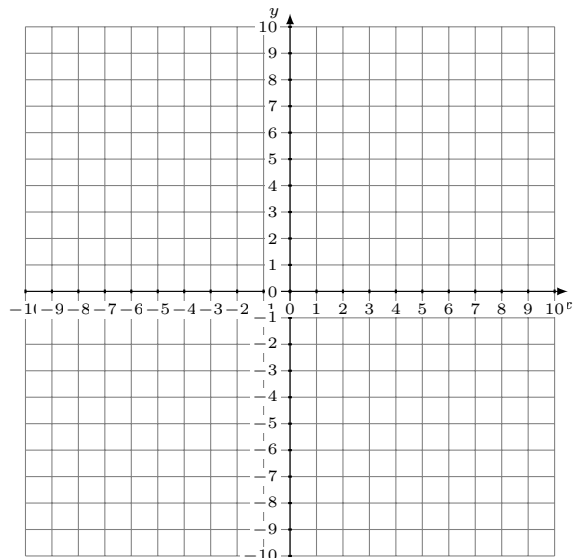
Solución: (\_\_\_\_,\_\_\_\_)

3.  $y = 9$   
 $2x - y = 5$



Solución: (\_\_\_\_,\_\_\_\_)

4.  $x - y = 5$   
 $y = -7$



Solución: (\_\_\_\_,\_\_\_\_)