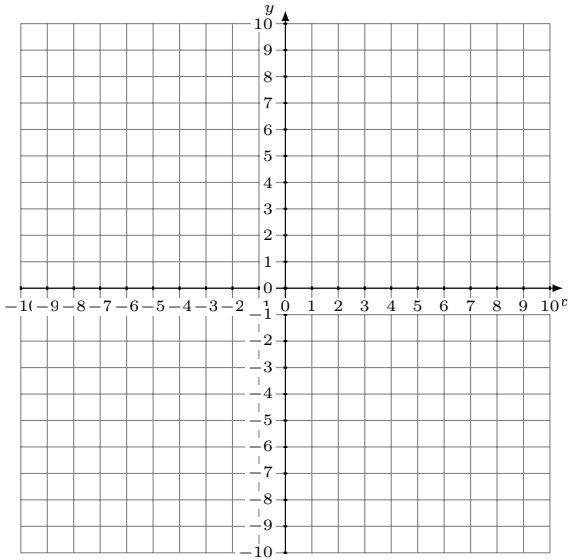


Sistemas Lineales Inconsistentes (D)

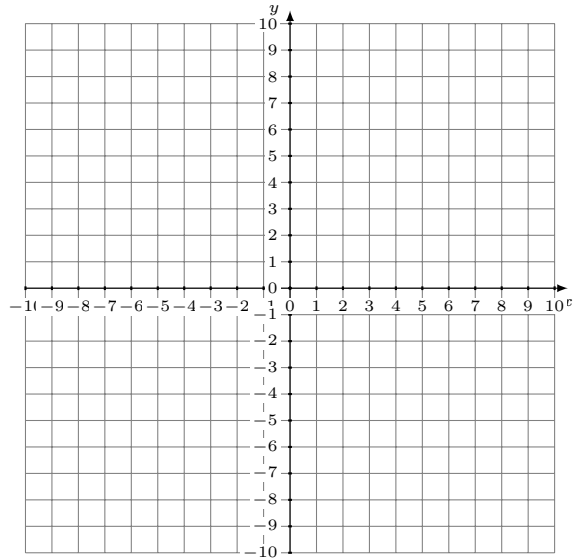
Grafique cada sistema e identifique el sistema inconsistente.

1. $y = 3$
 $11x + 4y = -32$



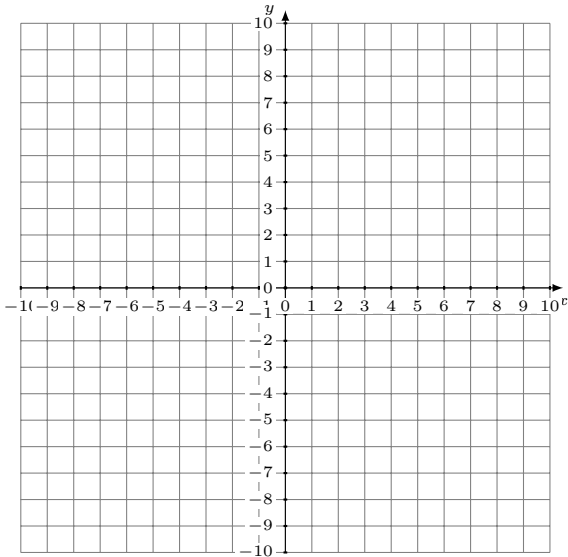
Solución: (----,----)

2. $y = -x - 1$
 $y = -\frac{1}{4}x - 4$



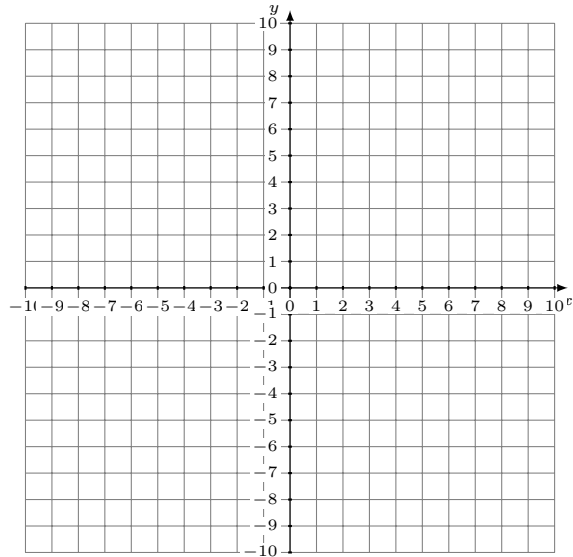
Solución: (----,----)

3. $6x + 5y = 45$
 $y = -\frac{6}{5}x - 5$



Solución: (----,----)

4. $7x + 8y = 40$
 $9x + 8y = 56$



Solución: (----,----)