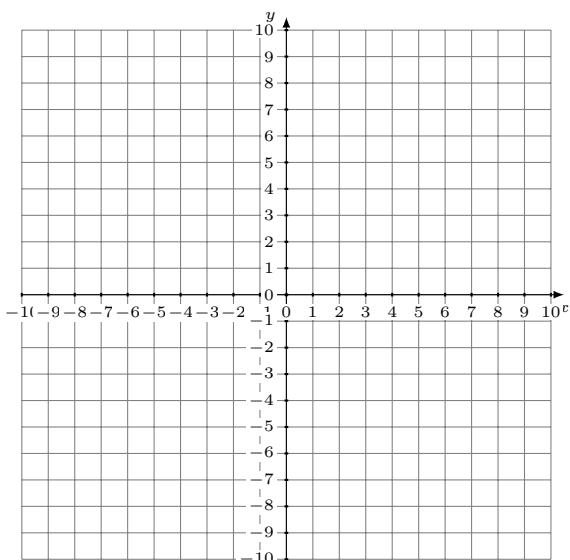


Sistemas Lineales Inconsistentes (F)

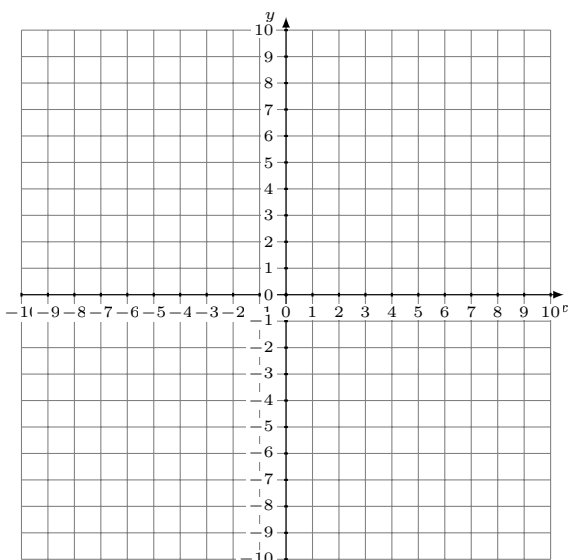
Grafique cada sistema e identifique el sistema inconsistente.

1.
$$y = \frac{8}{5}x$$
$$y = x + 3$$



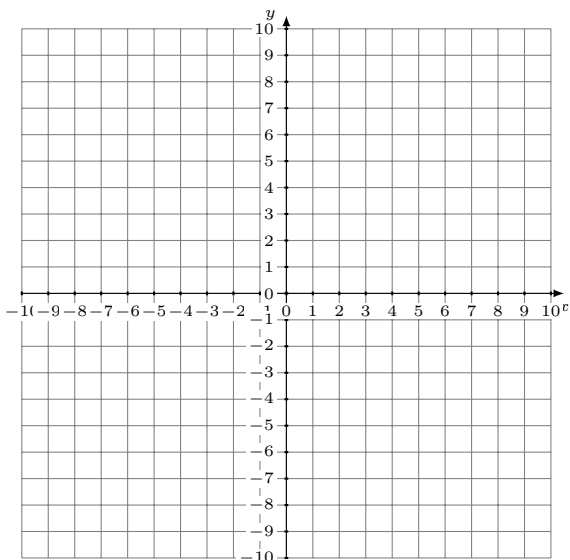
Solución: (----,----)

2.
$$y = \frac{7}{9}x + 1$$
$$y = \frac{17}{9}x - 9$$



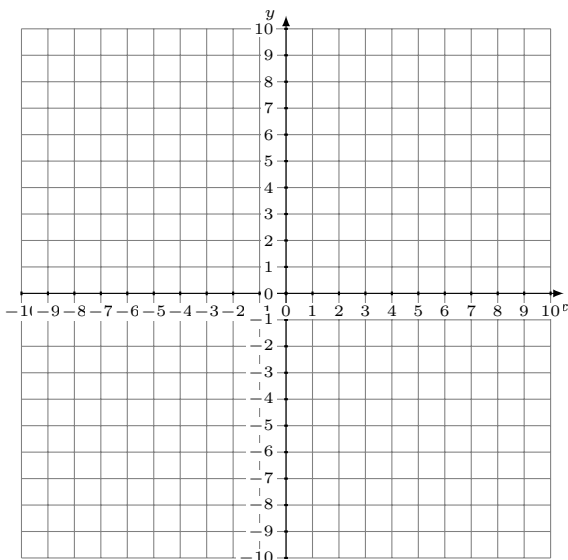
Solución: (----,----)

3.
$$y = -\frac{1}{5}x + 3$$
$$y = \frac{11}{5}x - 9$$



Solución: (----,----)

4.
$$x - 2y = 12$$
$$y = \frac{1}{2}x - 9$$



Solución: (----,----)