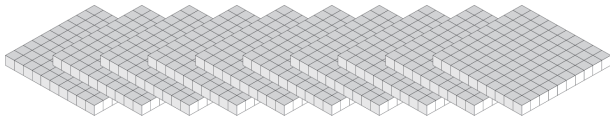
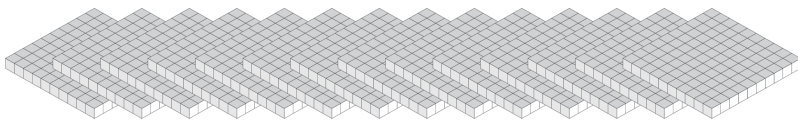
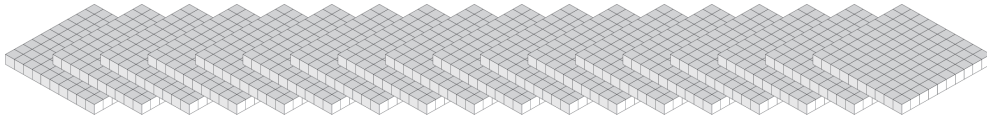


Cambiar Planos por Bloques (I)

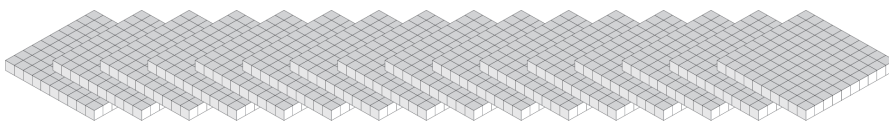
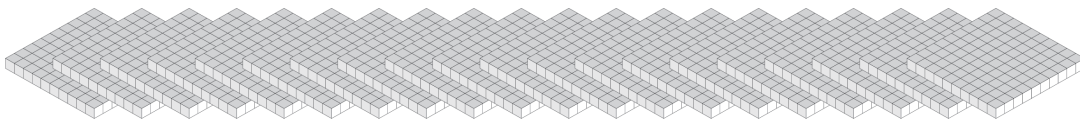
¿Cuántos planos puedes cambiar por bloques y cuántos sobrarían?



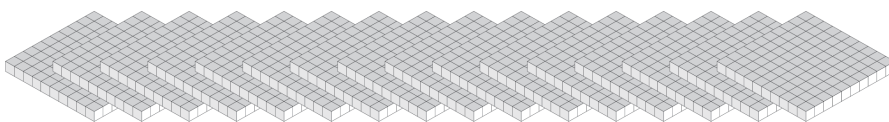
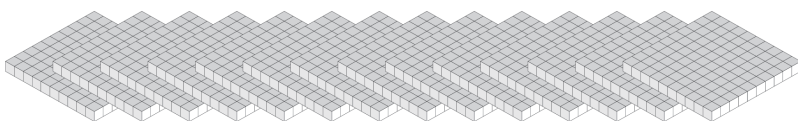
| Bloques | Planos |
|---------|--------|
| | |



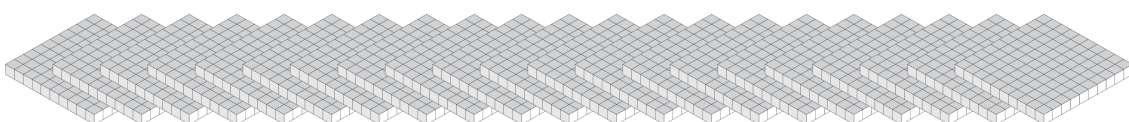
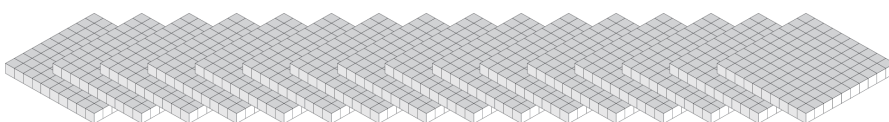
| Bloques | Planos |
|---------|--------|
| | |



| Bloques | Planos |
|---------|--------|
| | |

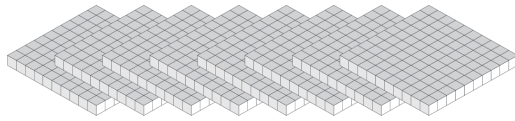
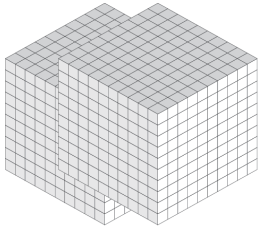


| Bloques | Planos |
|---------|--------|
| | |

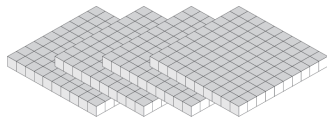
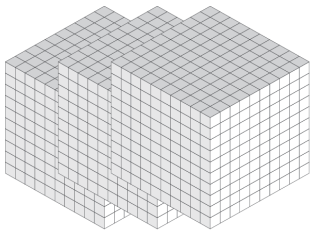


Cambiar Planos por Bloques (I) Respuestas

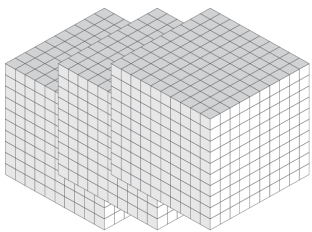
¿Cuántos planos puedes cambiar por bloques y cuántos sobrarían?



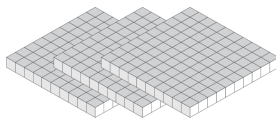
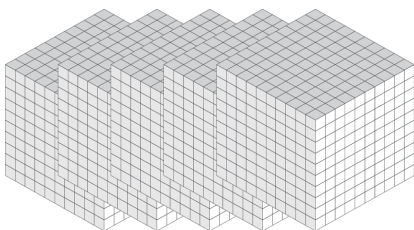
| Bloques | Planos |
|---------|--------|
| 2 | 8 |



| Bloques | Planos |
|---------|--------|
| 3 | 4 |



| Bloques | Planos |
|---------|--------|
| 3 | 0 |



| Bloques | Planos |
|---------|--------|
| 5 | 3 |