


# Representar Números (D)

¿Qué número se muestra en cada grupo de bloques base diez?



1000



100




10



1

# Representar Números (D) Respuestas

¿Qué número se muestra en cada grupo de bloques base diez?



1000



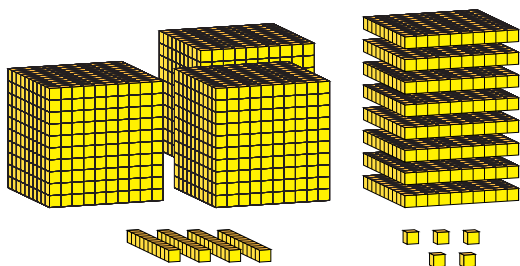
100



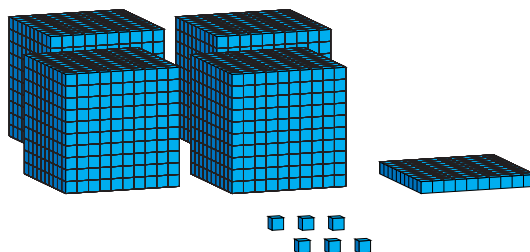
10



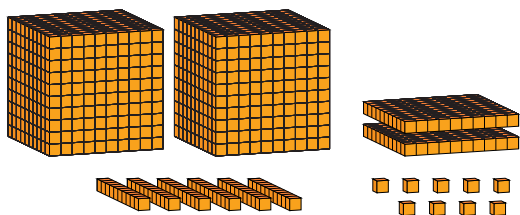
1



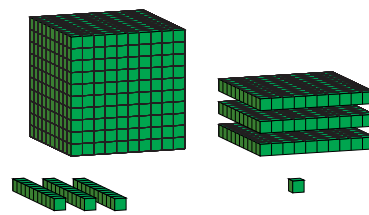
3845




4106



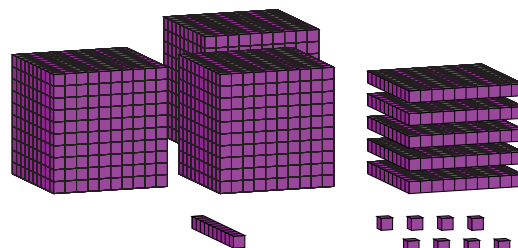
2269



1331



1620



3518