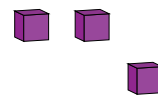
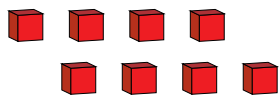
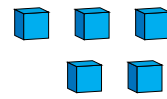
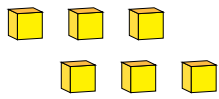


# Representar Números (C)

¿Qué número se muestra en cada grupo de bloques base diez?



1

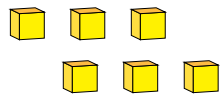


# Representar Números (C) Respuestas

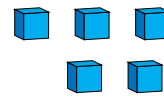
¿Qué número se muestra en cada grupo de bloques base diez?



1



6



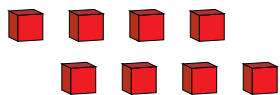
5



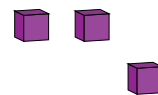
2



1



8



3