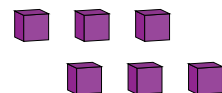
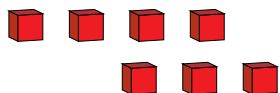
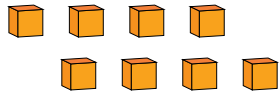
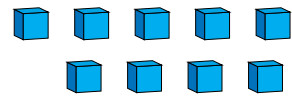
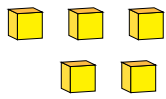


# Representar Números (D)

¿Qué número se muestra en cada grupo de bloques base diez?



1

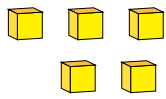


# Representar Números (D) Respuestas

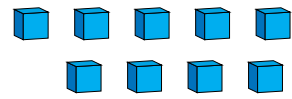
¿Qué número se muestra en cada grupo de bloques base diez?



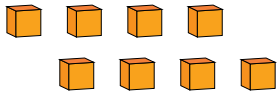
1



5



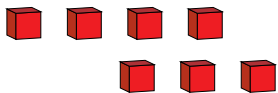
9



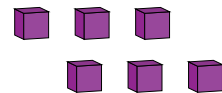
8



1



7



6