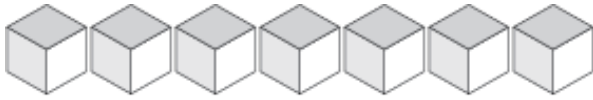
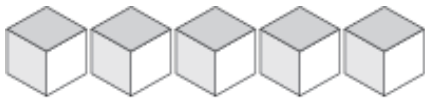


# Representar Números (D)

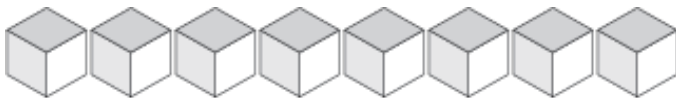
¿Qué número se muestra en cada grupo de bloques base diez?



\_\_\_\_\_



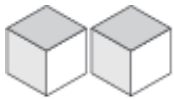
\_\_\_\_\_



\_\_\_\_\_



\_\_\_\_\_



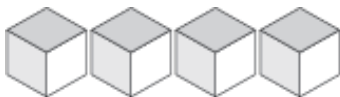
\_\_\_\_\_



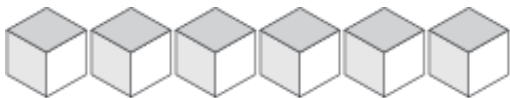
\_\_\_\_\_



\_\_\_\_\_



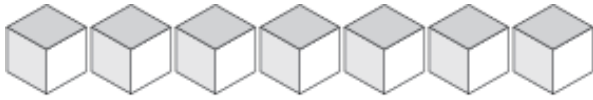
\_\_\_\_\_



\_\_\_\_\_

# Representar Números (D) Respuestas

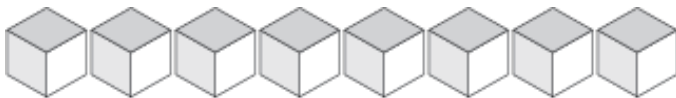
¿Qué número se muestra en cada grupo de bloques base diez?



7



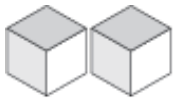
5



8



1



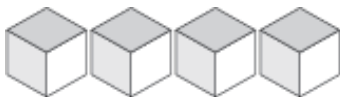
2



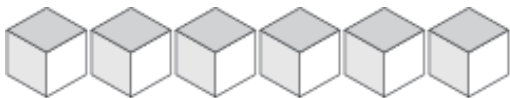
9



3



4



6