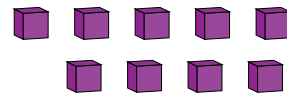
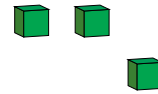
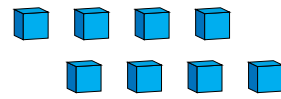
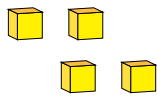


Representar Números (E)

¿Qué número se muestra en cada grupo de bloques base diez?



1

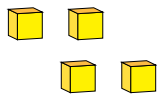


Representar Números (E) Respuestas

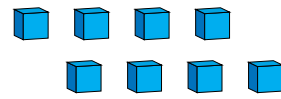
¿Qué número se muestra en cada grupo de bloques base diez?



1



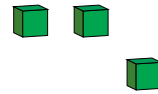
4



8



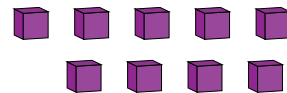
1



3



2



9