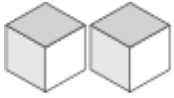
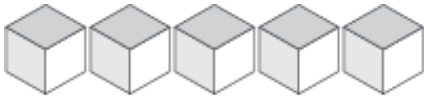


# Representar Números (E)

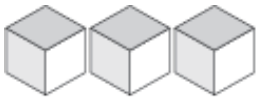
¿Qué número se muestra en cada grupo de bloques base diez?



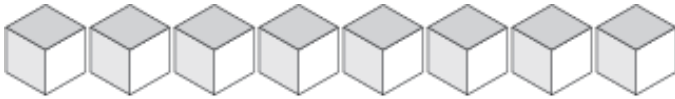
\_\_\_\_\_



\_\_\_\_\_



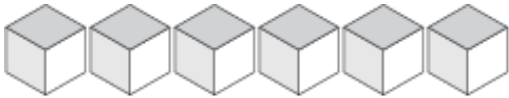
\_\_\_\_\_



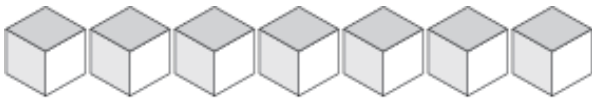
\_\_\_\_\_



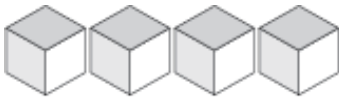
\_\_\_\_\_



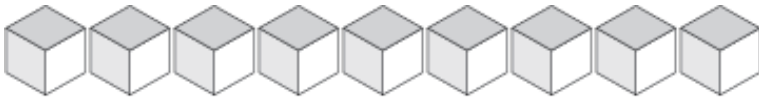
\_\_\_\_\_



\_\_\_\_\_



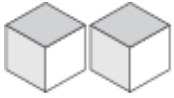
\_\_\_\_\_



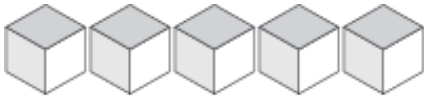
\_\_\_\_\_

# Representar Números (E) Respuestas

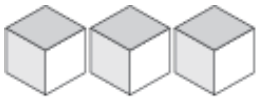
¿Qué número se muestra en cada grupo de bloques base diez?



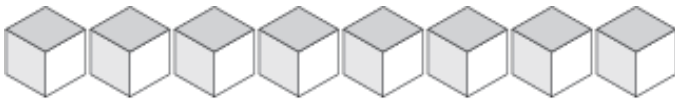
2



5



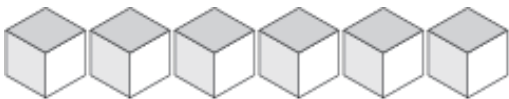
3



8



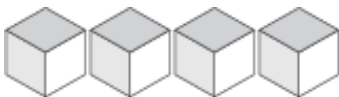
1



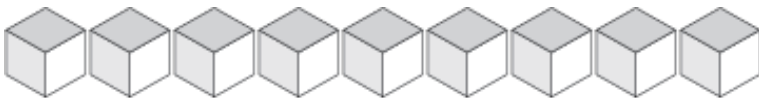
6



7



4



9