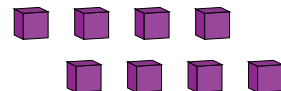
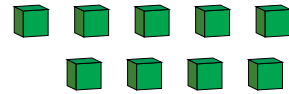
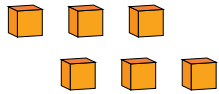
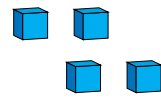
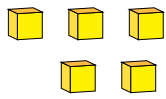


Representar Números (G)

¿Qué número se muestra en cada grupo de bloques base diez?



1

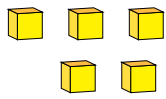


Representar Números (G) Respuestas

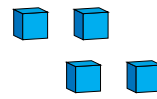
¿Qué número se muestra en cada grupo de bloques base diez?



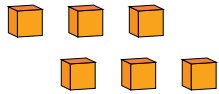
1



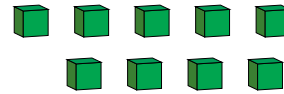
5



4



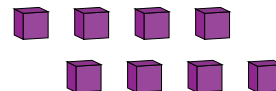
6



9



2



8