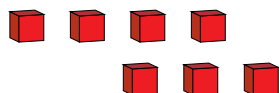
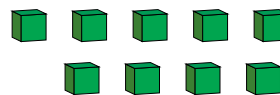
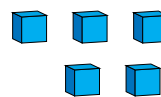
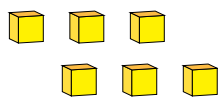


# Representar Números (A)

¿Qué número se muestra en cada grupo de bloques base diez?



1

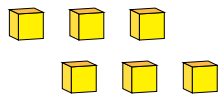


# Representar Números (A) Respuestas

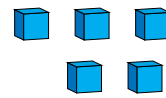
¿Qué número se muestra en cada grupo de bloques base diez?



1



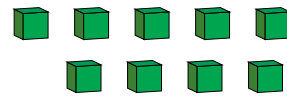
6



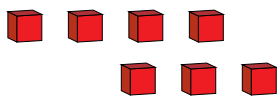
5



1



9



7



2