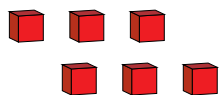
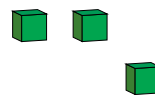
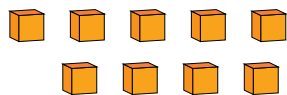
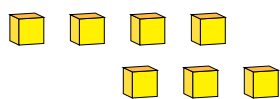


Representar Números (B)

¿Qué número se muestra en cada grupo de bloques base diez?



1

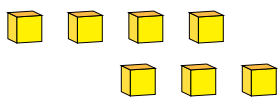


Representar Números (B) Respuestas

¿Qué número se muestra en cada grupo de bloques base diez?



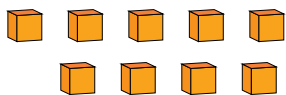
1



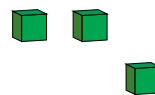
7



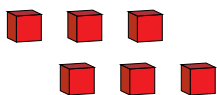
2



9



3



6



1