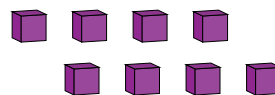
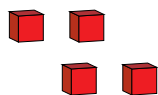
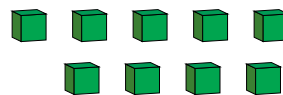
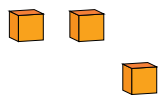
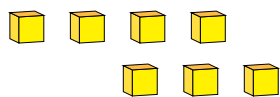


# Representar Números (H)

¿Qué número se muestra en cada grupo de bloques base diez?



1

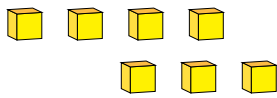


# Representar Números (H) Respuestas

¿Qué número se muestra en cada grupo de bloques base diez?



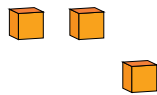
1



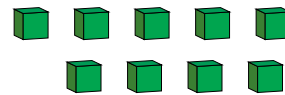
7



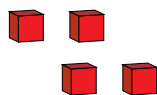
1



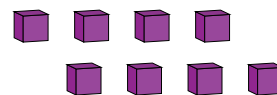
3



9



4



8