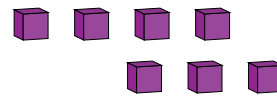
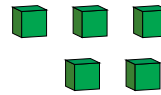
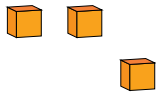
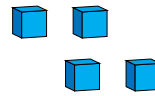


Representar Números (I)

¿Qué número se muestra en cada grupo de bloques base diez?



1



Representar Números (I) Respuestas

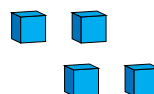
¿Qué número se muestra en cada grupo de bloques base diez?



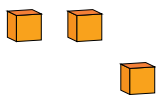
1



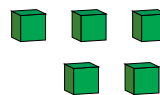
1



4



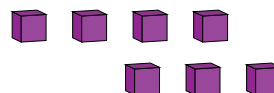
3



5



2



7