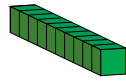


Representar Números (A)

¿Qué número se muestra en cada grupo de bloques base diez?



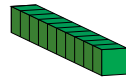
10



1

Representar Números (A) Respuestas

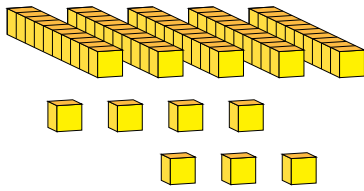
¿Qué número se muestra en cada grupo de bloques base diez?



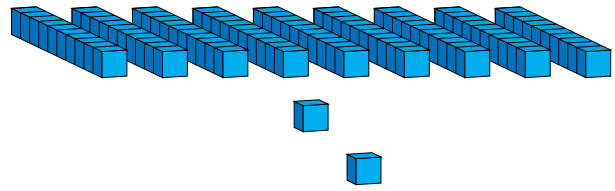
10



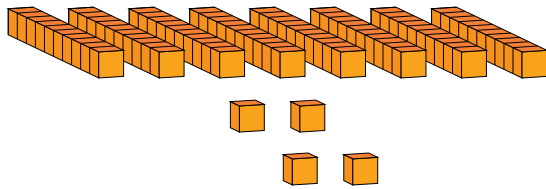
1




57



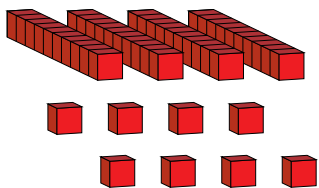
92



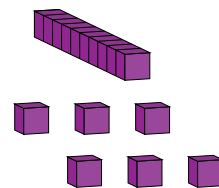
84



30



48



16