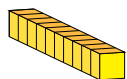


# Representar Números (G)

¿Qué número se muestra en cada grupo de bloques base diez?



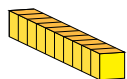
10



1

# Representar Números (G) Respuestas

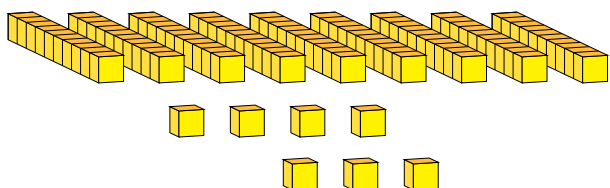
¿Qué número se muestra en cada grupo de bloques base diez?



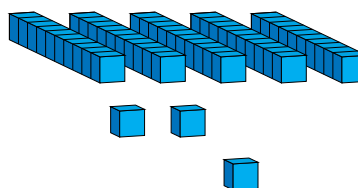
10



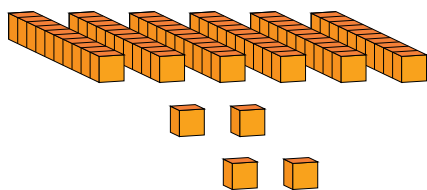
1



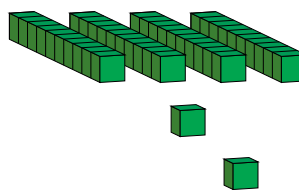
97



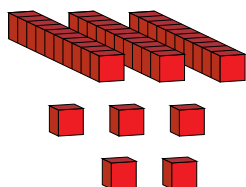
53



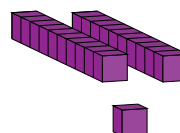
64



42



35



21