


# Representar Números (B)

¿Qué número se muestra en cada grupo de bloques base diez?



100




10



1

# Representar Números (B) Respuestas

¿Qué número se muestra en cada grupo de bloques base diez?



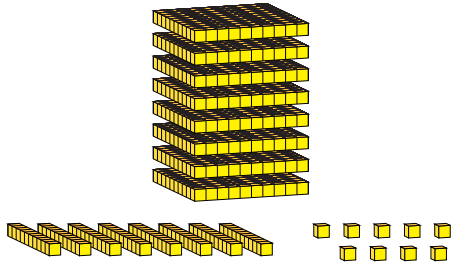
100



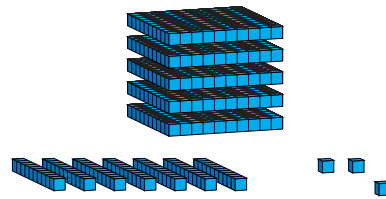
10



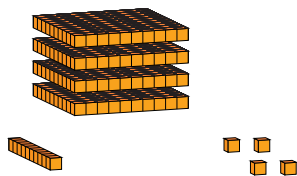
1



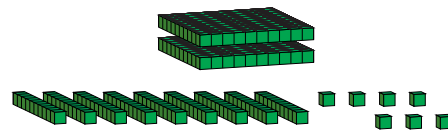
889




573



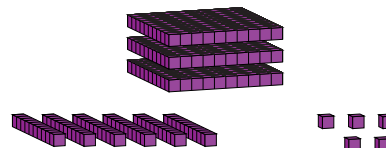
414



297



631



365