


Representar Números (E)

¿Qué número se muestra en cada grupo de bloques base diez?



100



10



1

A stack of 4 flat hundred blocks (yellow), 1 flat ten block (yellow), and 1 small unit cube (yellow).

A stack of 3 flat hundred blocks (blue), 1 flat ten block (blue), and 5 small unit cubes (blue).

A stack of 5 flat hundred blocks (orange), and 1 flat ten block (orange).

A stack of 2 flat hundred blocks (green), 1 flat ten block (green), and 3 small unit cubes (green).

A stack of 2 flat hundred blocks (red), 1 flat ten block (red), and 5 small unit cubes (red).

A stack of 3 flat hundred blocks (purple), 1 flat ten block (purple), and 5 small unit cubes (purple).

Representar Números (E) Respuestas

¿Qué número se muestra en cada grupo de bloques base diez?



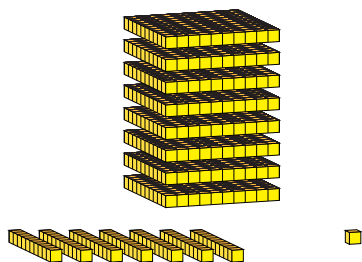
100



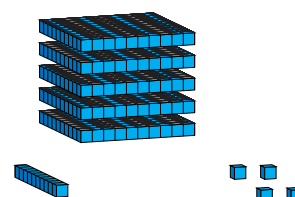
10




1



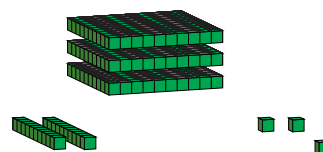
871



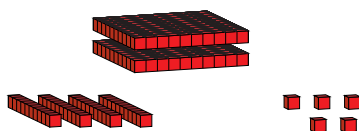
514



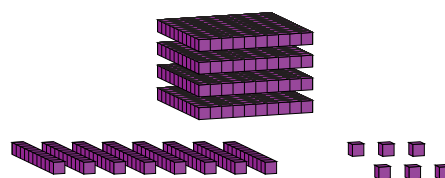
790



323



245



486