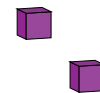
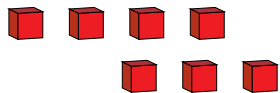
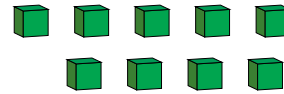
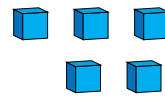
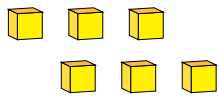


# Representar Números (A)

¿Qué número se muestra en cada grupo de bloques base diez?



1

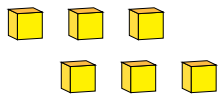


# Representar Números (A) Respuestas

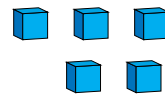
¿Qué número se muestra en cada grupo de bloques base diez?



1



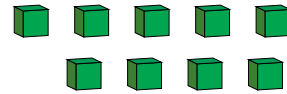
6



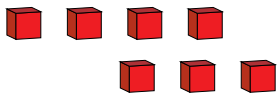
5



1



9



7



2

# Representar Números (B)

¿Qué número se muestra en cada grupo de bloques base diez?



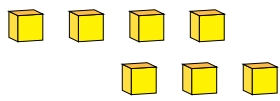
1

# Representar Números (B) Respuestas

¿Qué número se muestra en cada grupo de bloques base diez?



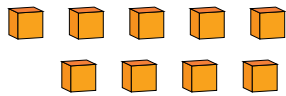
1



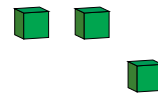
7



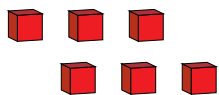
2



9



3



6



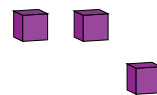
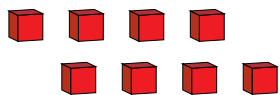
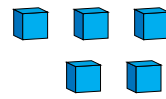
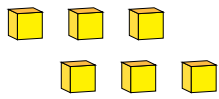
1

# Representar Números (C)

¿Qué número se muestra en cada grupo de bloques base diez?



1

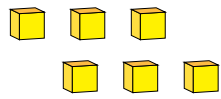


# Representar Números (C) Respuestas

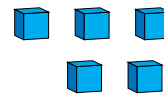
¿Qué número se muestra en cada grupo de bloques base diez?



1



6



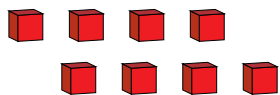
5



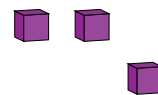
2



1



8



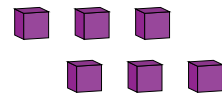
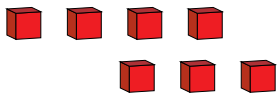
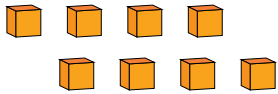
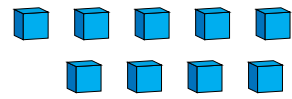
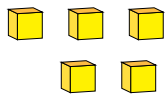
3

# Representar Números (D)

¿Qué número se muestra en cada grupo de bloques base diez?



1

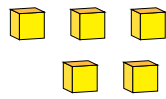


# Representar Números (D) Respuestas

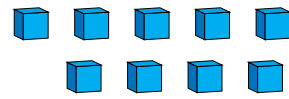
¿Qué número se muestra en cada grupo de bloques base diez?



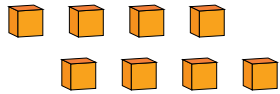
1



5



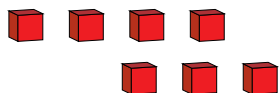
9



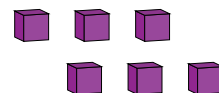
8



1



7



6

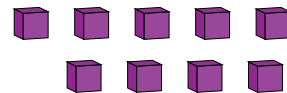
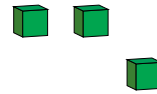
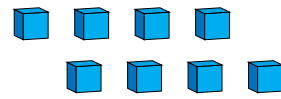
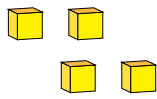


# Representar Números (E)

¿Qué número se muestra en cada grupo de bloques base diez?



1

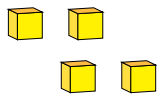


# Representar Números (E) Respuestas

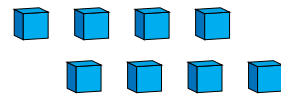
¿Qué número se muestra en cada grupo de bloques base diez?



1



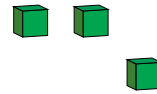
4



8



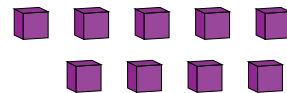
1



3



2



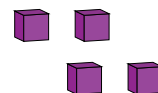
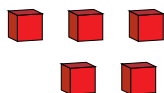
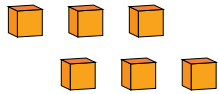
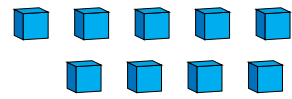
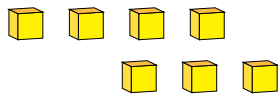
9

# Representar Números (F)

¿Qué número se muestra en cada grupo de bloques base diez?



1

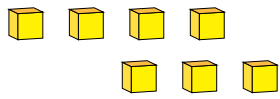


# Representar Números (F) Respuestas

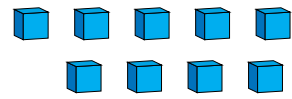
¿Qué número se muestra en cada grupo de bloques base diez?



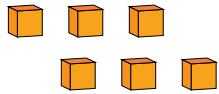
1



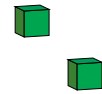
7



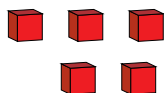
9



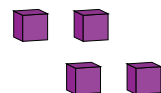
6



2



5



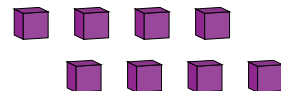
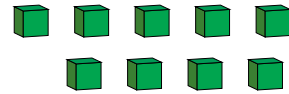
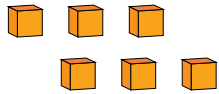
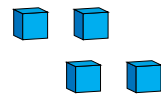
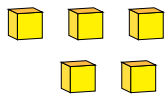
4

# Representar Números (G)

¿Qué número se muestra en cada grupo de bloques base diez?



1

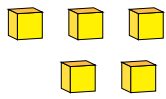


# Representar Números (G) Respuestas

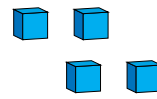
¿Qué número se muestra en cada grupo de bloques base diez?



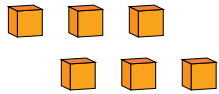
1



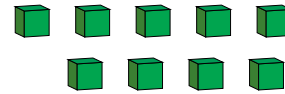
5



4



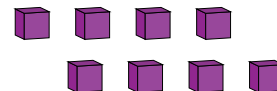
6



9



2



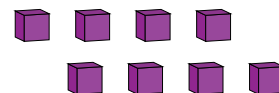
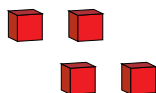
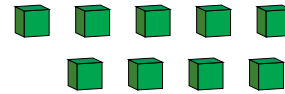
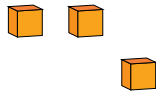
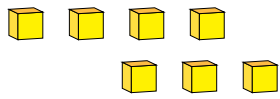
8

# Representar Números (H)

¿Qué número se muestra en cada grupo de bloques base diez?



1

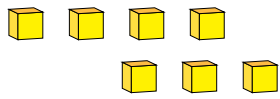


# Representar Números (H) Respuestas

¿Qué número se muestra en cada grupo de bloques base diez?



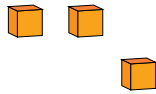
1



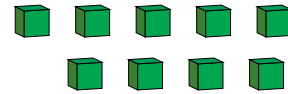
7



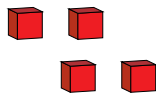
1



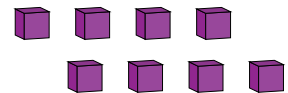
3



9



4



8

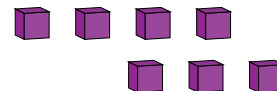
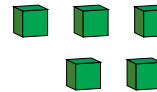
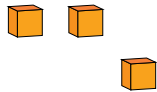
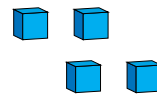


# Representar Números (I)

¿Qué número se muestra en cada grupo de bloques base diez?



1



# Representar Números (I) Respuestas

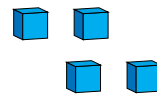
¿Qué número se muestra en cada grupo de bloques base diez?



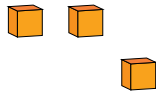
1



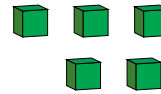
1



4



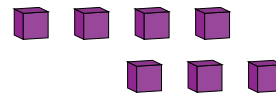
3



5



2



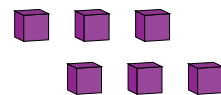
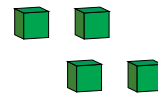
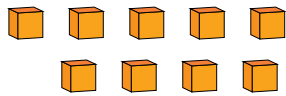
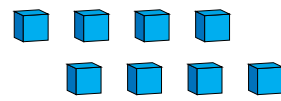
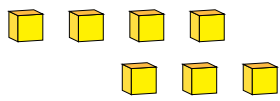
7

# Representar Números (J)

¿Qué número se muestra en cada grupo de bloques base diez?



1

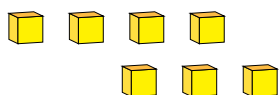


# Representar Números (J) Respuestas

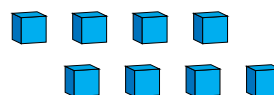
¿Qué número se muestra en cada grupo de bloques base diez?



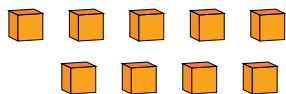
1



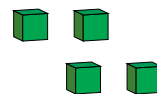
7



8



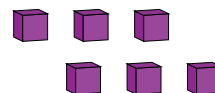
9



4



1



6