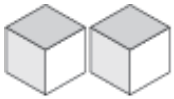


# Representar Números (A)

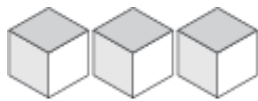
¿Qué número se muestra en cada grupo de bloques base diez?



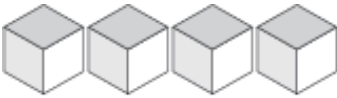
\_\_\_\_\_



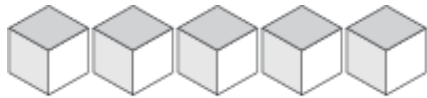
\_\_\_\_\_



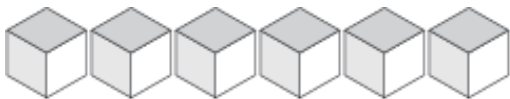
\_\_\_\_\_



\_\_\_\_\_



\_\_\_\_\_



\_\_\_\_\_



\_\_\_\_\_



\_\_\_\_\_



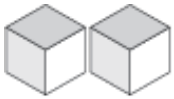
\_\_\_\_\_

# Representar Números (A) Respuestas

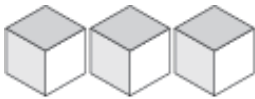
¿Qué número se muestra en cada grupo de bloques base diez?



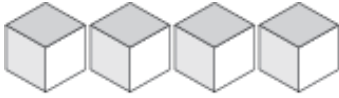
1



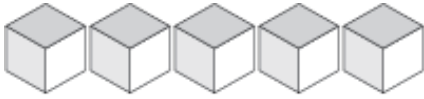
2



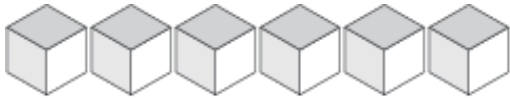
3



4



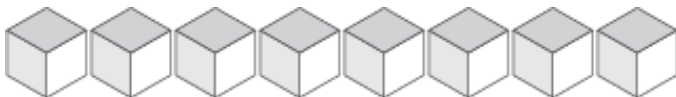
5



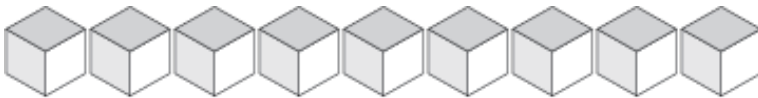
6



7



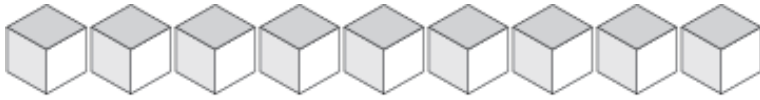
8



9

# Representar Números (B)

¿Qué número se muestra en cada grupo de bloques base diez?



\_\_\_\_\_



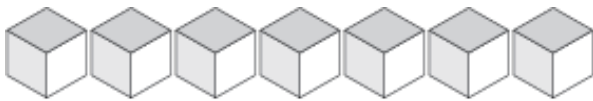
\_\_\_\_\_



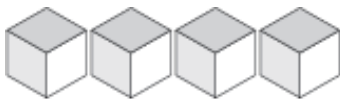
\_\_\_\_\_



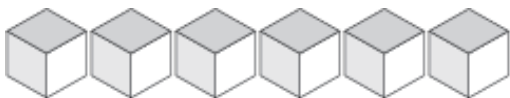
\_\_\_\_\_



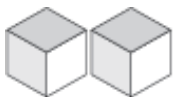
\_\_\_\_\_



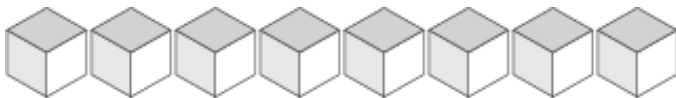
\_\_\_\_\_



\_\_\_\_\_



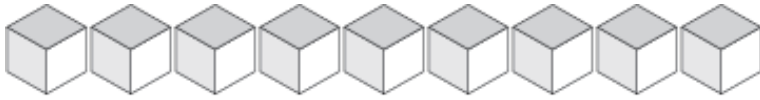
\_\_\_\_\_



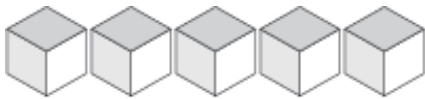
\_\_\_\_\_

# Representar Números (B) Respuestas

¿Qué número se muestra en cada grupo de bloques base diez?



9



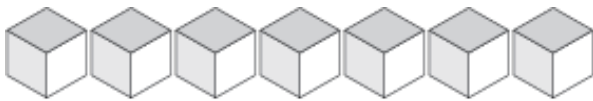
5



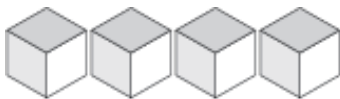
1



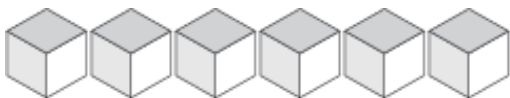
3



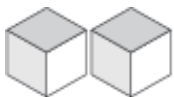
7



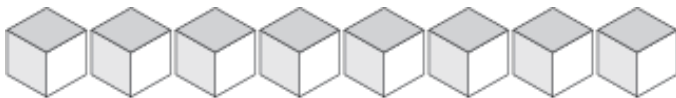
4



6



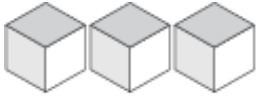
2



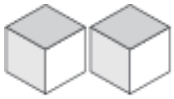
8

# Representar Números (C)

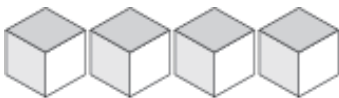
¿Qué número se muestra en cada grupo de bloques base diez?



\_\_\_\_\_



\_\_\_\_\_



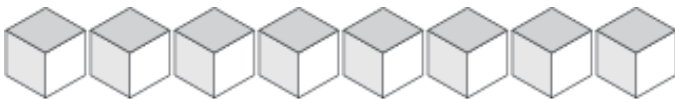
\_\_\_\_\_



\_\_\_\_\_



\_\_\_\_\_



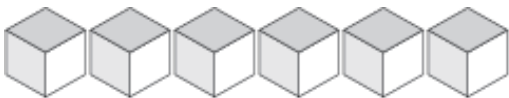
\_\_\_\_\_



\_\_\_\_\_



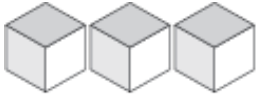
\_\_\_\_\_



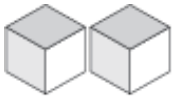
\_\_\_\_\_

# Representar Números (C) Respuestas

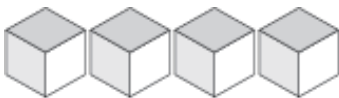
¿Qué número se muestra en cada grupo de bloques base diez?



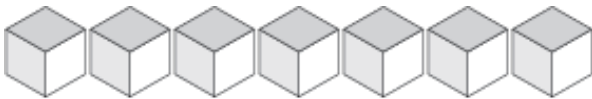
3



2



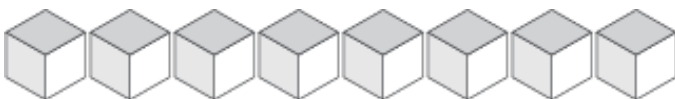
4



7



9



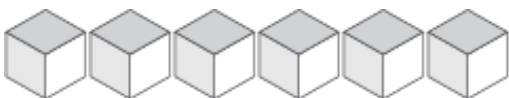
8



5



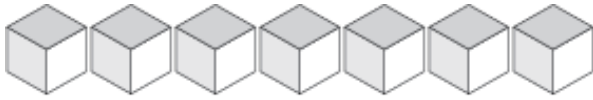
1



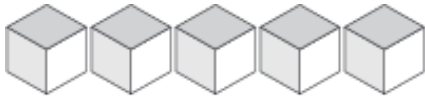
6

# Representar Números (D)

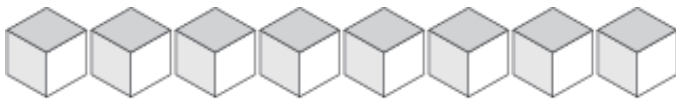
¿Qué número se muestra en cada grupo de bloques base diez?



\_\_\_\_\_



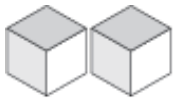
\_\_\_\_\_



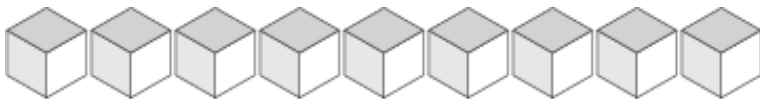
\_\_\_\_\_



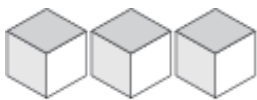
\_\_\_\_\_



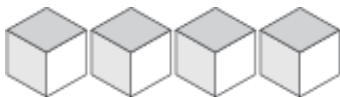
\_\_\_\_\_



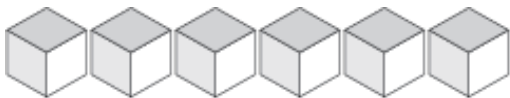
\_\_\_\_\_



\_\_\_\_\_



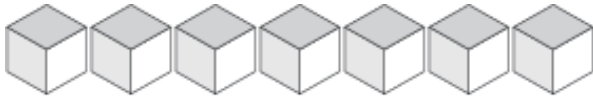
\_\_\_\_\_



\_\_\_\_\_

# Representar Números (D) Respuestas

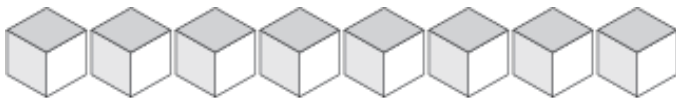
¿Qué número se muestra en cada grupo de bloques base diez?



7



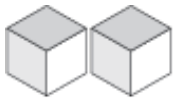
5



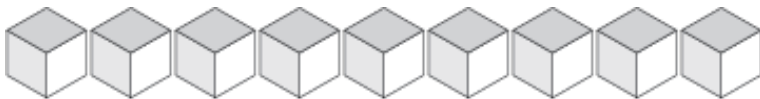
8



1



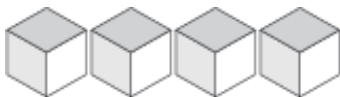
2



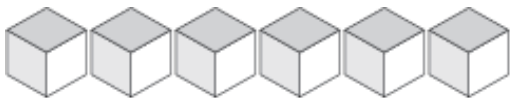
9



3



4

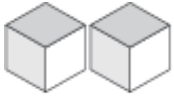


6

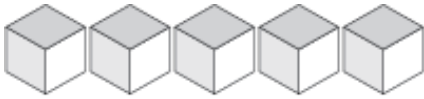


# Representar Números (E)

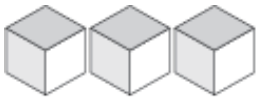
¿Qué número se muestra en cada grupo de bloques base diez?



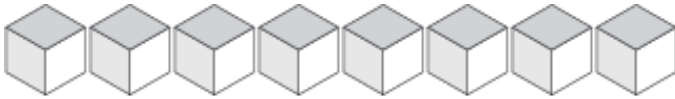
\_\_\_\_\_



\_\_\_\_\_



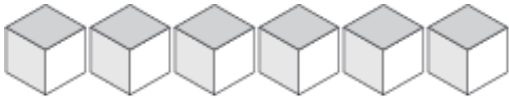
\_\_\_\_\_



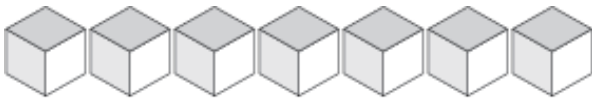
\_\_\_\_\_



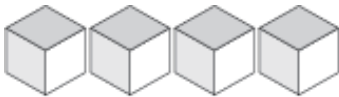
\_\_\_\_\_



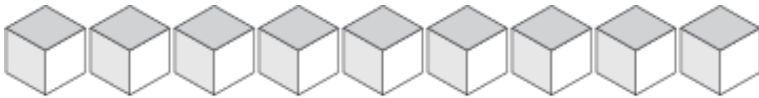
\_\_\_\_\_



\_\_\_\_\_



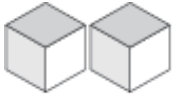
\_\_\_\_\_



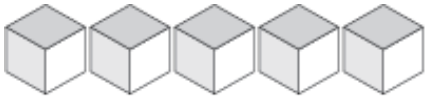
\_\_\_\_\_

# Representar Números (E) Respuestas

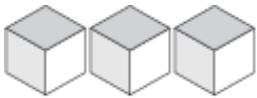
¿Qué número se muestra en cada grupo de bloques base diez?



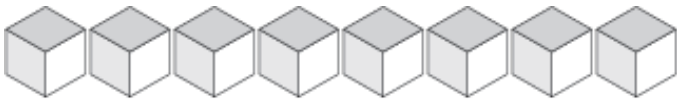
2



5



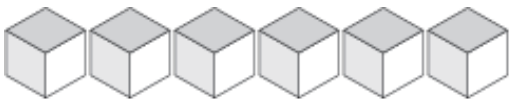
3



8



1



6



7



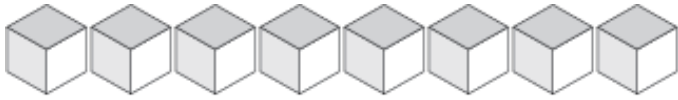
4



9

# Representar Números (F)

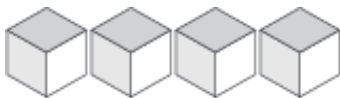
¿Qué número se muestra en cada grupo de bloques base diez?



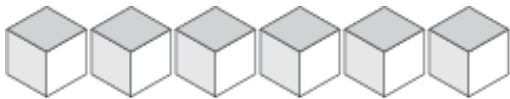
\_\_\_\_\_



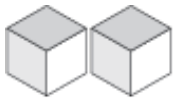
\_\_\_\_\_



\_\_\_\_\_



\_\_\_\_\_



\_\_\_\_\_



\_\_\_\_\_



\_\_\_\_\_



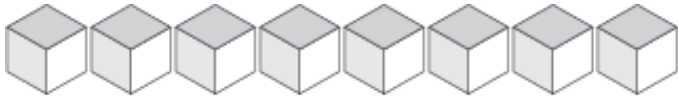
\_\_\_\_\_



\_\_\_\_\_

# Representar Números (F) Respuestas

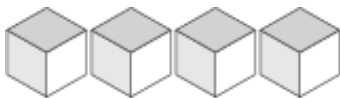
¿Qué número se muestra en cada grupo de bloques base diez?



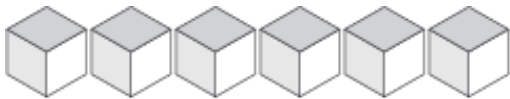
8



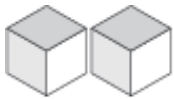
1



4



6



2



5



7



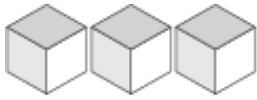
3



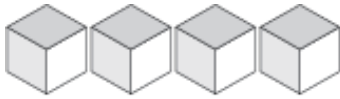
9

# Representar Números (G)

¿Qué número se muestra en cada grupo de bloques base diez?



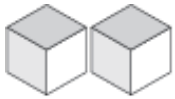
\_\_\_\_\_



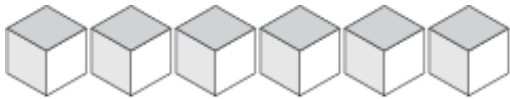
\_\_\_\_\_



\_\_\_\_\_



\_\_\_\_\_



\_\_\_\_\_



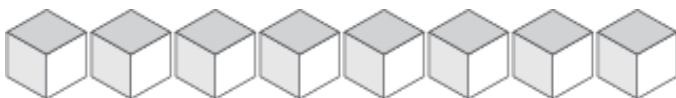
\_\_\_\_\_



\_\_\_\_\_



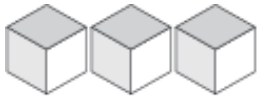
\_\_\_\_\_



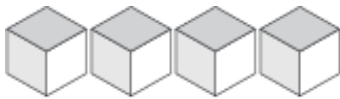
\_\_\_\_\_

# Representar Números (G) Respuestas

¿Qué número se muestra en cada grupo de bloques base diez?



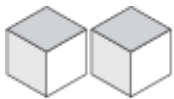
3



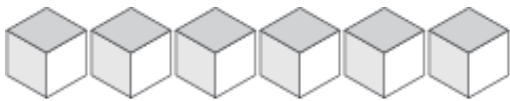
4



1



2



6



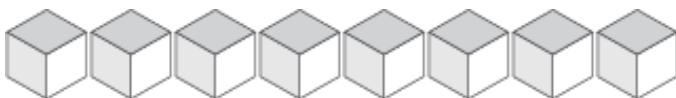
9



5



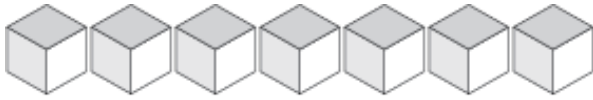
7



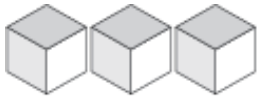
8

# Representar Números (H)

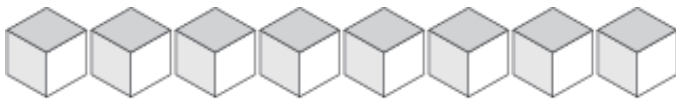
¿Qué número se muestra en cada grupo de bloques base diez?



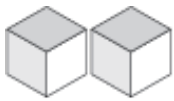
\_\_\_\_\_



\_\_\_\_\_



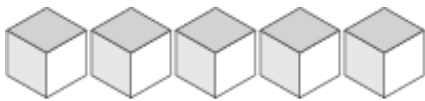
\_\_\_\_\_



\_\_\_\_\_



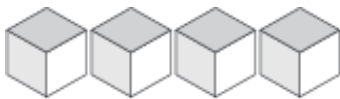
\_\_\_\_\_



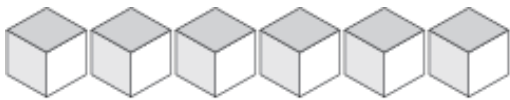
\_\_\_\_\_



\_\_\_\_\_



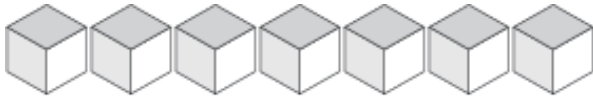
\_\_\_\_\_



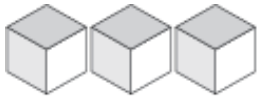
\_\_\_\_\_

# Representar Números (H) Respuestas

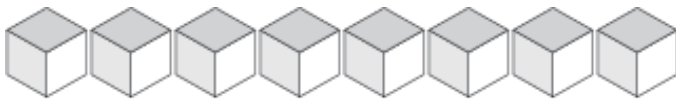
¿Qué número se muestra en cada grupo de bloques base diez?



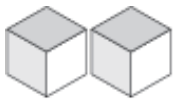
7



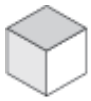
3



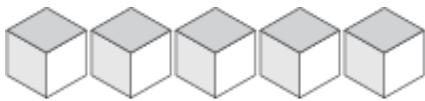
8



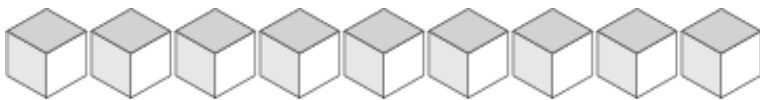
2



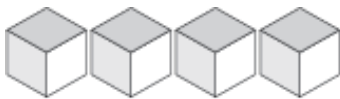
1



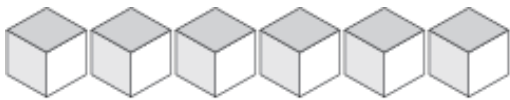
5



9



4

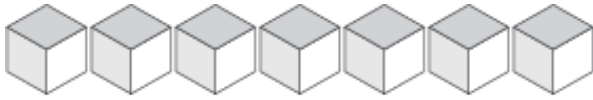


6

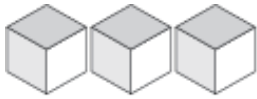


# Representar Números (I)

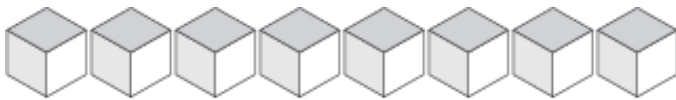
¿Qué número se muestra en cada grupo de bloques base diez?



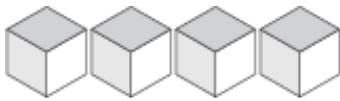
\_\_\_\_\_



\_\_\_\_\_



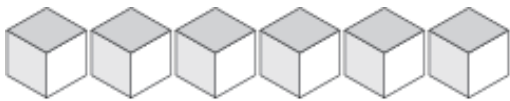
\_\_\_\_\_



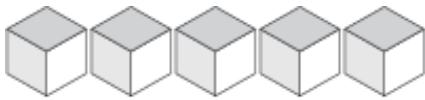
\_\_\_\_\_



\_\_\_\_\_



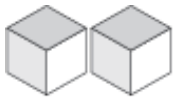
\_\_\_\_\_



\_\_\_\_\_



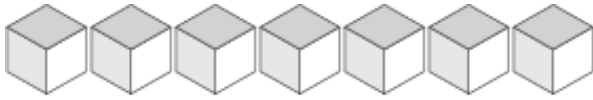
\_\_\_\_\_



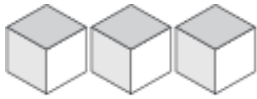
\_\_\_\_\_

# Representar Números (I) Respuestas

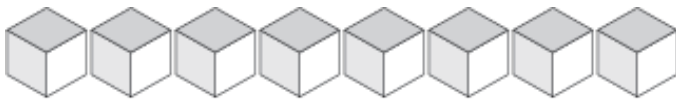
¿Qué número se muestra en cada grupo de bloques base diez?



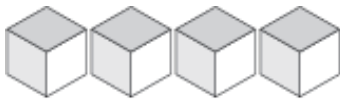
7



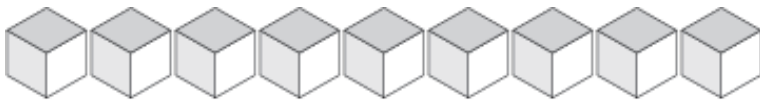
3



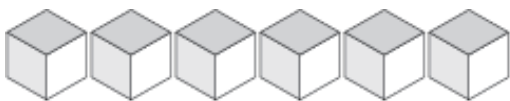
8



4



9



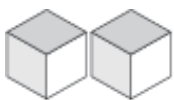
6



5



1



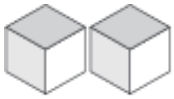
2

# Representar Números (J)

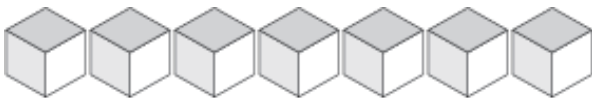
¿Qué número se muestra en cada grupo de bloques base diez?



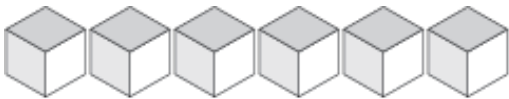
\_\_\_\_\_



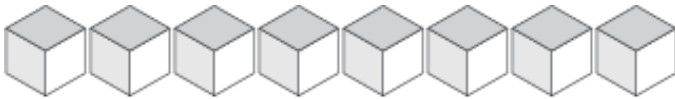
\_\_\_\_\_



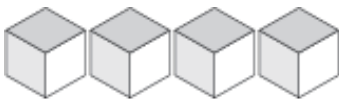
\_\_\_\_\_



\_\_\_\_\_



\_\_\_\_\_



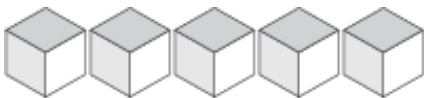
\_\_\_\_\_



\_\_\_\_\_



\_\_\_\_\_



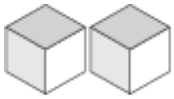
\_\_\_\_\_

# Representar Números (J) Respuestas

¿Qué número se muestra en cada grupo de bloques base diez?



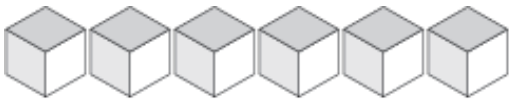
1



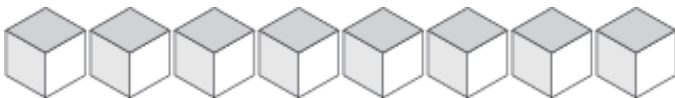
2



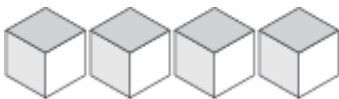
7



6



8



4



9



3



5