

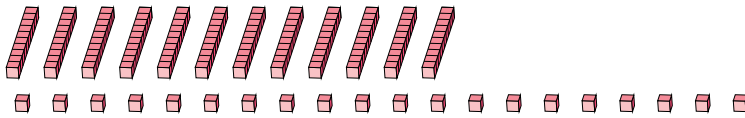

Reagrupar Bloques Base Diez (G)

Nombre: _____

Fecha: _____

¿Qué número se muestra en cada grupo de bloques base diez?

1.

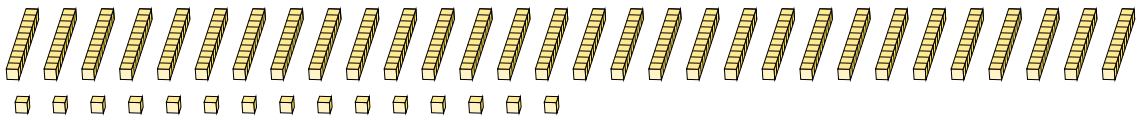
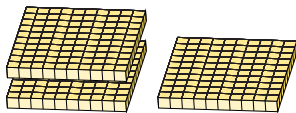


centenas decenas unidades

→
reagrupar

--	--	--

2.



centenas decenas unidades

→
reagrupar

--	--	--

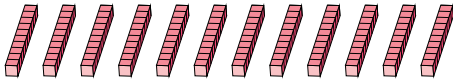
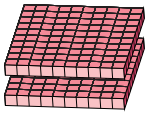
Reagrupar Bloques Base Diez (G) Respuestas

Nombre: _____

Fecha: _____

¿Qué número se muestra en cada grupo de bloques base diez?

1.



2

 centenas

12

 decenas


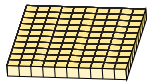
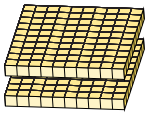
20

 unidades

→ reagrupar

3	4	0
---	---	---

2.



3

 centenas

30

 decenas

15

 unidades

→ reagrupar

6	1	5
---	---	---