

# Práctica con Bolas de Nieve (B)

Nombre: \_\_\_\_\_

Fecha: \_\_\_\_\_

Lanza cada bola de nieve a la diana correcta.

$$\begin{array}{r} 79 \\ \times 3 \\ \hline \end{array}$$



$$\begin{array}{r} 46 \\ \times 2 \\ \hline \end{array}$$



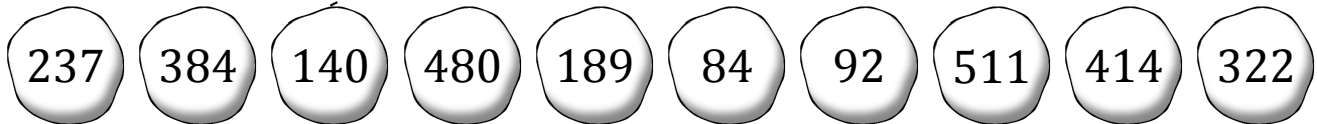
$$\begin{array}{r} 46 \\ \times 7 \\ \hline \end{array}$$



$$\begin{array}{r} 21 \\ \times 9 \\ \hline \end{array}$$



$$\begin{array}{r} 35 \\ \times 4 \\ \hline \end{array}$$



$$\begin{array}{r} 21 \\ \times 4 \\ \hline \end{array}$$



$$\begin{array}{r} 69 \\ \times 6 \\ \hline \end{array}$$



$$\begin{array}{r} 80 \\ \times 6 \\ \hline \end{array}$$



$$\begin{array}{r} 73 \\ \times 7 \\ \hline \end{array}$$













$$\begin{array}{r} 48 \\ \times 8 \\ \hline \end{array}$$

# Práctica con Bolas de Nieve (B) Respuestas

Nombre: \_\_\_\_\_

Fecha: \_\_\_\_\_

Lanza cada bola de nieve a la diana correcta.

$\begin{array}{r} 79 \\ \times 3 \\ \hline \end{array}$	$\begin{array}{r} 46 \\ \times 2 \\ \hline \end{array}$	$\begin{array}{r} 46 \\ \times 7 \\ \hline \end{array}$	$\begin{array}{r} 21 \\ \times 9 \\ \hline \end{array}$	$\begin{array}{r} 35 \\ \times 4 \\ \hline \end{array}$					
									
237	384	140	480	189	84	92	511	414	322
									
$\begin{array}{r} 21 \\ \times 4 \\ \hline \end{array}$	$\begin{array}{r} 69 \\ \times 6 \\ \hline \end{array}$	$\begin{array}{r} 80 \\ \times 6 \\ \hline \end{array}$	$\begin{array}{r} 73 \\ \times 7 \\ \hline \end{array}$	$\begin{array}{r} 48 \\ \times 8 \\ \hline \end{array}$					