

Práctica con Bolas de Nieve (A)

Nombre: _____

Fecha: _____

Lanza cada bola de nieve a la diana correcta.

$$\begin{array}{r} 14 \\ - 9 \\ \hline \end{array}$$



$$\begin{array}{r} 3 \\ + 4 \\ \hline \end{array}$$



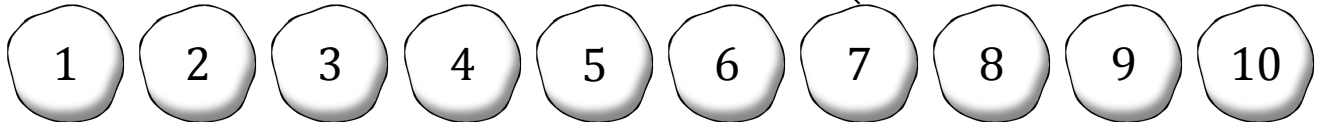
$$\begin{array}{r} 15 \\ \div 5 \\ \hline \end{array}$$



$$\begin{array}{r} 5 \\ \times 2 \\ \hline \end{array}$$



$$\begin{array}{r} 25 \\ - 24 \\ \hline \end{array}$$



$$\begin{array}{r} 12 \\ - 8 \\ \hline \end{array}$$



$$\begin{array}{r} 3 \\ \times 2 \\ \hline \end{array}$$



$$\begin{array}{r} 7 \\ + 2 \\ \hline \end{array}$$



$$\begin{array}{r} 16 \\ \div 2 \\ \hline \end{array}$$



$$\begin{array}{r} 18 \\ \div 9 \\ \hline \end{array}$$

Práctica con Bolas de Nieve (A) Respuestas

Nombre: _____

Fecha: _____

Lanza cada bola de nieve a la diana correcta.

$$\begin{array}{r} 14 \\ - 9 \\ \hline \end{array}$$



$$\begin{array}{r} 3 \\ + 4 \\ \hline \end{array}$$



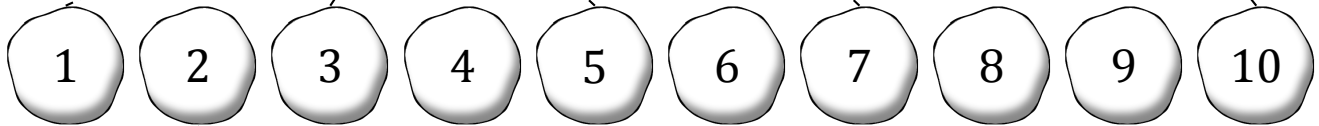
$$\begin{array}{r} 15 \\ \div 5 \\ \hline \end{array}$$



$$\begin{array}{r} 5 \\ \times 2 \\ \hline \end{array}$$



$$\begin{array}{r} 25 \\ - 24 \\ \hline \end{array}$$



$$\begin{array}{r} 12 \\ - 8 \\ \hline \end{array}$$



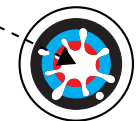
$$\begin{array}{r} 3 \\ \times 2 \\ \hline \end{array}$$



$$\begin{array}{r} 7 \\ + 2 \\ \hline \end{array}$$



$$\begin{array}{r} 16 \\ \div 2 \\ \hline \end{array}$$



$$\begin{array}{r} 18 \\ \div 9 \\ \hline \end{array}$$

Práctica con Bolas de Nieve (B)

Nombre: _____

Fecha: _____

Lanza cada bola de nieve a la diana correcta.

$$\begin{array}{r} 42 \\ + 28 \\ \hline \end{array}$$



$$\begin{array}{r} 25 \\ \times 2 \\ \hline \end{array}$$



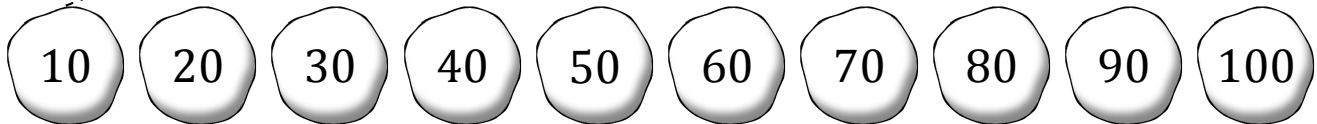
$$\begin{array}{r} 24 \\ + 16 \\ \hline \end{array}$$



$$\begin{array}{r} 240 \\ \div 3 \\ \hline \end{array}$$



$$\begin{array}{r} 23 \\ - 13 \\ \hline \end{array}$$



$$\begin{array}{r} 39 \\ + 61 \\ \hline \end{array}$$



$$\begin{array}{r} 6 \\ \times 5 \\ \hline \end{array}$$



$$\begin{array}{r} 96 \\ - 36 \\ \hline \end{array}$$



$$\begin{array}{r} 15 \\ \times 6 \\ \hline \end{array}$$



$$\begin{array}{r} 80 \\ \div 4 \\ \hline \end{array}$$

Práctica con Bolas de Nieve (B) Respuestas

Nombre: _____

Fecha: _____

Lanza cada bola de nieve a la diana correcta.

$$\begin{array}{r} 42 \\ + 28 \\ \hline \end{array}$$



$$\begin{array}{r} 25 \\ \times 2 \\ \hline \end{array}$$



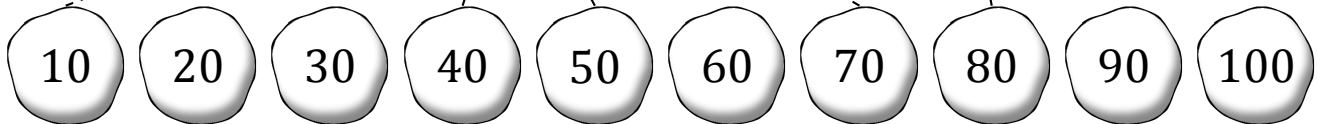
$$\begin{array}{r} 24 \\ + 16 \\ \hline \end{array}$$



$$\begin{array}{r} 240 \\ \div 3 \\ \hline \end{array}$$



$$\begin{array}{r} 23 \\ - 13 \\ \hline \end{array}$$



$$\begin{array}{r} 39 \\ + 61 \\ \hline \end{array}$$



$$\begin{array}{r} 6 \\ \times 5 \\ \hline \end{array}$$



$$\begin{array}{r} 96 \\ - 36 \\ \hline \end{array}$$



$$\begin{array}{r} 15 \\ \times 6 \\ \hline \end{array}$$



$$\begin{array}{r} 80 \\ \div 4 \\ \hline \end{array}$$

Práctica con Bolas de Nieve (C)

Nombre: _____

Fecha: _____

Lanza cada bola de nieve a la diana correcta.

$$\begin{array}{r} 125 \\ \times 4 \\ \hline \end{array}$$



$$\begin{array}{r} 600 \\ \div 3 \\ \hline \end{array}$$



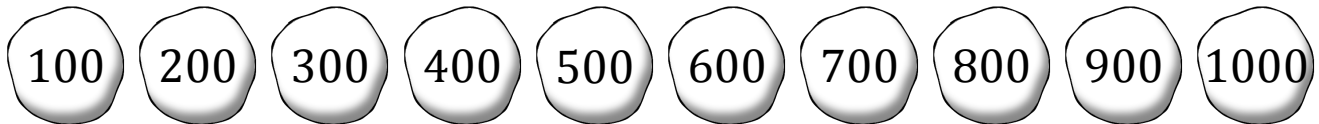
$$\begin{array}{r} 808 \\ - 108 \\ \hline \end{array}$$



$$\begin{array}{r} 540 \\ + 460 \\ \hline \end{array}$$



$$\begin{array}{r} 100 \\ \times 4 \\ \hline \end{array}$$



$$\begin{array}{r} 100 \\ \times 8 \\ \hline \end{array}$$



$$\begin{array}{r} 485 \\ + 115 \\ \hline \end{array}$$



$$\begin{array}{r} 500 \\ \div 5 \\ \hline \end{array}$$



$$\begin{array}{r} 150 \\ \times 6 \\ \hline \end{array}$$



$$\begin{array}{r} 407 \\ - 107 \\ \hline \end{array}$$

Práctica con Bolas de Nieve (C) Respuestas

Nombre: _____

Fecha: _____

Lanza cada bola de nieve a la diana correcta.

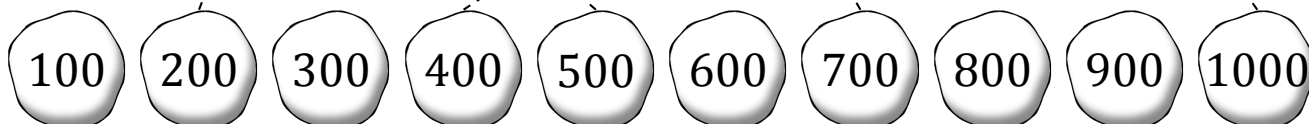
$$\begin{array}{r} 125 \\ \times 4 \\ \hline \end{array}$$

$$\begin{array}{r} 600 \\ \div 3 \\ \hline \end{array}$$

$$\begin{array}{r} 808 \\ - 108 \\ \hline \end{array}$$

$$\begin{array}{r} 540 \\ + 460 \\ \hline \end{array}$$

$$\begin{array}{r} 100 \\ \times 4 \\ \hline \end{array}$$



$$\begin{array}{r} 100 \\ \times 8 \\ \hline \end{array}$$

$$\begin{array}{r} 485 \\ + 115 \\ \hline \end{array}$$

$$\begin{array}{r} 500 \\ \div 5 \\ \hline \end{array}$$

$$\begin{array}{r} 150 \\ \times 6 \\ \hline \end{array}$$

$$\begin{array}{r} 407 \\ - 107 \\ \hline \end{array}$$

Práctica con Bolas de Nieve (D)

Nombre: _____

Fecha: _____

Lanza cada bola de nieve a la diana correcta.

$$\begin{array}{r} 15 \\ - 12 \\ \hline \end{array}$$



$$\begin{array}{r} 12 \\ + 7 \\ \hline \end{array}$$



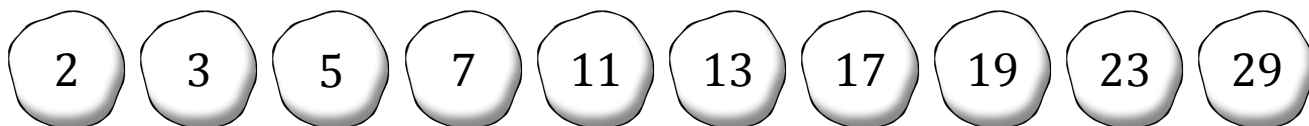
$$\begin{array}{r} 69 \\ \div 3 \\ \hline \end{array}$$



$$\begin{array}{r} 40 \\ \div 8 \\ \hline \end{array}$$



$$\begin{array}{r} 32 \\ - 19 \\ \hline \end{array}$$



$$\begin{array}{r} 15 \\ + 14 \\ \hline \end{array}$$



$$\begin{array}{r} 12 \\ \div 6 \\ \hline \end{array}$$



$$\begin{array}{r} 35 \\ \div 5 \\ \hline \end{array}$$



$$\begin{array}{r} 24 \\ - 13 \\ \hline \end{array}$$



$$\begin{array}{r} 17 \\ \times 1 \\ \hline \end{array}$$

Práctica con Bolas de Nieve (D) Respuestas

Nombre: _____

Fecha: _____

Lanza cada bola de nieve a la diana correcta.

$$\begin{array}{r} 15 \\ - 12 \\ \hline \end{array}$$



$$\begin{array}{r} 12 \\ + 7 \\ \hline \end{array}$$



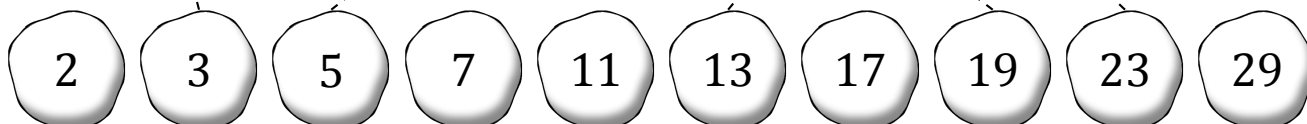
$$\begin{array}{r} 69 \\ \div 3 \\ \hline \end{array}$$



$$\begin{array}{r} 40 \\ \div 8 \\ \hline \end{array}$$



$$\begin{array}{r} 32 \\ - 19 \\ \hline \end{array}$$



$$\begin{array}{r} 15 \\ + 14 \\ \hline \end{array}$$



$$\begin{array}{r} 12 \\ \div 6 \\ \hline \end{array}$$



$$\begin{array}{r} 35 \\ \div 5 \\ \hline \end{array}$$



$$\begin{array}{r} 24 \\ - 13 \\ \hline \end{array}$$



$$\begin{array}{r} 17 \\ \times 1 \\ \hline \end{array}$$

Práctica con Bolas de Nieve (E)

Nombre: _____

Fecha: _____

Lanza cada bola de nieve a la diana correcta.

$$\begin{array}{r} 67 \\ + 22 \\ \hline \end{array}$$



$$\begin{array}{r} 55 \\ - 53 \\ \hline \end{array}$$




$$\begin{array}{r} 26 \\ \div 2 \\ \hline \end{array}$$



$$\begin{array}{r} 7 \\ \times 3 \\ \hline \end{array}$$



$$\begin{array}{r} 64 \\ \div 8 \\ \hline \end{array}$$



$$\begin{array}{r} 28 \\ + 27 \\ \hline \end{array}$$



$$\begin{array}{r} 17 \\ \times 2 \\ \hline \end{array}$$



$$\begin{array}{r} 28 \\ - 27 \\ \hline \end{array}$$



$$\begin{array}{r} 27 \\ \div 9 \\ \hline \end{array}$$



$$\begin{array}{r} 34 \\ - 29 \\ \hline \end{array}$$

Práctica con Bolas de Nieve (E) Respuestas

Nombre: _____

Fecha: _____

Lanza cada bola de nieve a la diana correcta.

$$\begin{array}{r} 67 \\ + 22 \\ \hline \end{array}$$



$$\begin{array}{r} 55 \\ - 53 \\ \hline \end{array}$$



$$\begin{array}{r} 26 \\ \div 2 \\ \hline \end{array}$$



$$\begin{array}{r} 7 \\ \times 3 \\ \hline \end{array}$$



$$\begin{array}{r} 64 \\ \div 8 \\ \hline \end{array}$$



- 1 2 3 5 8 13 21 34 55 89



$$\begin{array}{r} 28 \\ + 27 \\ \hline \end{array}$$



$$\begin{array}{r} 17 \\ \times 2 \\ \hline \end{array}$$



$$\begin{array}{r} 28 \\ - 27 \\ \hline \end{array}$$



$$\begin{array}{r} 27 \\ \div 9 \\ \hline \end{array}$$



$$\begin{array}{r} 34 \\ - 29 \\ \hline \end{array}$$

Práctica con Bolas de Nieve (F)

Nombre: _____

Fecha: _____

Lanza cada bola de nieve a la diana correcta.

$$\begin{array}{r} 15 \\ \times 3 \\ \hline \end{array}$$



$$\begin{array}{r} 70 \\ \div 14 \\ \hline \end{array}$$



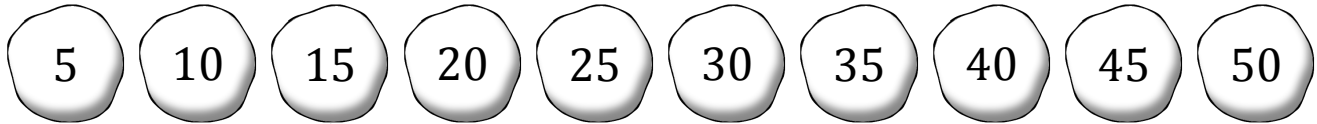
$$\begin{array}{r} 84 \\ - 74 \\ \hline \end{array}$$



$$\begin{array}{r} 120 \\ \div 3 \\ \hline \end{array}$$



$$\begin{array}{r} 10 \\ \times 2 \\ \hline \end{array}$$



$$\begin{array}{r} 6 \\ \times 5 \\ \hline \end{array}$$



$$\begin{array}{r} 19 \\ + 6 \\ \hline \end{array}$$



$$\begin{array}{r} 64 \\ - 29 \\ \hline \end{array}$$



$$\begin{array}{r} 39 \\ + 11 \\ \hline \end{array}$$



$$\begin{array}{r} 32 \\ - 17 \\ \hline \end{array}$$

Práctica con Bolas de Nieve (F) Respuestas

Nombre: _____

Fecha: _____

Lanza cada bola de nieve a la diana correcta.

$$\begin{array}{r} 15 \\ \times 3 \\ \hline \end{array}$$



$$\begin{array}{r} 70 \\ \div 14 \\ \hline \end{array}$$



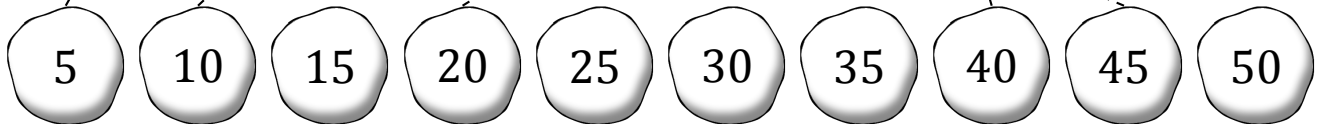
$$\begin{array}{r} 84 \\ - 74 \\ \hline \end{array}$$



$$\begin{array}{r} 120 \\ \div 3 \\ \hline \end{array}$$



$$\begin{array}{r} 10 \\ \times 2 \\ \hline \end{array}$$



$$\begin{array}{r} 6 \\ \times 5 \\ \hline \end{array}$$



$$\begin{array}{r} 19 \\ + 6 \\ \hline \end{array}$$



$$\begin{array}{r} 64 \\ - 29 \\ \hline \end{array}$$



$$\begin{array}{r} 39 \\ + 11 \\ \hline \end{array}$$



$$\begin{array}{r} 32 \\ - 17 \\ \hline \end{array}$$

Práctica con Bolas de Nieve (G)

Nombre: _____

Fecha: _____

Lanza cada bola de nieve a la diana correcta.

$$\begin{array}{r} 110 \\ - 109 \\ \hline \end{array}$$



$$\begin{array}{r} 54 \\ - 27 \\ \hline \end{array}$$



$$\begin{array}{r} 32 \\ \div 4 \\ \hline \end{array}$$



$$\begin{array}{r} 72 \\ \times 3 \\ \hline \end{array}$$



$$\begin{array}{r} 980 \\ - 251 \\ \hline \end{array}$$



1

8

27

64

125

216

343

512

729

1000



$$\begin{array}{r} 16 \\ \times 4 \\ \hline \end{array}$$



$$\begin{array}{r} 216 \\ + 127 \\ \hline \end{array}$$



$$\begin{array}{r} 125 \\ \times 8 \\ \hline \end{array}$$



$$\begin{array}{r} 600 \\ - 475 \\ \hline \end{array}$$



$$\begin{array}{r} 128 \\ \times 4 \\ \hline \end{array}$$

Práctica con Bolas de Nieve (G) Respuestas

Nombre: _____

Fecha: _____

Lanza cada bola de nieve a la diana correcta.

$$\begin{array}{r} 110 \\ - 109 \\ \hline \end{array}$$

$$\begin{array}{r} 54 \\ - 27 \\ \hline \end{array}$$

$$\begin{array}{r} 32 \\ \div 4 \\ \hline \end{array}$$

$$\begin{array}{r} 72 \\ \times 3 \\ \hline \end{array}$$

$$\begin{array}{r} 980 \\ - 251 \\ \hline \end{array}$$



1

8

27

64

125

216

343

512

729

1000



$$\begin{array}{r} 16 \\ \times 4 \\ \hline \end{array}$$

$$\begin{array}{r} 216 \\ + 127 \\ \hline \end{array}$$

$$\begin{array}{r} 125 \\ \times 8 \\ \hline \end{array}$$

$$\begin{array}{r} 600 \\ - 475 \\ \hline \end{array}$$

$$\begin{array}{r} 128 \\ \times 4 \\ \hline \end{array}$$

Práctica con Bolas de Nieve (H)

Nombre: _____

Fecha: _____

Lanza cada bola de nieve a la diana correcta.

$$\begin{array}{r} 39 \\ + 10 \\ \hline \end{array}$$



$$\begin{array}{r} 99 \\ \div 99 \\ \hline \end{array}$$



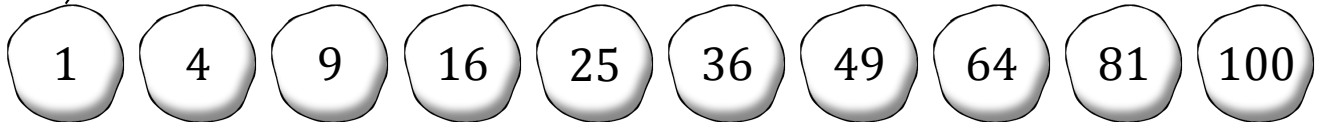
$$\begin{array}{r} 8 \\ \times 2 \\ \hline \end{array}$$



$$\begin{array}{r} 100 \\ - 36 \\ \hline \end{array}$$



$$\begin{array}{r} 19 \\ + 6 \\ \hline \end{array}$$



$$\begin{array}{r} 4 \\ \times 9 \\ \hline \end{array}$$



$$\begin{array}{r} 51 \\ + 49 \\ \hline \end{array}$$



$$\begin{array}{r} 162 \\ \div 2 \\ \hline \end{array}$$



$$\begin{array}{r} 320 \\ \div 80 \\ \hline \end{array}$$



$$\begin{array}{r} 100 \\ - 91 \\ \hline \end{array}$$

Práctica con Bolas de Nieve (H) Respuestas

Nombre: _____

Fecha: _____

Lanza cada bola de nieve a la diana correcta.

$$\begin{array}{r} 39 \\ + 10 \\ \hline \end{array}$$



$$\begin{array}{r} 99 \\ \div 99 \\ \hline \end{array}$$



$$\begin{array}{r} 8 \\ \times 2 \\ \hline \end{array}$$



$$\begin{array}{r} 100 \\ - 36 \\ \hline \end{array}$$



$$\begin{array}{r} 19 \\ + 6 \\ \hline \end{array}$$



1 4 9 16 25 36 49 64 81 100



$$\begin{array}{r} 4 \\ \times 9 \\ \hline \end{array}$$



$$\begin{array}{r} 51 \\ + 49 \\ \hline \end{array}$$



$$\begin{array}{r} 162 \\ \div 2 \\ \hline \end{array}$$



$$\begin{array}{r} 320 \\ \div 80 \\ \hline \end{array}$$



$$\begin{array}{r} 100 \\ - 91 \\ \hline \end{array}$$

Práctica con Bolas de Nieve (I)

Nombre: _____

Fecha: _____

Lanza cada bola de nieve a la diana correcta.

$$\begin{array}{r} 114 \\ - 86 \\ \hline \end{array}$$



$$\begin{array}{r} 72 \\ \div 2 \\ \hline \end{array}$$



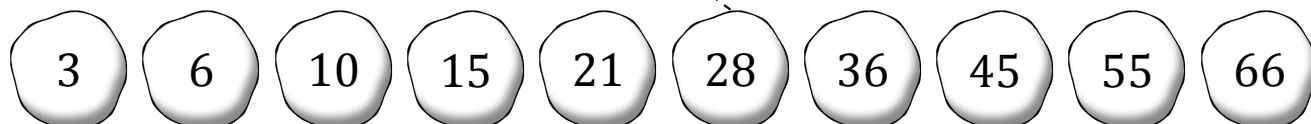
$$\begin{array}{r} 10 \\ + 5 \\ \hline \end{array}$$



$$\begin{array}{r} 194 \\ - 188 \\ \hline \end{array}$$



$$\begin{array}{r} 74 \\ - 19 \\ \hline \end{array}$$



$$\begin{array}{r} 1000 \\ \div 100 \\ \hline \end{array}$$



$$\begin{array}{r} 23 \\ + 22 \\ \hline \end{array}$$



$$\begin{array}{r} 27 \\ \div 9 \\ \hline \end{array}$$



$$\begin{array}{r} 3 \\ \times 7 \\ \hline \end{array}$$



$$\begin{array}{r} 11 \\ \times 6 \\ \hline \end{array}$$

Práctica con Bolas de Nieve (I) Respuestas

Nombre: _____

Fecha: _____

Lanza cada bola de nieve a la diana correcta.

$$\begin{array}{r} 114 \\ - 86 \\ \hline \end{array}$$



$$\begin{array}{r} 72 \\ \div 2 \\ \hline \end{array}$$



$$\begin{array}{r} 10 \\ + 5 \\ \hline \end{array}$$



$$\begin{array}{r} 194 \\ - 188 \\ \hline \end{array}$$



$$\begin{array}{r} 74 \\ - 19 \\ \hline \end{array}$$



3

6

10

15

21

28

36

45

55

66



$$\begin{array}{r} 1000 \\ \div 100 \\ \hline \end{array}$$



$$\begin{array}{r} 23 \\ + 22 \\ \hline \end{array}$$



$$\begin{array}{r} 27 \\ \div 9 \\ \hline \end{array}$$



$$\begin{array}{r} 3 \\ \times 7 \\ \hline \end{array}$$



$$\begin{array}{r} 11 \\ \times 6 \\ \hline \end{array}$$

Práctica con Bolas de Nieve (J)

Nombre: _____

Fecha: _____

Lanza cada bola de nieve a la diana correcta.

$$\begin{array}{r} 17 \\ + 15 \\ \hline \end{array}$$



$$\begin{array}{r} 97 \\ - 89 \\ \hline \end{array}$$



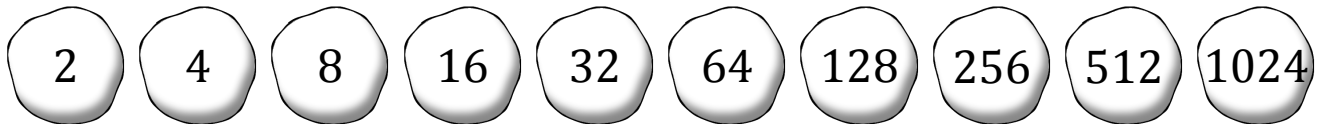
$$\begin{array}{r} 146 \\ + 110 \\ \hline \end{array}$$



$$\begin{array}{r} 313 \\ - 185 \\ \hline \end{array}$$



$$\begin{array}{r} 8 \\ \times 2 \\ \hline \end{array}$$



$$\begin{array}{r} 13 \\ - 11 \\ \hline \end{array}$$



$$\begin{array}{r} 64 \\ \times 8 \\ \hline \end{array}$$



$$\begin{array}{r} 36 \\ \div 9 \\ \hline \end{array}$$



$$\begin{array}{r} 16 \\ \times 4 \\ \hline \end{array}$$



$$\begin{array}{r} 777 \\ + 247 \\ \hline \end{array}$$

Práctica con Bolas de Nieve (J) Respuestas

Nombre: _____

Fecha: _____

Lanza cada bola de nieve a la diana correcta.

$$\begin{array}{r} 17 \\ + 15 \\ \hline \end{array}$$



$$\begin{array}{r} 97 \\ - 89 \\ \hline \end{array}$$



$$\begin{array}{r} 146 \\ + 110 \\ \hline \end{array}$$



$$\begin{array}{r} 313 \\ - 185 \\ \hline \end{array}$$



$$\begin{array}{r} 8 \\ \times 2 \\ \hline \end{array}$$



2 4 8 16 32 64 128 256 512 1024



$$\begin{array}{r} 13 \\ - 11 \\ \hline \end{array}$$



$$\begin{array}{r} 64 \\ \times 8 \\ \hline \end{array}$$



$$\begin{array}{r} 36 \\ \div 9 \\ \hline \end{array}$$



$$\begin{array}{r} 16 \\ \times 4 \\ \hline \end{array}$$



$$\begin{array}{r} 777 \\ + 247 \\ \hline \end{array}$$