

Práctica con Bolas de Nieve (A)

Nombre: _____

Fecha: _____

Lanza cada bola de nieve a la diana correcta.

$$\begin{array}{r} 23 \\ \times 2 \\ \hline \end{array}$$



$$\begin{array}{r} 47 \\ - 21 \\ \hline \end{array}$$



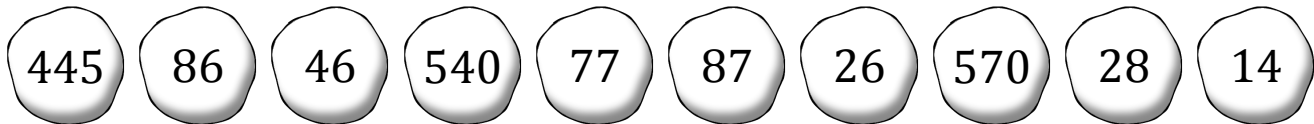
$$\begin{array}{r} 90 \\ \times 6 \\ \hline \end{array}$$



$$\begin{array}{r} 83 \\ - 69 \\ \hline \end{array}$$



$$\begin{array}{r} 160 \\ - 73 \\ \hline \end{array}$$



$$\begin{array}{r} 95 \\ \times 6 \\ \hline \end{array}$$



$$\begin{array}{r} 139 \\ - 62 \\ \hline \end{array}$$



$$\begin{array}{r} 89 \\ \times 5 \\ \hline \end{array}$$



$$\begin{array}{r} 140 \\ \div 5 \\ \hline \end{array}$$



$$\begin{array}{r} 688 \\ \div 8 \\ \hline \end{array}$$

Práctica con Bolas de Nieve (A) Respuestas

Nombre: _____

Fecha: _____

Lanza cada bola de nieve a la diana correcta.

$$\begin{array}{r} 23 \\ \times 2 \\ \hline \end{array}$$

$$\begin{array}{r} 47 \\ - 21 \\ \hline \end{array}$$

$$\begin{array}{r} 90 \\ \times 6 \\ \hline \end{array}$$

$$\begin{array}{r} 83 \\ - 69 \\ \hline \end{array}$$

$$\begin{array}{r} 160 \\ - 73 \\ \hline \end{array}$$



445

86

46

540

77

87

26

570

28

14



$$\begin{array}{r} 95 \\ \times 6 \\ \hline \end{array}$$

$$\begin{array}{r} 139 \\ - 62 \\ \hline \end{array}$$

$$\begin{array}{r} 89 \\ \times 5 \\ \hline \end{array}$$

$$\begin{array}{r} 140 \\ \div 5 \\ \hline \end{array}$$

$$\begin{array}{r} 688 \\ \div 8 \\ \hline \end{array}$$

Práctica con Bolas de Nieve (B)

Nombre: _____

Fecha: _____

Lanza cada bola de nieve a la diana correcta.

$$\begin{array}{r} 183 \\ \div 3 \\ \hline \end{array}$$



$$\begin{array}{r} 35 \\ + 65 \\ \hline \end{array}$$



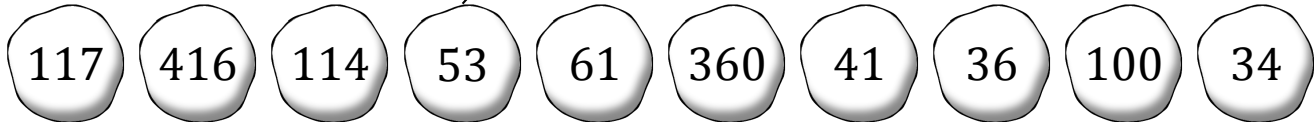
$$\begin{array}{r} 79 \\ - 38 \\ \hline \end{array}$$



$$\begin{array}{r} 318 \\ \div 6 \\ \hline \end{array}$$



$$\begin{array}{r} 72 \\ \times 5 \\ \hline \end{array}$$



$$\begin{array}{r} 60 \\ + 54 \\ \hline \end{array}$$



$$\begin{array}{r} 52 \\ \times 8 \\ \hline \end{array}$$



$$\begin{array}{r} 87 \\ + 30 \\ \hline \end{array}$$



$$\begin{array}{r} 48 \\ - 12 \\ \hline \end{array}$$



$$\begin{array}{r} 86 \\ - 52 \\ \hline \end{array}$$

Práctica con Bolas de Nieve (B) Respuestas

Nombre: _____

Fecha: _____

Lanza cada bola de nieve a la diana correcta.

$$\begin{array}{r} 183 \\ \div 3 \\ \hline \end{array}$$



$$\begin{array}{r} 35 \\ + 65 \\ \hline \end{array}$$



$$\begin{array}{r} 79 \\ - 38 \\ \hline \end{array}$$



$$\begin{array}{r} 318 \\ \div 6 \\ \hline \end{array}$$



$$\begin{array}{r} 72 \\ \times 5 \\ \hline \end{array}$$



117

416

114

53

61

360

41

36

100

34



$$\begin{array}{r} 60 \\ + 54 \\ \hline \end{array}$$



$$\begin{array}{r} 52 \\ \times 8 \\ \hline \end{array}$$



$$\begin{array}{r} 87 \\ + 30 \\ \hline \end{array}$$



$$\begin{array}{r} 48 \\ - 12 \\ \hline \end{array}$$



$$\begin{array}{r} 86 \\ - 52 \\ \hline \end{array}$$

Práctica con Bolas de Nieve (C)

Nombre: _____

Fecha: _____

Lanza cada bola de nieve a la diana correcta.

$$\begin{array}{r} 69 \\ + 28 \\ \hline \end{array}$$



$$\begin{array}{r} 108 \\ - 66 \\ \hline \end{array}$$



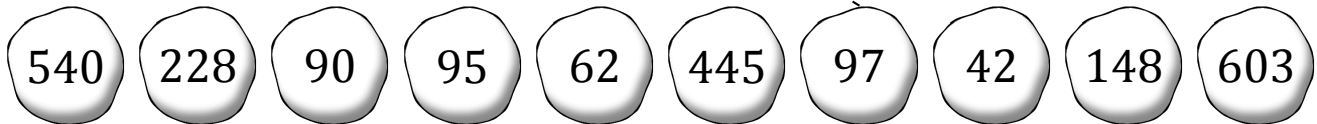
$$\begin{array}{r} 165 \\ - 75 \\ \hline \end{array}$$



$$\begin{array}{r} 85 \\ + 10 \\ \hline \end{array}$$



$$\begin{array}{r} 38 \\ \times 6 \\ \hline \end{array}$$



$$\begin{array}{r} 90 \\ \times 6 \\ \hline \end{array}$$



$$\begin{array}{r} 67 \\ \times 9 \\ \hline \end{array}$$



$$\begin{array}{r} 89 \\ \times 5 \\ \hline \end{array}$$



$$\begin{array}{r} 434 \\ \div 7 \\ \hline \end{array}$$



$$\begin{array}{r} 78 \\ + 70 \\ \hline \end{array}$$

Práctica con Bolas de Nieve (C) Respuestas

Nombre: _____

Fecha: _____

Lanza cada bola de nieve a la diana correcta.

$$\begin{array}{r} 69 \\ + 28 \\ \hline \end{array}$$



$$\begin{array}{r} 108 \\ - 66 \\ \hline \end{array}$$



$$\begin{array}{r} 165 \\ - 75 \\ \hline \end{array}$$



$$\begin{array}{r} 85 \\ + 10 \\ \hline \end{array}$$



$$\begin{array}{r} 38 \\ \times 6 \\ \hline \end{array}$$



540

228

90

95

62

445

97

42

148

603



$$\begin{array}{r} 90 \\ \times 6 \\ \hline \end{array}$$



$$\begin{array}{r} 67 \\ \times 9 \\ \hline \end{array}$$



$$\begin{array}{r} 89 \\ \times 5 \\ \hline \end{array}$$



$$\begin{array}{r} 434 \\ \div 7 \\ \hline \end{array}$$



$$\begin{array}{r} 78 \\ + 70 \\ \hline \end{array}$$

Práctica con Bolas de Nieve (D)

Nombre: _____

Fecha: _____

Lanza cada bola de nieve a la diana correcta.

$$\begin{array}{r} 73 \\ + 50 \\ \hline \end{array}$$



$$\begin{array}{r} 78 \\ \times 3 \\ \hline \end{array}$$




$$\begin{array}{r} 167 \\ - 72 \\ \hline \end{array}$$



$$\begin{array}{r} 80 \\ + 94 \\ \hline \end{array}$$



$$\begin{array}{r} 43 \\ + 26 \\ \hline \end{array}$$



$$\begin{array}{r} 420 \\ \div 6 \\ \hline \end{array}$$



$$\begin{array}{r} 376 \\ \div 4 \\ \hline \end{array}$$



$$\begin{array}{r} 45 \\ + 62 \\ \hline \end{array}$$



$$\begin{array}{r} 94 \\ + 98 \\ \hline \end{array}$$



$$\begin{array}{r} 156 \\ \div 6 \\ \hline \end{array}$$

Práctica con Bolas de Nieve (D) Respuestas

Nombre: _____

Fecha: _____

Lanza cada bola de nieve a la diana correcta.

$$\begin{array}{r} 73 \\ + 50 \\ \hline \end{array}$$



$$\begin{array}{r} 78 \\ \times 3 \\ \hline \end{array}$$



$$\begin{array}{r} 167 \\ - 72 \\ \hline \end{array}$$



$$\begin{array}{r} 80 \\ + 94 \\ \hline \end{array}$$



$$\begin{array}{r} 43 \\ + 26 \\ \hline \end{array}$$



26

70

234

95

94

69

192

123

107

174



$$\begin{array}{r} 420 \\ \div 6 \\ \hline \end{array}$$



$$\begin{array}{r} 376 \\ \div 4 \\ \hline \end{array}$$



$$\begin{array}{r} 45 \\ + 62 \\ \hline \end{array}$$



$$\begin{array}{r} 94 \\ + 98 \\ \hline \end{array}$$



$$\begin{array}{r} 156 \\ \div 6 \\ \hline \end{array}$$

Práctica con Bolas de Nieve (E)

Nombre: _____

Fecha: _____

Lanza cada bola de nieve a la diana correcta.

$$\begin{array}{r} 37 \\ \times 9 \\ \hline \end{array}$$



$$\begin{array}{r} 301 \\ \div 7 \\ \hline \end{array}$$



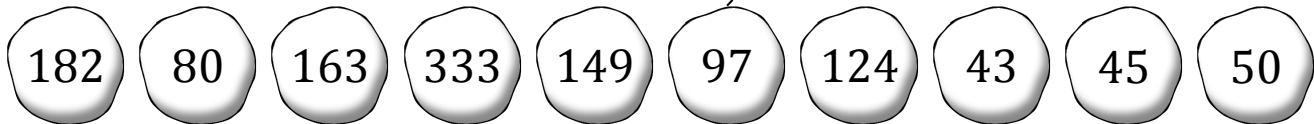
$$\begin{array}{r} 240 \\ \div 3 \\ \hline \end{array}$$



$$\begin{array}{r} 96 \\ + 53 \\ \hline \end{array}$$



$$\begin{array}{r} 679 \\ \div 7 \\ \hline \end{array}$$



$$\begin{array}{r} 65 \\ + 98 \\ \hline \end{array}$$



$$\begin{array}{r} 54 \\ + 70 \\ \hline \end{array}$$



$$\begin{array}{r} 32 \\ + 18 \\ \hline \end{array}$$



$$\begin{array}{r} 26 \\ \times 7 \\ \hline \end{array}$$



$$\begin{array}{r} 135 \\ \div 3 \\ \hline \end{array}$$

Práctica con Bolas de Nieve (E) Respuestas

Nombre: _____

Fecha: _____

Lanza cada bola de nieve a la diana correcta.

$$\begin{array}{r} 37 \\ \times 9 \\ \hline \end{array}$$



$$\begin{array}{r} 301 \\ \div 7 \\ \hline \end{array}$$



$$\begin{array}{r} 240 \\ \div 3 \\ \hline \end{array}$$



$$\begin{array}{r} 96 \\ + 53 \\ \hline \end{array}$$



$$\begin{array}{r} 679 \\ \div 7 \\ \hline \end{array}$$



182

80

163

333

149

97

124

43

45

50



$$\begin{array}{r} 65 \\ + 98 \\ \hline \end{array}$$



$$\begin{array}{r} 54 \\ + 70 \\ \hline \end{array}$$



$$\begin{array}{r} 32 \\ + 18 \\ \hline \end{array}$$



$$\begin{array}{r} 26 \\ \times 7 \\ \hline \end{array}$$



$$\begin{array}{r} 135 \\ \div 3 \\ \hline \end{array}$$

Práctica con Bolas de Nieve (F)

Nombre: _____

Fecha: _____

Lanza cada bola de nieve a la diana correcta.

$$\begin{array}{r} 88 \\ \times 2 \\ \hline \end{array}$$



$$\begin{array}{r} 117 \\ - 84 \\ \hline \end{array}$$



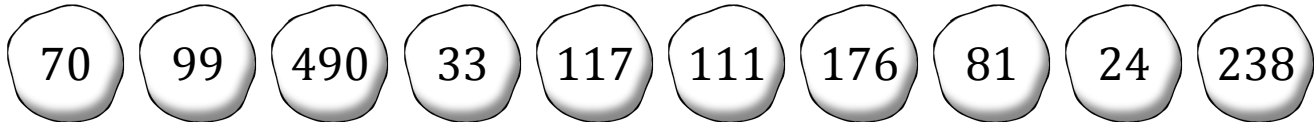
$$\begin{array}{r} 729 \\ \div 9 \\ \hline \end{array}$$



$$\begin{array}{r} 34 \\ \times 7 \\ \hline \end{array}$$



$$\begin{array}{r} 31 \\ + 80 \\ \hline \end{array}$$



$$\begin{array}{r} 198 \\ \div 2 \\ \hline \end{array}$$



$$\begin{array}{r} 14 \\ \times 5 \\ \hline \end{array}$$



$$\begin{array}{r} 98 \\ \times 5 \\ \hline \end{array}$$



$$\begin{array}{r} 121 \\ - 97 \\ \hline \end{array}$$



$$\begin{array}{r} 39 \\ \times 3 \\ \hline \end{array}$$

Práctica con Bolas de Nieve (F) Respuestas

Nombre: _____

Fecha: _____

Lanza cada bola de nieve a la diana correcta.

$$\begin{array}{r} 88 \\ \times 2 \\ \hline \end{array}$$

$$\begin{array}{r} 117 \\ - 84 \\ \hline \end{array}$$

$$\begin{array}{r} 729 \\ \div 9 \\ \hline \end{array}$$

$$\begin{array}{r} 34 \\ \times 7 \\ \hline \end{array}$$

$$\begin{array}{r} 31 \\ + 80 \\ \hline \end{array}$$



70

99

490

33

117

111

176

81

24

238



$$\begin{array}{r} 198 \\ \div 2 \\ \hline \end{array}$$

$$\begin{array}{r} 14 \\ \times 5 \\ \hline \end{array}$$

$$\begin{array}{r} 98 \\ \times 5 \\ \hline \end{array}$$

$$\begin{array}{r} 121 \\ - 97 \\ \hline \end{array}$$

$$\begin{array}{r} 39 \\ \times 3 \\ \hline \end{array}$$

Práctica con Bolas de Nieve (G)

Nombre: _____

Fecha: _____

Lanza cada bola de nieve a la diana correcta.

$$\begin{array}{r} 115 \\ - 26 \\ \hline \end{array}$$



$$\begin{array}{r} 116 \\ \div 2 \\ \hline \end{array}$$



$$\begin{array}{r} 78 \\ \div 3 \\ \hline \end{array}$$



$$\begin{array}{r} 360 \\ \div 5 \\ \hline \end{array}$$



$$\begin{array}{r} 438 \\ \div 6 \\ \hline \end{array}$$



89

88

26

137

58

50

45

73

95

72



$$\begin{array}{r} 171 \\ - 83 \\ \hline \end{array}$$



$$\begin{array}{r} 108 \\ - 63 \\ \hline \end{array}$$



$$\begin{array}{r} 97 \\ + 40 \\ \hline \end{array}$$



$$\begin{array}{r} 10 \\ \times 5 \\ \hline \end{array}$$













$$\begin{array}{r} 190 \\ \div 2 \\ \hline \end{array}$$

Práctica con Bolas de Nieve (G) Respuestas

Nombre: _____

Fecha: _____

Lanza cada bola de nieve a la diana correcta.

$\begin{array}{r} 115 \\ - 26 \\ \hline \end{array}$	$\begin{array}{r} 116 \\ \div 2 \\ \hline \end{array}$	$\begin{array}{r} 78 \\ \div 3 \\ \hline \end{array}$	$\begin{array}{r} 360 \\ \div 5 \\ \hline \end{array}$	$\begin{array}{r} 438 \\ \div 6 \\ \hline \end{array}$					
									
89	88	26	137	58	50	45	73	95	72
									
$\begin{array}{r} 171 \\ - 83 \\ \hline \end{array}$	$\begin{array}{r} 108 \\ - 63 \\ \hline \end{array}$	$\begin{array}{r} 97 \\ + 40 \\ \hline \end{array}$	$\begin{array}{r} 10 \\ \times 5 \\ \hline \end{array}$	$\begin{array}{r} 190 \\ \div 2 \\ \hline \end{array}$					

Práctica con Bolas de Nieve (H)

Nombre: _____

Fecha: _____

Lanza cada bola de nieve a la diana correcta.

$$\begin{array}{r} 490 \\ \div 7 \\ \hline \end{array}$$



$$\begin{array}{r} 157 \\ - 71 \\ \hline \end{array}$$



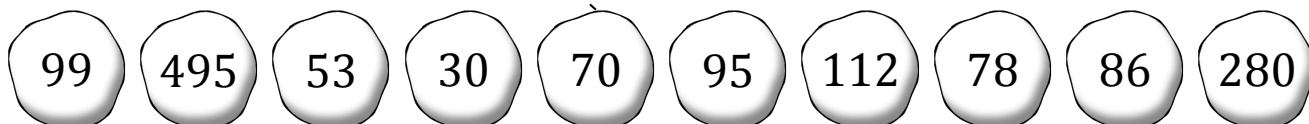
$$\begin{array}{r} 56 \\ \times 5 \\ \hline \end{array}$$



$$\begin{array}{r} 37 \\ + 75 \\ \hline \end{array}$$



$$\begin{array}{r} 55 \\ \times 9 \\ \hline \end{array}$$



$$\begin{array}{r} 109 \\ - 31 \\ \hline \end{array}$$



$$\begin{array}{r} 116 \\ - 86 \\ \hline \end{array}$$



$$\begin{array}{r} 570 \\ \div 6 \\ \hline \end{array}$$



$$\begin{array}{r} 594 \\ \div 6 \\ \hline \end{array}$$



$$\begin{array}{r} 64 \\ - 11 \\ \hline \end{array}$$

Práctica con Bolas de Nieve (H) Respuestas

Nombre: _____

Fecha: _____

Lanza cada bola de nieve a la diana correcta.

$$\begin{array}{r} 490 \\ \div 7 \\ \hline \end{array}$$



$$\begin{array}{r} 157 \\ - 71 \\ \hline \end{array}$$



$$\begin{array}{r} 56 \\ \times 5 \\ \hline \end{array}$$



$$\begin{array}{r} 37 \\ + 75 \\ \hline \end{array}$$



$$\begin{array}{r} 55 \\ \times 9 \\ \hline \end{array}$$



99 495 53 30 70 95 112 78 86 280



$$\begin{array}{r} 109 \\ - 31 \\ \hline \end{array}$$



$$\begin{array}{r} 116 \\ - 86 \\ \hline \end{array}$$



$$\begin{array}{r} 570 \\ \div 6 \\ \hline \end{array}$$



$$\begin{array}{r} 594 \\ \div 6 \\ \hline \end{array}$$



$$\begin{array}{r} 64 \\ - 11 \\ \hline \end{array}$$

Práctica con Bolas de Nieve (I)

Nombre: _____

Fecha: _____

Lanza cada bola de nieve a la diana correcta.

$$\begin{array}{r} 432 \\ \div 9 \\ \hline \end{array}$$



$$\begin{array}{r} 21 \\ + 85 \\ \hline \end{array}$$




$$\begin{array}{r} 444 \\ \div 6 \\ \hline \end{array}$$



$$\begin{array}{r} 315 \\ \div 5 \\ \hline \end{array}$$



$$\begin{array}{r} 77 \\ \times 6 \\ \hline \end{array}$$



$$\begin{array}{r} 819 \\ \div 9 \\ \hline \end{array}$$



$$\begin{array}{r} 40 \\ + 47 \\ \hline \end{array}$$



$$\begin{array}{r} 124 \\ - 73 \\ \hline \end{array}$$



$$\begin{array}{r} 27 \\ + 76 \\ \hline \end{array}$$



$$\begin{array}{r} 66 \\ \div 3 \\ \hline \end{array}$$

Práctica con Bolas de Nieve (I) Respuestas

Nombre: _____

Fecha: _____

Lanza cada bola de nieve a la diana correcta.

$$\begin{array}{r} 432 \\ \div 9 \\ \hline \end{array}$$



$$\begin{array}{r} 21 \\ + 85 \\ \hline \end{array}$$



$$\begin{array}{r} 444 \\ \div 6 \\ \hline \end{array}$$



$$\begin{array}{r} 315 \\ \div 5 \\ \hline \end{array}$$



$$\begin{array}{r} 77 \\ \times 6 \\ \hline \end{array}$$



462

51

74

63

87

106

103

48

22

91

$$\begin{array}{r} 819 \\ \div 9 \\ \hline \end{array}$$



$$\begin{array}{r} 40 \\ + 47 \\ \hline \end{array}$$



$$\begin{array}{r} 124 \\ - 73 \\ \hline \end{array}$$



$$\begin{array}{r} 27 \\ + 76 \\ \hline \end{array}$$



$$\begin{array}{r} 66 \\ \div 3 \\ \hline \end{array}$$



Práctica con Bolas de Nieve (J)

Nombre: _____

Fecha: _____

Lanza cada bola de nieve a la diana correcta.

$$\begin{array}{r} 96 \\ \times 8 \\ \hline \end{array}$$



$$\begin{array}{r} 190 \\ - 92 \\ \hline \end{array}$$




$$\begin{array}{r} 525 \\ \div 7 \\ \hline \end{array}$$



$$\begin{array}{r} 67 \\ + 72 \\ \hline \end{array}$$



$$\begin{array}{r} 117 \\ - 31 \\ \hline \end{array}$$



$$\begin{array}{r} 138 \\ \div 2 \\ \hline \end{array}$$



$$\begin{array}{r} 59 \\ \times 4 \\ \hline \end{array}$$



$$\begin{array}{r} 70 \\ \times 8 \\ \hline \end{array}$$



$$\begin{array}{r} 320 \\ \div 4 \\ \hline \end{array}$$



$$\begin{array}{r} 135 \\ \div 9 \\ \hline \end{array}$$

Práctica con Bolas de Nieve (J) Respuestas

Nombre: _____

Fecha: _____

Lanza cada bola de nieve a la diana correcta.

$$\begin{array}{r} 96 \\ \times 8 \\ \hline \end{array}$$



$$\begin{array}{r} 190 \\ - 92 \\ \hline \end{array}$$



$$\begin{array}{r} 525 \\ \div 7 \\ \hline \end{array}$$



$$\begin{array}{r} 67 \\ + 72 \\ \hline \end{array}$$



$$\begin{array}{r} 117 \\ - 31 \\ \hline \end{array}$$



98

80

560

75

768

15

86

139

236

69



$$\begin{array}{r} 138 \\ \div 2 \\ \hline \end{array}$$



$$\begin{array}{r} 59 \\ \times 4 \\ \hline \end{array}$$



$$\begin{array}{r} 70 \\ \times 8 \\ \hline \end{array}$$



$$\begin{array}{r} 320 \\ \div 4 \\ \hline \end{array}$$



$$\begin{array}{r} 135 \\ \div 9 \\ \hline \end{array}$$