

# Práctica con Bolas de Nieve (A)

Nombre: \_\_\_\_\_

Fecha: \_\_\_\_\_

Lanza cada bola de nieve a la diana correcta.

$$\begin{array}{r} 103 \\ \times 2 \\ \hline \end{array}$$



$$\begin{array}{r} 877 \\ \times 4 \\ \hline \end{array}$$



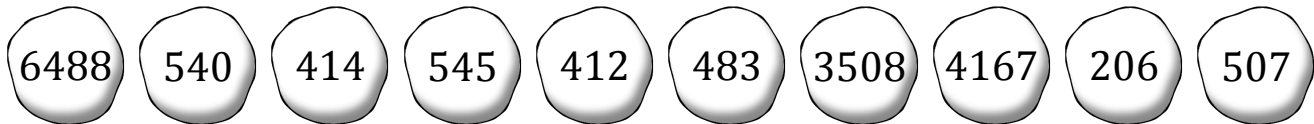
$$\begin{array}{r} 822 \\ - 408 \\ \hline \end{array}$$



$$\begin{array}{r} 824 \\ \div 2 \\ \hline \end{array}$$



$$\begin{array}{r} 4360 \\ \div 8 \\ \hline \end{array}$$



$$\begin{array}{r} 463 \\ \times 9 \\ \hline \end{array}$$



$$\begin{array}{r} 1352 \\ - 869 \\ \hline \end{array}$$



$$\begin{array}{r} 811 \\ \times 8 \\ \hline \end{array}$$



$$\begin{array}{r} 4563 \\ \div 9 \\ \hline \end{array}$$



$$\begin{array}{r} 4860 \\ \div 9 \\ \hline \end{array}$$

# Práctica con Bolas de Nieve (A) Respuestas

Nombre: \_\_\_\_\_

Fecha: \_\_\_\_\_

Lanza cada bola de nieve a la diana correcta.

$$\begin{array}{r} 103 \\ \times 2 \\ \hline \end{array}$$



$$\begin{array}{r} 877 \\ \times 4 \\ \hline \end{array}$$



$$\begin{array}{r} 822 \\ - 408 \\ \hline \end{array}$$



$$\begin{array}{r} 824 \\ \div 2 \\ \hline \end{array}$$



$$\begin{array}{r} 4360 \\ \div 8 \\ \hline \end{array}$$



- 6488   540   414   545   412   483   3508   4167   206   507



$$\begin{array}{r} 463 \\ \times 9 \\ \hline \end{array}$$



$$\begin{array}{r} 1352 \\ - 869 \\ \hline \end{array}$$



$$\begin{array}{r} 811 \\ \times 8 \\ \hline \end{array}$$



$$\begin{array}{r} 4563 \\ \div 9 \\ \hline \end{array}$$



$$\begin{array}{r} 4860 \\ \div 9 \\ \hline \end{array}$$

# Práctica con Bolas de Nieve (B)

Nombre: \_\_\_\_\_

Fecha: \_\_\_\_\_

Lanza cada bola de nieve a la diana correcta.

$$\begin{array}{r} 1195 \\ - 808 \\ \hline \end{array}$$



$$\begin{array}{r} 1280 \\ \div 4 \\ \hline \end{array}$$



$$\begin{array}{r} 876 \\ - 751 \\ \hline \end{array}$$



$$\begin{array}{r} 344 \\ \times 7 \\ \hline \end{array}$$



$$\begin{array}{r} 423 \\ + 412 \\ \hline \end{array}$$



838

125

2408

4565

387

320

686

835

966

715



$$\begin{array}{r} 913 \\ \times 5 \\ \hline \end{array}$$



$$\begin{array}{r} 835 \\ - 120 \\ \hline \end{array}$$



$$\begin{array}{r} 163 \\ + 675 \\ \hline \end{array}$$



$$\begin{array}{r} 2898 \\ \div 3 \\ \hline \end{array}$$



$$\begin{array}{r} 1253 \\ - 567 \\ \hline \end{array}$$

# Práctica con Bolas de Nieve (B) Respuestas

Nombre: \_\_\_\_\_

Fecha: \_\_\_\_\_

Lanza cada bola de nieve a la diana correcta.

$$\begin{array}{r} 1195 \\ - 808 \\ \hline \end{array}$$



$$\begin{array}{r} 1280 \\ \div 4 \\ \hline \end{array}$$



$$\begin{array}{r} 876 \\ - 751 \\ \hline \end{array}$$



$$\begin{array}{r} 344 \\ \times 7 \\ \hline \end{array}$$



$$\begin{array}{r} 423 \\ + 412 \\ \hline \end{array}$$



838

125

2408

4565

387

320

686

835

966

715



$$\begin{array}{r} 913 \\ \times 5 \\ \hline \end{array}$$



$$\begin{array}{r} 835 \\ - 120 \\ \hline \end{array}$$



$$\begin{array}{r} 163 \\ + 675 \\ \hline \end{array}$$



$$\begin{array}{r} 2898 \\ \div 3 \\ \hline \end{array}$$



$$\begin{array}{r} 1253 \\ - 567 \\ \hline \end{array}$$

# Práctica con Bolas de Nieve (C)

Nombre: \_\_\_\_\_

Fecha: \_\_\_\_\_

Lanza cada bola de nieve a la diana correcta.

$$\begin{array}{r} 3522 \\ \div 6 \\ \hline \end{array}$$



$$\begin{array}{r} 307 \\ - 139 \\ \hline \end{array}$$



$$\begin{array}{r} 429 \\ + 344 \\ \hline \end{array}$$



$$\begin{array}{r} 1229 \\ - 875 \\ \hline \end{array}$$



$$\begin{array}{r} 4560 \\ \div 8 \\ \hline \end{array}$$



$$\begin{array}{r} 1239 \\ - 343 \\ \hline \end{array}$$



$$\begin{array}{r} 103 \\ \times 2 \\ \hline \end{array}$$



$$\begin{array}{r} 589 \\ + 592 \\ \hline \end{array}$$



$$\begin{array}{r} 553 \\ + 298 \\ \hline \end{array}$$



$$\begin{array}{r} 1652 \\ \div 4 \\ \hline \end{array}$$

# Práctica con Bolas de Nieve (C) Respuestas

Nombre: \_\_\_\_\_

Fecha: \_\_\_\_\_

Lanza cada bola de nieve a la diana correcta.

$$\begin{array}{r} 3522 \\ \div 6 \\ \hline \end{array}$$



$$\begin{array}{r} 307 \\ - 139 \\ \hline \end{array}$$



$$\begin{array}{r} 429 \\ + 344 \\ \hline \end{array}$$



$$\begin{array}{r} 1229 \\ - 875 \\ \hline \end{array}$$



$$\begin{array}{r} 4560 \\ \div 8 \\ \hline \end{array}$$



354

773

570

1181

413

851

896

587

168

206



$$\begin{array}{r} 1239 \\ - 343 \\ \hline \end{array}$$



$$\begin{array}{r} 103 \\ \times 2 \\ \hline \end{array}$$



$$\begin{array}{r} 589 \\ + 592 \\ \hline \end{array}$$



$$\begin{array}{r} 553 \\ + 298 \\ \hline \end{array}$$



$$\begin{array}{r} 1652 \\ \div 4 \\ \hline \end{array}$$

# Práctica con Bolas de Nieve (D)

Nombre: \_\_\_\_\_

Fecha: \_\_\_\_\_

Lanza cada bola de nieve a la diana correcta.

$$\begin{array}{r} 351 \\ \times 8 \\ \hline \end{array}$$



$$\begin{array}{r} 6342 \\ \div 7 \\ \hline \end{array}$$



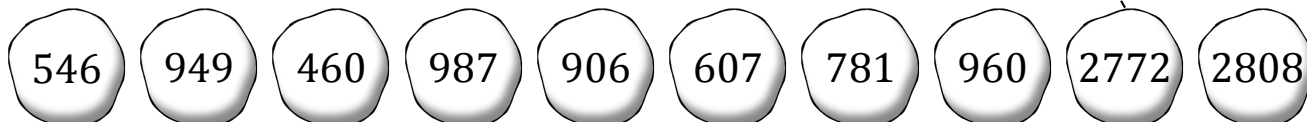
$$\begin{array}{r} 770 \\ + 217 \\ \hline \end{array}$$



$$\begin{array}{r} 924 \\ \times 3 \\ \hline \end{array}$$



$$\begin{array}{r} 182 \\ \times 3 \\ \hline \end{array}$$



$$\begin{array}{r} 3124 \\ \div 4 \\ \hline \end{array}$$



$$\begin{array}{r} 605 \\ + 344 \\ \hline \end{array}$$



$$\begin{array}{r} 836 \\ - 229 \\ \hline \end{array}$$



$$\begin{array}{r} 120 \\ \times 8 \\ \hline \end{array}$$



$$\begin{array}{r} 1380 \\ \div 3 \\ \hline \end{array}$$

# Práctica con Bolas de Nieve (D) Respuestas

Nombre: \_\_\_\_\_

Fecha: \_\_\_\_\_

Lanza cada bola de nieve a la diana correcta.

$$\begin{array}{r} 351 \\ \times 8 \\ \hline \end{array}$$



$$\begin{array}{r} 6342 \\ \div 7 \\ \hline \end{array}$$



$$\begin{array}{r} 770 \\ + 217 \\ \hline \end{array}$$



$$\begin{array}{r} 924 \\ \times 3 \\ \hline \end{array}$$



$$\begin{array}{r} 182 \\ \times 3 \\ \hline \end{array}$$



- 546   949   460   987   906   607   781   960   2772   2808



$$\begin{array}{r} 3124 \\ \div 4 \\ \hline \end{array}$$



$$\begin{array}{r} 605 \\ + 344 \\ \hline \end{array}$$



$$\begin{array}{r} 836 \\ - 229 \\ \hline \end{array}$$



$$\begin{array}{r} 120 \\ \times 8 \\ \hline \end{array}$$



$$\begin{array}{r} 1380 \\ \div 3 \\ \hline \end{array}$$



# Práctica con Bolas de Nieve (E)

Nombre: \_\_\_\_\_

Fecha: \_\_\_\_\_

Lanza cada bola de nieve a la diana correcta.

$$\begin{array}{r} 939 \\ \times 3 \\ \hline \end{array}$$



$$\begin{array}{r} 453 \\ \times 2 \\ \hline \end{array}$$



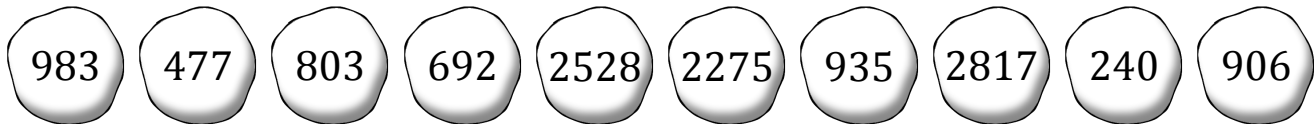
$$\begin{array}{r} 5610 \\ \div 6 \\ \hline \end{array}$$



$$\begin{array}{r} 2160 \\ \div 9 \\ \hline \end{array}$$



$$\begin{array}{r} 4915 \\ \div 5 \\ \hline \end{array}$$



$$\begin{array}{r} 455 \\ \times 5 \\ \hline \end{array}$$



$$\begin{array}{r} 316 \\ \times 8 \\ \hline \end{array}$$



$$\begin{array}{r} 805 \\ - 328 \\ \hline \end{array}$$



$$\begin{array}{r} 1541 \\ - 738 \\ \hline \end{array}$$



$$\begin{array}{r} 1560 \\ - 868 \\ \hline \end{array}$$

# Práctica con Bolas de Nieve (E) Respuestas

Nombre: \_\_\_\_\_

Fecha: \_\_\_\_\_

Lanza cada bola de nieve a la diana correcta.

$$\begin{array}{r} 939 \\ \times 3 \\ \hline \end{array}$$



$$\begin{array}{r} 453 \\ \times 2 \\ \hline \end{array}$$



$$\begin{array}{r} 5610 \\ \div 6 \\ \hline \end{array}$$



$$\begin{array}{r} 2160 \\ \div 9 \\ \hline \end{array}$$



$$\begin{array}{r} 4915 \\ \div 5 \\ \hline \end{array}$$



983

477

803

692

2528

2275

935

2817

240

906



$$\begin{array}{r} 455 \\ \times 5 \\ \hline \end{array}$$



$$\begin{array}{r} 316 \\ \times 8 \\ \hline \end{array}$$



$$\begin{array}{r} 805 \\ - 328 \\ \hline \end{array}$$



$$\begin{array}{r} 1541 \\ - 738 \\ \hline \end{array}$$



$$\begin{array}{r} 1560 \\ - 868 \\ \hline \end{array}$$

# Práctica con Bolas de Nieve (F)

Nombre: \_\_\_\_\_

Fecha: \_\_\_\_\_

Lanza cada bola de nieve a la diana correcta.

$$\begin{array}{r} 872 \\ \times 2 \\ \hline \end{array}$$



$$\begin{array}{r} 898 \\ \times 7 \\ \hline \end{array}$$



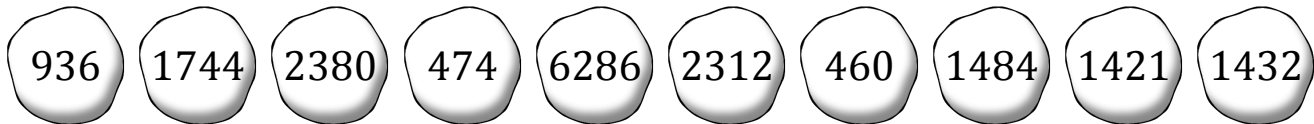
$$\begin{array}{r} 1872 \\ \div 2 \\ \hline \end{array}$$



$$\begin{array}{r} 885 \\ + 599 \\ \hline \end{array}$$



$$\begin{array}{r} 3220 \\ \div 7 \\ \hline \end{array}$$



$$\begin{array}{r} 716 \\ \times 2 \\ \hline \end{array}$$



$$\begin{array}{r} 289 \\ \times 8 \\ \hline \end{array}$$



$$\begin{array}{r} 476 \\ \times 5 \\ \hline \end{array}$$



$$\begin{array}{r} 4266 \\ \div 9 \\ \hline \end{array}$$



$$\begin{array}{r} 729 \\ + 692 \\ \hline \end{array}$$

# Práctica con Bolas de Nieve (F) Respuestas

Nombre: \_\_\_\_\_

Fecha: \_\_\_\_\_

Lanza cada bola de nieve a la diana correcta.

$$\begin{array}{r} 872 \\ \times 2 \\ \hline \end{array}$$

$$\begin{array}{r} 898 \\ \times 7 \\ \hline \end{array}$$

$$\begin{array}{r} 1872 \\ \div 2 \\ \hline \end{array}$$

$$\begin{array}{r} 885 \\ + 599 \\ \hline \end{array}$$

$$\begin{array}{r} 3220 \\ \div 7 \\ \hline \end{array}$$



- 936   1744   2380   474   6286   2312   460   1484   1421   1432



$$\begin{array}{r} 716 \\ \times 2 \\ \hline \end{array}$$

$$\begin{array}{r} 289 \\ \times 8 \\ \hline \end{array}$$

$$\begin{array}{r} 476 \\ \times 5 \\ \hline \end{array}$$

$$\begin{array}{r} 4266 \\ \div 9 \\ \hline \end{array}$$

$$\begin{array}{r} 729 \\ + 692 \\ \hline \end{array}$$

# Práctica con Bolas de Nieve (G)

Nombre: \_\_\_\_\_

Fecha: \_\_\_\_\_

Lanza cada bola de nieve a la diana correcta.

$$\begin{array}{r} 566 \\ + 710 \\ \hline \end{array}$$



$$\begin{array}{r} 704 \\ \times 6 \\ \hline \end{array}$$



$$\begin{array}{r} 1806 \\ \div 7 \\ \hline \end{array}$$



$$\begin{array}{r} 1680 \\ \div 3 \\ \hline \end{array}$$



$$\begin{array}{r} 226 \\ + 326 \\ \hline \end{array}$$



986

957

239

552

1387

4224

158

258

560

1276



$$\begin{array}{r} 686 \\ + 701 \\ \hline \end{array}$$



$$\begin{array}{r} 1415 \\ - 458 \\ \hline \end{array}$$



$$\begin{array}{r} 1264 \\ \div 8 \\ \hline \end{array}$$



$$\begin{array}{r} 862 \\ - 623 \\ \hline \end{array}$$



$$\begin{array}{r} 493 \\ \times 2 \\ \hline \end{array}$$

# Práctica con Bolas de Nieve (G) Respuestas

Nombre: \_\_\_\_\_

Fecha: \_\_\_\_\_

Lanza cada bola de nieve a la diana correcta.

$$\begin{array}{r} 566 \\ + 710 \\ \hline \end{array}$$



$$\begin{array}{r} 704 \\ \times 6 \\ \hline \end{array}$$



$$\begin{array}{r} 1806 \\ \div 7 \\ \hline \end{array}$$



$$\begin{array}{r} 1680 \\ \div 3 \\ \hline \end{array}$$



$$\begin{array}{r} 226 \\ + 326 \\ \hline \end{array}$$



986

957

239

552

1387

4224

158

258

560

1276



$$\begin{array}{r} 686 \\ + 701 \\ \hline \end{array}$$



$$\begin{array}{r} 1415 \\ - 458 \\ \hline \end{array}$$



$$\begin{array}{r} 1264 \\ \div 8 \\ \hline \end{array}$$



$$\begin{array}{r} 862 \\ - 623 \\ \hline \end{array}$$



$$\begin{array}{r} 493 \\ \times 2 \\ \hline \end{array}$$

# Práctica con Bolas de Nieve (H)

Nombre: \_\_\_\_\_

Fecha: \_\_\_\_\_

Lanza cada bola de nieve a la diana correcta.

$$\begin{array}{r} 619 \\ + 188 \\ \hline \end{array}$$



$$\begin{array}{r} 3112 \\ \div 8 \\ \hline \end{array}$$



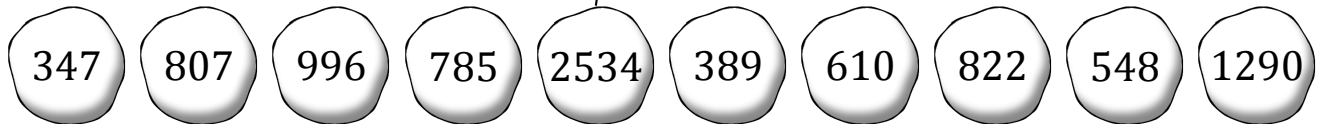
$$\begin{array}{r} 362 \\ \times 7 \\ \hline \end{array}$$



$$\begin{array}{r} 1929 \\ - 933 \\ \hline \end{array}$$



$$\begin{array}{r} 991 \\ - 443 \\ \hline \end{array}$$



$$\begin{array}{r} 1388 \\ \div 4 \\ \hline \end{array}$$



$$\begin{array}{r} 4710 \\ \div 6 \\ \hline \end{array}$$



$$\begin{array}{r} 430 \\ \times 3 \\ \hline \end{array}$$



$$\begin{array}{r} 2466 \\ \div 3 \\ \hline \end{array}$$



$$\begin{array}{r} 4270 \\ \div 7 \\ \hline \end{array}$$

# Práctica con Bolas de Nieve (H) Respuestas

Nombre: \_\_\_\_\_

Fecha: \_\_\_\_\_

Lanza cada bola de nieve a la diana correcta.

$$\begin{array}{r} 619 \\ + 188 \\ \hline \end{array}$$



$$\begin{array}{r} 3112 \\ \div 8 \\ \hline \end{array}$$



$$\begin{array}{r} 362 \\ \times 7 \\ \hline \end{array}$$



$$\begin{array}{r} 1929 \\ - 933 \\ \hline \end{array}$$



$$\begin{array}{r} 991 \\ - 443 \\ \hline \end{array}$$



347   807   996   785   2534   389   610   822   548   1290



$$\begin{array}{r} 1388 \\ \div 4 \\ \hline \end{array}$$



$$\begin{array}{r} 4710 \\ \div 6 \\ \hline \end{array}$$



$$\begin{array}{r} 430 \\ \times 3 \\ \hline \end{array}$$



$$\begin{array}{r} 2466 \\ \div 3 \\ \hline \end{array}$$



$$\begin{array}{r} 4270 \\ \div 7 \\ \hline \end{array}$$



# Práctica con Bolas de Nieve (I)

Nombre: \_\_\_\_\_

Fecha: \_\_\_\_\_

Lanza cada bola de nieve a la diana correcta.

$$\begin{array}{r} 4725 \\ \div 7 \\ \hline \end{array}$$



$$\begin{array}{r} 1930 \\ \div 5 \\ \hline \end{array}$$



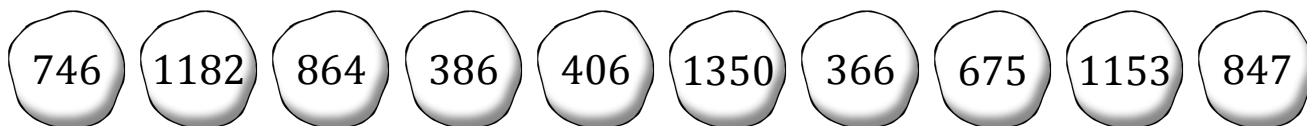
$$\begin{array}{r} 122 \\ \times 3 \\ \hline \end{array}$$



$$\begin{array}{r} 180 \\ + 566 \\ \hline \end{array}$$



$$\begin{array}{r} 1764 \\ - 917 \\ \hline \end{array}$$



$$\begin{array}{r} 479 \\ + 674 \\ \hline \end{array}$$



$$\begin{array}{r} 2436 \\ \div 6 \\ \hline \end{array}$$



$$\begin{array}{r} 144 \\ \times 6 \\ \hline \end{array}$$



$$\begin{array}{r} 609 \\ + 573 \\ \hline \end{array}$$



$$\begin{array}{r} 409 \\ + 941 \\ \hline \end{array}$$

# Práctica con Bolas de Nieve (I) Respuestas

Nombre: \_\_\_\_\_

Fecha: \_\_\_\_\_

Lanza cada bola de nieve a la diana correcta.

$$\begin{array}{r} 4725 \\ \div 7 \\ \hline \end{array}$$



$$\begin{array}{r} 1930 \\ \div 5 \\ \hline \end{array}$$



$$\begin{array}{r} 122 \\ \times 3 \\ \hline \end{array}$$



$$\begin{array}{r} 180 \\ + 566 \\ \hline \end{array}$$



$$\begin{array}{r} 1764 \\ - 917 \\ \hline \end{array}$$



- 746   1182   864   386   406   1350   366   675   1153   847



$$\begin{array}{r} 479 \\ + 674 \\ \hline \end{array}$$



$$\begin{array}{r} 2436 \\ \div 6 \\ \hline \end{array}$$



$$\begin{array}{r} 144 \\ \times 6 \\ \hline \end{array}$$



$$\begin{array}{r} 609 \\ + 573 \\ \hline \end{array}$$



$$\begin{array}{r} 409 \\ + 941 \\ \hline \end{array}$$

# Práctica con Bolas de Nieve (J)

Nombre: \_\_\_\_\_

Fecha: \_\_\_\_\_

Lanza cada bola de nieve a la diana correcta.

$$\begin{array}{r} 903 \\ - 289 \\ \hline \end{array}$$



$$\begin{array}{r} 276 \\ \times 7 \\ \hline \end{array}$$



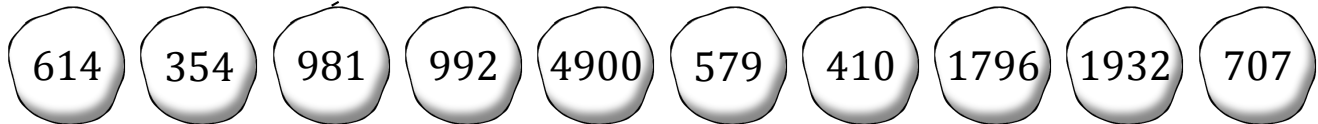
$$\begin{array}{r} 1061 \\ - 354 \\ \hline \end{array}$$



$$\begin{array}{r} 980 \\ \times 5 \\ \hline \end{array}$$



$$\begin{array}{r} 1447 \\ - 466 \\ \hline \end{array}$$



$$\begin{array}{r} 1002 \\ - 423 \\ \hline \end{array}$$



$$\begin{array}{r} 820 \\ \div 2 \\ \hline \end{array}$$



$$\begin{array}{r} 359 \\ + 633 \\ \hline \end{array}$$



$$\begin{array}{r} 812 \\ + 984 \\ \hline \end{array}$$



$$\begin{array}{r} 1182 \\ - 828 \\ \hline \end{array}$$

# Práctica con Bolas de Nieve (J) Respuestas

Nombre: \_\_\_\_\_

Fecha: \_\_\_\_\_

Lanza cada bola de nieve a la diana correcta.

$$\begin{array}{r} 903 \\ - 289 \\ \hline \end{array}$$

$$\begin{array}{r} 276 \\ \times 7 \\ \hline \end{array}$$

$$\begin{array}{r} 1061 \\ - 354 \\ \hline \end{array}$$

$$\begin{array}{r} 980 \\ \times 5 \\ \hline \end{array}$$

$$\begin{array}{r} 1447 \\ - 466 \\ \hline \end{array}$$



614

354

981

992

4900

579

410

1796

1932

707



$$\begin{array}{r} 1002 \\ - 423 \\ \hline \end{array}$$

$$\begin{array}{r} 820 \\ \div 2 \\ \hline \end{array}$$

$$\begin{array}{r} 359 \\ + 633 \\ \hline \end{array}$$

$$\begin{array}{r} 812 \\ + 984 \\ \hline \end{array}$$

$$\begin{array}{r} 1182 \\ - 828 \\ \hline \end{array}$$