


Proporciones de Imágenes de Otoño (A)

Nombre: _____


Fecha: _____

Determine cada proporción y simplifique si es necesario.



$$\text{acorn} : (\text{tree} + \text{acorn}) =$$

$$\text{tree} : \text{acorn} =$$




$$\text{branch} : (\text{leaf} + \text{branch}) =$$

$$\text{leaf} : \text{branch} =$$



$$\text{tree} : \text{leaf} =$$

$$\text{leaf} : (\text{tree} + \text{leaf}) =$$



$$\text{yellow leaf} : (\text{orange leaf} + \text{yellow leaf}) =$$

$$\text{orange leaf} : \text{yellow leaf} =$$

Proporciones de Imágenes de Otoño (A) Respuestas

Nombre: _____


Fecha: _____

Determine cada proporción y simplifique si es necesario.



$$\text{🌰} : (\text{🌳} + \text{🌰}) = 15 : 28$$

$$\text{🌳} : \text{🌰} = 13 : 15$$




$$\text{🍃} : (\text{🌼} + \text{🍃}) = 18 : 23$$

$$\text{🌼} : \text{🍃} = 5 : 18$$



$$\text{🌳} : \text{🍃} = 8 : 16 = 1 : 2$$

$$\text{🍃} : (\text{🌳} + \text{🍃}) = 16 : 24 = 2 : 3$$



$$\text{🍃} : (\text{🍂} + \text{🍃}) = 12 : 16 = 3 : 4$$

$$\text{🍂} : \text{🍃} = 4 : 12 = 1 : 3$$