


# Proporciones de Imágenes de Otoño (B)

Nombre: \_\_\_\_\_

Fecha: \_\_\_\_\_

Determine cada proporción y simplifique si es necesario.



$$\text{acorn} : \text{leafy branch} =$$

$$\text{leafy branch} : \text{acorn} =$$



$$\text{orange tree} : \text{yellow tree} =$$

$$\text{yellow tree} : \text{orange tree} =$$



$$\text{maple leaf} : \text{oak leaf} =$$

$$\text{oak leaf} : \text{maple leaf} =$$



$$\text{yellow maple leaf} : \text{orange maple leaf} =$$


$$\text{orange maple leaf} : \text{yellow maple leaf} =$$

# Proporciones de Imágenes de Otoño (B) Respuestas

Nombre: \_\_\_\_\_


Fecha: \_\_\_\_\_

Determine cada proporción y simplifique si es necesario.



$$\text{acorn} : \text{leafy branch} = 12 : 18 = 2 : 3$$

$$\text{leafy branch} : \text{acorn} = 18 : 12 = 3 : 2$$



$$\text{orange tree} : \text{yellow tree} = 22 : 14 = 11 : 7$$

$$\text{yellow tree} : \text{orange tree} = 14 : 22 = 7 : 11$$



$$\text{maple leaf} : \text{oak leaf} = 9 : 17$$

$$\text{oak leaf} : \text{maple leaf} = 17 : 9$$



$$\text{yellow maple leaf} : \text{orange oak leaf} = 23 : 22$$

$$\text{orange oak leaf} : \text{yellow maple leaf} = 22 : 23$$