

Proporciones de Imágenes de Otoño (E)

Nombre: _____

Fecha: _____

Determine cada proporción y simplifique si es necesario.




$$\text{Tree} : \text{Leaf} =$$

$$\text{Leaf} : \text{Tree} =$$



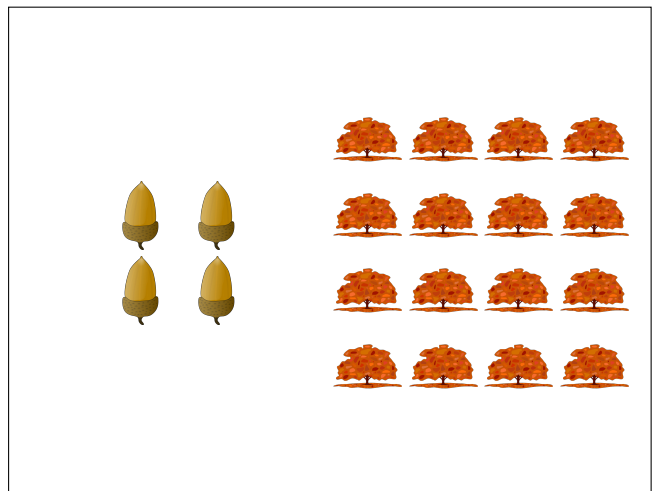
$$\text{Branch} : \text{Leaf} =$$

$$\text{Leaf} : \text{Branch} =$$



$$\text{Maple Leaf} : \text{Small Leaf} =$$

$$\text{Small Leaf} : \text{Maple Leaf} =$$



$$\text{Acorn} : \text{Tree} =$$

$$\text{Tree} : \text{Acorn} =$$

Proporciones de Imágenes de Otoño (E) Respuestas

Nombre: _____

Fecha: _____

Determine cada proporción y simplifique si es necesario.




$$\text{Tree} : \text{Leaf} = 19 : 23$$

$$\text{Leaf} : \text{Tree} = 23 : 19$$




$$\text{Branch} : \text{Leaf} = 14 : 20 = 7 : 10$$

$$\text{Leaf} : \text{Branch} = 20 : 14 = 10 : 7$$



$$\text{Maple Leaf} : \text{Small Leaf} = 6 : 23$$

$$\text{Small Leaf} : \text{Maple Leaf} = 23 : 6$$



$$\text{Acorn} : \text{Tree} = 4 : 16 = 1 : 4$$

$$\text{Tree} : \text{Acorn} = 16 : 4 = 4 : 1$$