


Proporciones de Imágenes de Otoño (H)


Nombre: _____

Fecha: _____


Determine cada proporción y simplifique si es necesario.




$\text{acorn} : \text{leafy branch} =$
 $\text{leafy branch} : \text{acorn} =$



$\text{small tree} : \text{large tree} =$
 $\text{large tree} : \text{small tree} =$



$\text{large orange leaf} : \text{small yellow leaf} =$
 $\text{small yellow leaf} : \text{large orange leaf} =$




$\text{orange leaf} : \text{yellow leaf} =$
 $\text{yellow leaf} : \text{orange leaf} =$

Proporciones de Imágenes de Otoño (H) Respuestas

Nombre: _____

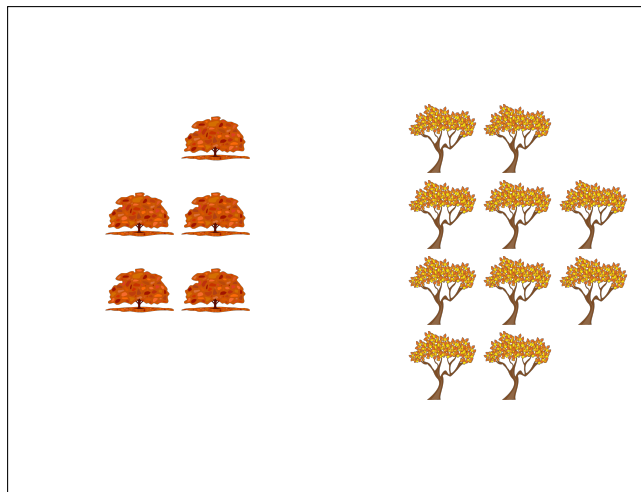
Fecha: _____

Determine cada proporción y simplifique si es necesario.




$$\text{acorn} : \text{leaf} = 10 : 16 = 5 : 8$$

$$\text{leaf} : \text{acorn} = 16 : 10 = 8 : 5$$



$$\text{orange tree} : \text{yellow tree} = 5 : 10 = 1 : 2$$

$$\text{yellow tree} : \text{orange tree} = 10 : 5 = 2 : 1$$



$$\text{orange leaf} : \text{yellow leaf} = 12 : 23$$

$$\text{yellow leaf} : \text{orange leaf} = 23 : 12$$



$$\text{orange leaf} : \text{yellow leaf} = 7 : 11$$

$$\text{yellow leaf} : \text{orange leaf} = 11 : 7$$