


Proporciones de Imágenes de Otoño (B)

Nombre: _____


Fecha: _____

Determine cada proporción y simplifique si es necesario.




$$\text{Branch} : \text{Leaf} =$$

$$\text{Leaf} : \text{Branch} =$$




$$\text{Acorn} : \text{Tree} =$$

$$\text{Tree} : \text{Acorn} =$$



$$\text{Leaf} : \text{Tree} =$$

$$\text{Tree} : \text{Leaf} =$$



$$\text{Yellow-green leaf} : \text{Orange leaf} =$$

$$\text{Orange leaf} : \text{Yellow-green leaf} =$$

Proporciones de Imágenes de Otoño (B) Respuestas

Nombre: _____


Fecha: _____

Determine cada proporción y simplifique si es necesario.




$$\text{hoja} : \text{bellota} = 20 : 15 = 4 : 3$$

$$\text{bellota} : \text{hoja} = 15 : 20 = 3 : 4$$




$$\text{bellota} : \text{árbol} = 18 : 14 = 9 : 7$$

$$\text{árbol} : \text{bellota} = 14 : 18 = 7 : 9$$



$$\text{hoja} : \text{árbol} = 13 : 14$$

$$\text{árbol} : \text{hoja} = 14 : 13$$



$$\text{hoja amarilla} : \text{hoja naranja} = 12 : 12 = 1 : 1$$

$$\text{hoja naranja} : \text{hoja amarilla} = 12 : 12 = 1 : 1$$