


Proporciones de Imágenes de Otoño (D)


Nombre: _____

Fecha: _____


Determine cada proporción y simplifique si es necesario.




$1 \text{ leaf} : 1 \text{ acorn} =$
 $1 \text{ acorn} : 1 \text{ leaf} =$



$1 \text{ yellow leaf} : 1 \text{ brown leaf} =$
 $1 \text{ brown leaf} : 1 \text{ yellow leaf} =$



$1 \text{ orange leaf} : 1 \text{ yellow leaf} =$
 $1 \text{ yellow leaf} : 1 \text{ orange leaf} =$




$1 \text{ orange tree} : 1 \text{ yellow tree} =$
 $1 \text{ yellow tree} : 1 \text{ orange tree} =$

Proporciones de Imágenes de Otoño (D) Respuestas

Nombre: _____


Fecha: _____

Determine cada proporción y simplifique si es necesario.




$$\text{🍂} : \text{🌰} = 9 : 8$$

$$\text{🌰} : \text{🍂} = 8 : 9$$




$$\text{🍁} : \text{🌿} = 12 : 9 = 4 : 3$$

$$\text{🌿} : \text{🍁} = 9 : 12 = 3 : 4$$



$$\text{🍂} : \text{🍁} = 5 : 9$$

$$\text{🍁} : \text{🍂} = 9 : 5$$



$$\text{🌳} : \text{🌳} = 25 : 22$$

$$\text{🌳} : \text{🌳} = 22 : 25$$