

Proporciones de Imágenes de Otoño (E)

Nombre: _____

Fecha: _____

Determine cada proporción y simplifique si es necesario.




$$\text{dark orange leaf} : \text{light orange leaf} =$$

$$\text{light orange leaf} : \text{dark orange leaf} =$$




$$\text{acorn} : \text{yellow tree} =$$

$$\text{yellow tree} : \text{acorn} =$$



$$\text{light yellow-green leaf} : \text{dark orange leaf} =$$

$$\text{dark orange leaf} : \text{light yellow-green leaf} =$$



$$\text{dark brown leaf} : \text{light yellow leaf} =$$

$$\text{light yellow leaf} : \text{dark brown leaf} =$$

Proporciones de Imágenes de Otoño (E) Respuestas

Nombre: _____


Fecha: _____

Determine cada proporción y simplifique si es necesario.




$$\text{árbol} : \text{hoja} = 14 : 19$$

$$\text{hoja} : \text{árbol} = 19 : 14$$



$$\text{bellota} : \text{árbol} = 3 : 10$$

$$\text{árbol} : \text{bellota} = 10 : 3$$



$$\text{hoja amarilla} : \text{hoja naranja} = 14 : 11$$

$$\text{hoja naranja} : \text{hoja amarilla} = 11 : 14$$



$$\text{hoja} : \text{flor} = 12 : 9 = 4 : 3$$

$$\text{flor} : \text{hoja} = 9 : 12 = 3 : 4$$