


Proporciones de Imágenes de Otoño (G)


Nombre: _____

Fecha: _____


Determine cada proporción y simplifique si es necesario.




$10 \text{ leaves} : 4 \text{ trees} =$
 $4 \text{ trees} : 10 \text{ leaves} =$



$10 \text{ orange leaves} : 10 \text{ yellow leaves} =$
 $10 \text{ yellow leaves} : 10 \text{ orange leaves} =$



$5 \text{ trees} : 15 \text{ leaves} =$
 $15 \text{ leaves} : 5 \text{ trees} =$




$10 \text{ leaves} : 10 \text{ acorns} =$
 $10 \text{ acorns} : 10 \text{ leaves} =$

Proporciones de Imágenes de Otoño (G) Respuestas

Nombre: _____


Fecha: _____

Determine cada proporción y simplifique si es necesario.




$$\text{leaf} : \text{tree} = 7 : 4$$

$$\text{tree} : \text{leaf} = 4 : 7$$




$$\text{orange leaf} : \text{yellow leaf} = 15 : 17$$

$$\text{yellow leaf} : \text{orange leaf} = 17 : 15$$



$$\text{tree} : \text{leaf} = 8 : 16 = 1 : 2$$

$$\text{leaf} : \text{tree} = 16 : 8 = 2 : 1$$



$$\text{leaf} : \text{acorn} = 12 : 9 = 4 : 3$$

$$\text{acorn} : \text{leaf} = 9 : 12 = 3 : 4$$