


# Proporciones de Imágenes de Otoño (H)

Nombre: \_\_\_\_\_

Fecha: \_\_\_\_\_

Determine cada proporción y simplifique si es necesario.




$$\text{acorn} : \text{leaf} =$$

$$\text{leaf} : \text{acorn} =$$



$$\text{orange leaf} : \text{yellow tree} =$$

$$\text{yellow tree} : \text{orange leaf} =$$



$$\text{green leaf} : \text{orange tree} =$$

$$\text{orange tree} : \text{green leaf} =$$



$$\text{orange leaf} : \text{yellow leaf} =$$


$$\text{yellow leaf} : \text{orange leaf} =$$

# Proporciones de Imágenes de Otoño (H) Respuestas

Nombre: \_\_\_\_\_


Fecha: \_\_\_\_\_

Determine cada proporción y simplifique si es necesario.




$$\text{acorn} : \text{leaf} = 17 : 19$$

$$\text{leaf} : \text{acorn} = 19 : 17$$



$$\text{orange leaf} : \text{yellow tree} = 12 : 17$$

$$\text{yellow tree} : \text{orange leaf} = 17 : 12$$



$$\text{green leaf} : \text{orange bush} = 11 : 9$$

$$\text{orange bush} : \text{green leaf} = 9 : 11$$



$$\text{yellow leaf} : \text{orange leaf} = 17 : 23$$

$$\text{orange leaf} : \text{yellow leaf} = 23 : 17$$