

# Proporciones de Imágenes de Otoño (J)

Nombre: \_\_\_\_\_


Fecha: \_\_\_\_\_

Determine cada proporción y simplifique si es necesario.




$$\text{leaf} : \text{leaf} =$$

$$\text{leaf} : \text{leaf} =$$




$$\text{tree} : \text{tree} =$$

$$\text{tree} : \text{tree} =$$



$$\text{tree} : \text{tree} =$$

$$\text{tree} : \text{tree} =$$



$$\text{acorn} : \text{acorn} =$$


$$\text{acorn} : \text{acorn} =$$

# Proporciones de Imágenes de Otoño (J) Respuestas

Nombre: \_\_\_\_\_

Fecha: \_\_\_\_\_

Determine cada proporción y simplifique si es necesario.




$$\text{🍂} : \text{🍁} = 6 : 14 = 3 : 7$$

$$\text{🍁} : \text{🍂} = 14 : 6 = 7 : 3$$




$$\text{🌰} : \text{🍃} = 8 : 11$$

$$\text{🍃} : \text{🌰} = 11 : 8$$



$$\text{🌳} : \text{🍂} = 19 : 12$$

$$\text{🍂} : \text{🌳} = 12 : 19$$



$$\text{🌰} : \text{🍂} = 14 : 10 = 7 : 5$$

$$\text{🍂} : \text{🌰} = 10 : 14 = 5 : 7$$