


Proporciones de Imágenes de Otoño (B)


Nombre: _____

Fecha: _____


Determine cada proporción y simplifique si es necesario.




$\text{Green leaf} : (\text{Orange leaf} + \text{Green leaf}) =$
 $\text{Orange leaf} : \text{Green leaf} =$



$\text{Orange leaf} : (\text{Yellow tree} + \text{Orange leaf}) =$
 $\text{Yellow tree} : \text{Orange leaf} =$



$\text{Orange leaf} : (\text{Acorn} + \text{Orange leaf}) =$
 $\text{Acorn} : \text{Orange leaf} =$



$\text{Orange tree} : (\text{Yellow leaf} + \text{Orange tree}) =$
 $\text{Yellow leaf} : \text{Orange tree} =$

Proporciones de Imágenes de Otoño (B) Respuestas

Nombre: _____


Fecha: _____

Determine cada proporción y simplifique si es necesario.




$$\text{🍃} : (\text{🍁} + \text{🍃}) = 9 : 18 = 1 : 2$$

$$\text{🍁} : \text{🍃} = 9 : 9 = 1 : 1$$



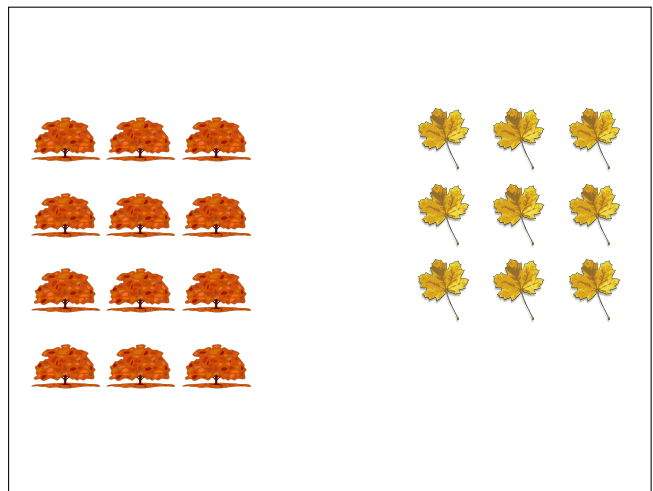
$$\text{🍁} : (\text{🌳} + \text{🍁}) = 20 : 31$$

$$\text{🌳} : \text{🍁} = 11 : 20$$



$$\text{🍁} : (\text{🌰} + \text{🍁}) = 6 : 20 = 3 : 10$$

$$\text{🌰} : \text{🍁} = 14 : 6 = 7 : 3$$



$$\text{🌳} : (\text{🍁} + \text{🌳}) = 12 : 21 = 4 : 7$$

$$\text{🍁} : \text{🌳} = 9 : 12 = 3 : 4$$