


Proporciones de Imágenes de Otoño (C)

Nombre: _____

Fecha: _____

Determine cada proporción y simplifique si es necesario.




$$\text{Maple Leaf} : (\text{Acorn} + \text{Maple Leaf}) =$$

$$\text{Acorn} : \text{Maple Leaf} =$$



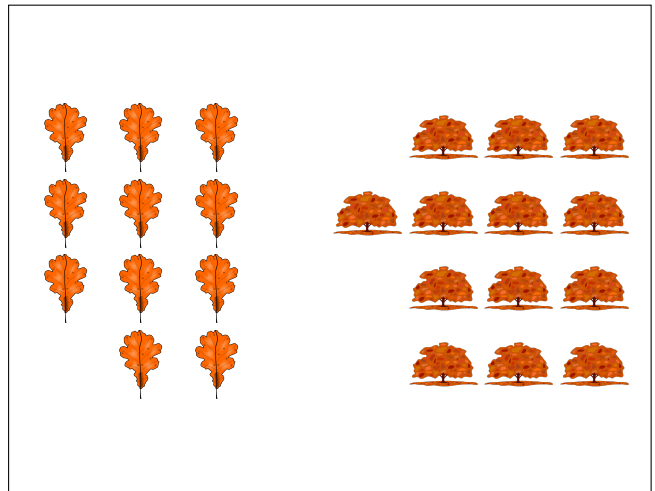
$$\text{Maple Leaf} : \text{Branch} =$$

$$\text{Branch} : (\text{Maple Leaf} + \text{Branch}) =$$



$$\text{Maple Leaf} : \text{Tree} =$$

$$\text{Tree} : (\text{Maple Leaf} + \text{Tree}) =$$



$$\text{Oak Leaf} : (\text{Tree} + \text{Oak Leaf}) =$$


$$\text{Tree} : \text{Oak Leaf} =$$

Proporciones de Imágenes de Otoño (C) Respuestas

Nombre: _____

Fecha: _____

Determine cada proporción y simplifique si es necesario.



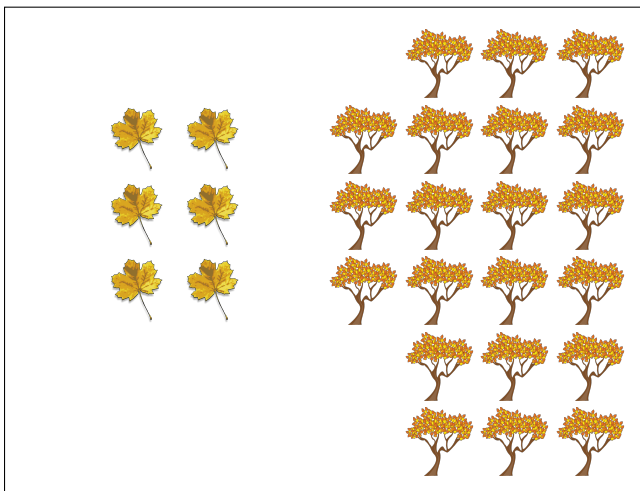
$$\text{🍁} : (\text{🌰} + \text{🍁}) = 5 : 11$$

$$\text{🌰} : \text{🍁} = 6 : 5$$



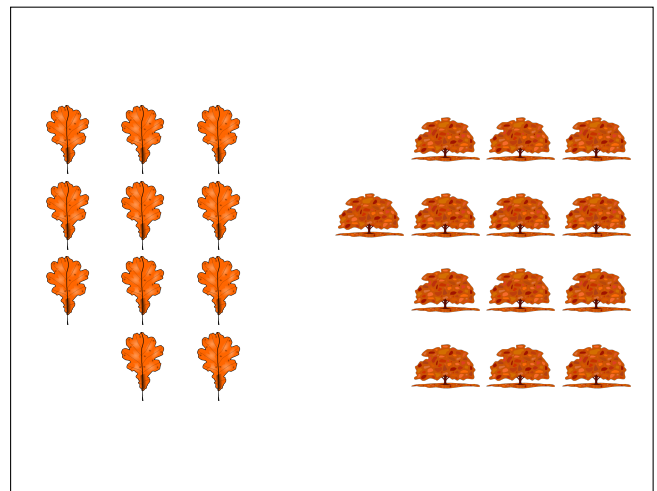
$$\text{🍁} : \text{🌿} = 11 : 11 = 1 : 1$$

$$\text{🌿} : (\text{🍁} + \text{🌿}) = 11 : 22 = 1 : 2$$



$$\text{🍁} : \text{🌳} = 6 : 21 = 2 : 7$$

$$\text{🌳} : (\text{🍁} + \text{🌳}) = 21 : 27 = 7 : 9$$



$$\text{🍂} : (\text{🌳} + \text{🍂}) = 11 : 24$$

$$\text{🌳} : \text{🍂} = 13 : 11$$