


Proporciones de Imágenes de Otoño (D)

Nombre: _____


Fecha: _____

Determine cada proporción y simplifique si es necesario.




$$\text{Yellow leaf} : \text{Orange tree} =$$

$$\text{Orange tree} : (\text{Yellow leaf} + \text{Orange tree}) =$$




$$\text{Yellow leaf} : (\text{Orange leaf} + \text{Yellow leaf}) =$$

$$\text{Orange leaf} : \text{Yellow leaf} =$$



$$\text{Orange leaf} : (\text{Acorn} + \text{Orange leaf}) =$$

$$\text{Acorn} : \text{Orange leaf} =$$



$$\text{Yellow tree} : (\text{Brown leaf} + \text{Yellow tree}) =$$

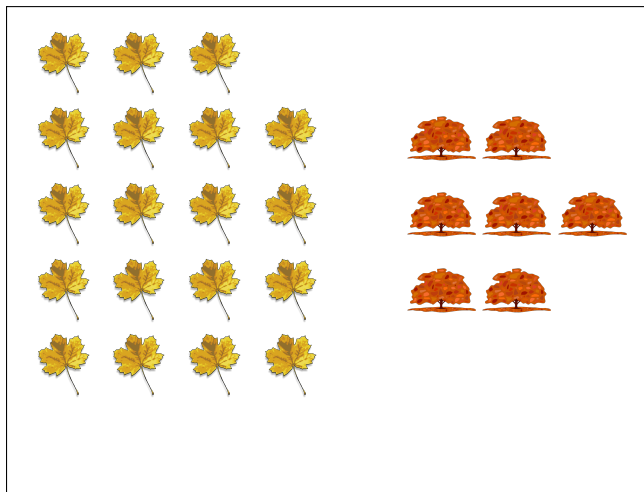
$$\text{Brown leaf} : \text{Yellow tree} =$$

Proporciones de Imágenes de Otoño (D) Respuestas

Nombre: _____


Fecha: _____

Determine cada proporción y simplifique si es necesario.




$$\text{Yellow Leaf} : \text{Orange Tree} = 19 : 7$$

$$\text{Orange Tree} : (\text{Yellow Leaf} + \text{Orange Tree}) = 7 : 26$$




$$\text{Yellow Leaf} : (\text{Orange Tree} + \text{Yellow Leaf}) = 21 : 34$$

$$\text{Orange Tree} : \text{Yellow Leaf} = 13 : 21$$



$$\text{Orange Leaf} : (\text{Acorn} + \text{Orange Leaf}) = 23 : 41$$

$$\text{Acorn} : \text{Orange Leaf} = 18 : 23$$



$$\text{Tree} : (\text{Leafy Branch} + \text{Tree}) = 17 : 32$$

$$\text{Leafy Branch} : \text{Tree} = 15 : 17$$