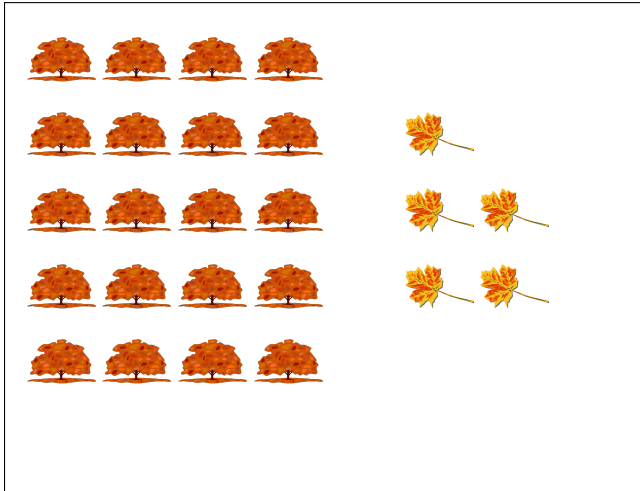


Proporciones de Imágenes de Otoño (F)

Nombre: _____

Fecha: _____

Determine cada proporción y simplifique si es necesario.



$$\text{tree} : \text{leaf} =$$

$$\text{leaf} : (\text{tree} + \text{leaf}) =$$




$$\text{leaf} : (\text{tree} + \text{leaf}) =$$

$$\text{tree} : \text{leaf} =$$



$$\text{acorn} : \text{leaf} =$$

$$\text{leaf} : (\text{acorn} + \text{leaf}) =$$



$$\text{yellow leaf} : (\text{orange leaf} + \text{yellow leaf}) =$$


$$\text{orange leaf} : \text{yellow leaf} =$$

Proporciones de Imágenes de Otoño (F) Respuestas

Nombre: _____

Fecha: _____

Determine cada proporción y simplifique si es necesario.



$$\text{Tree} : \text{Leaf} = 20 : 5 = 4 : 1$$

$$\text{Leaf} : (\text{Tree} + \text{Leaf}) = 5 : 25 = 1 : 5$$




$$\text{Leaf} : (\text{Tree} + \text{Leaf}) = 13 : 20$$

$$\text{Tree} : \text{Leaf} = 7 : 13$$



$$\text{Acorn} : \text{Leaf} = 14 : 20 = 7 : 10$$

$$\text{Leaf} : (\text{Acorn} + \text{Leaf}) = 20 : 34 = 10 : 17$$



$$\text{Yellow Leaf} : (\text{Orange Leaf} + \text{Yellow Leaf}) = 24 : 30 = 4 : 5$$

$$\text{Orange Leaf} : \text{Yellow Leaf} = 6 : 24 = 1 : 4$$