


# Proporciones de Imágenes de Otoño (G)

Nombre: \_\_\_\_\_


Fecha: \_\_\_\_\_

Determine cada proporción y simplifique si es necesario.



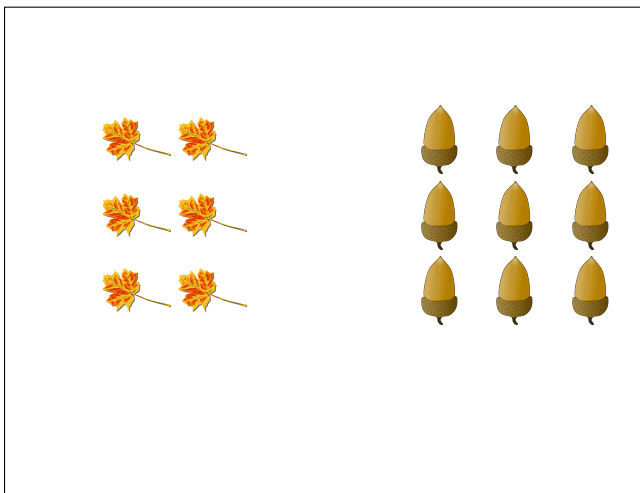
$$\text{leaf} : \text{tree} =$$

$$\text{tree} : (\text{leaf} + \text{tree}) =$$




$$\text{leaf} : \text{tree} =$$

$$\text{tree} : (\text{leaf} + \text{tree}) =$$



$$\text{leaf} : (\text{acorn} + \text{leaf}) =$$

$$\text{acorn} : \text{leaf} =$$



$$\text{leaf} : \text{branch} =$$

$$\text{branch} : (\text{leaf} + \text{branch}) =$$

# Proporciones de Imágenes de Otoño (G) Respuestas

Nombre: \_\_\_\_\_


Fecha: \_\_\_\_\_

Determine cada proporción y simplifique si es necesario.



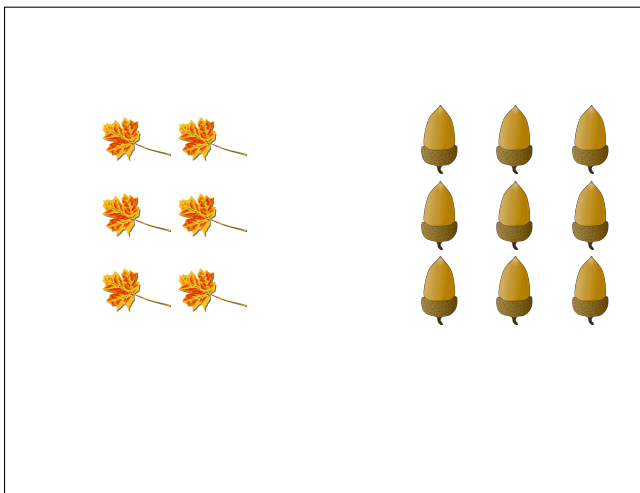
$$\text{🍂} : \text{🌳} = 17 : 9$$

$$\text{🌳} : (\text{🍂} + \text{🌳}) = 9 : 26$$




$$\text{🍂} : \text{🌳} = 15 : 21 = 5 : 7$$

$$\text{🌳} : (\text{🍂} + \text{🌳}) = 21 : 36 = 7 : 12$$



$$\text{🍂} : (\text{🌰} + \text{🍂}) = 6 : 15 = 2 : 5$$

$$\text{🌰} : \text{🍂} = 9 : 6 = 3 : 2$$



$$\text{🍂} : \text{🌿} = 19 : 8$$

$$\text{🌿} : (\text{🍂} + \text{🌿}) = 8 : 27$$